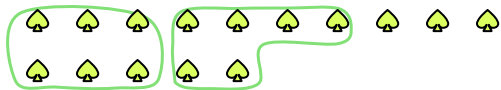





Use the shapes provided to answer the questions.

**Answers**

- Ex) There are 15 shapes below. How many groups of 6 can you make with them? How many will you have left over?



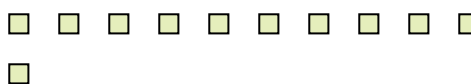
- 1) There are 30 shapes below. How many groups of 5 can you make with them? How many will you have left over?



- 2) There are 15 shapes below. How many groups of 7 can you make with them? How many will you have left over?



- 3) There are 11 shapes below. How many groups of 6 can you make with them? How many will you have left over?



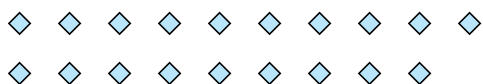
- 4) There are 16 shapes below. How many groups of 3 can you make with them? How many will you have left over?



- 5) There are 11 shapes below. How many groups of 2 can you make with them? How many will you have left over?




- 6) There are 19 shapes below. How many groups of 5 can you make with them? How many will you have left over?



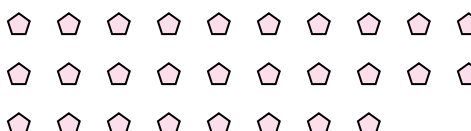
- 7) There are 13 shapes below. How many groups of 9 can you make with them? How many will you have left over?



- 8) There are 27 shapes below. How many groups of 9 can you make with them? How many will you have left over?



- 9) There are 28 shapes below. How many groups of 2 can you make with them? How many will you have left over?

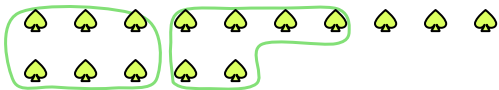


Ex.	<u>2</u>	<u>3</u>
1.	_____	_____
2.	_____	_____
3.	_____	_____
4.	_____	_____
5.	_____	_____
6.	_____	_____
7.	_____	_____
8.	_____	_____
9.	_____	_____




Use the shapes provided to answer the questions.

- Ex) There are 15 shapes below. How many groups of 6 can you make with them? How many will you have left over?



- 1) There are 30 shapes below. How many groups of 5 can you make with them? How many will you have left over?



- 2) There are 15 shapes below. How many groups of 7 can you make with them? How many will you have left over?



- 3) There are 11 shapes below. How many groups of 6 can you make with them? How many will you have left over?



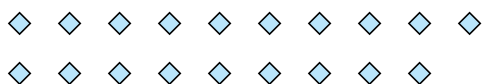
- 4) There are 16 shapes below. How many groups of 3 can you make with them? How many will you have left over?



- 5) There are 11 shapes below. How many groups of 2 can you make with them? How many will you have left over?




- 6) There are 19 shapes below. How many groups of 5 can you make with them? How many will you have left over?



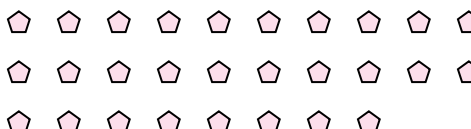
- 7) There are 13 shapes below. How many groups of 9 can you make with them? How many will you have left over?



- 8) There are 27 shapes below. How many groups of 9 can you make with them? How many will you have left over?



- 9) There are 28 shapes below. How many groups of 2 can you make with them? How many will you have left over?

**Answers**Ex. 2 31. 6 02. 2 13. 1 54. 5 15. 5 16. 3 47. 1 48. 3 09. 14 0