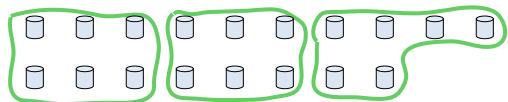




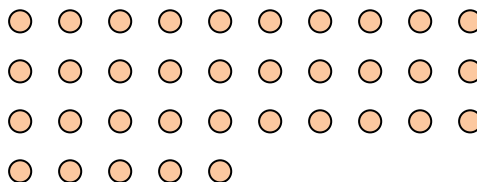


Use the shapes provided to answer the questions.

Ex) How many groups of 6 can you make with the 18 shapes below?



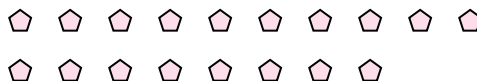
1) How many groups of 7 can you make with the 35 shapes below?




2) How many groups of 6 can you make with the 12 shapes below?



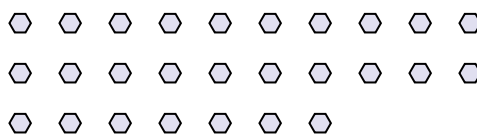
3) How many groups of 6 can you make with the 18 shapes below?




4) How many groups of 8 can you make with the 40 shapes below?




5) How many groups of 9 can you make with the 27 shapes below?



6) How many groups of 8 can you make with the 24 shapes below?




7) How many groups of 7 can you make with the 35 shapes below?



8) How many groups of 4 can you make with the 12 shapes below?



9) How many groups of 2 can you make with the 22 shapes below?



10) How many groups of 8 can you make with the 24 shapes below?



11) How many groups of 4 can you make with the 16 shapes below?



Answers

Ex. 3

1. 5

2. 2

3. 3

4. 5

5. 3

6. 3

7. 5

8. 3

9. 11

10. 3

11. 4