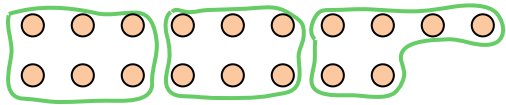



Use the shapes provided to answer the questions.

Ex) How many groups of 6 can you make with the 18 shapes below?

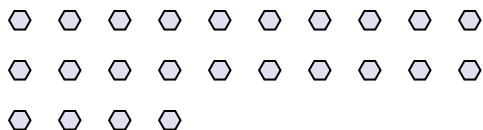


1) How many groups of 2 can you make with the 22 shapes below?

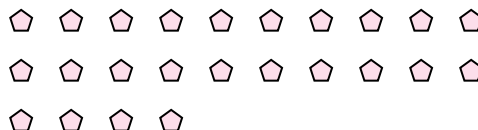


Ex. 3

2) How many groups of 8 can you make with the 24 shapes below?



3) How many groups of 8 can you make with the 24 shapes below?




4) How many groups of 2 can you make with the 40 shapes below?



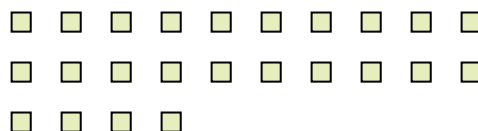
5) How many groups of 2 can you make with the 18 shapes below?




6) How many groups of 6 can you make with the 18 shapes below?



7) How many groups of 2 can you make with the 24 shapes below?




8) How many groups of 5 can you make with the 35 shapes below?



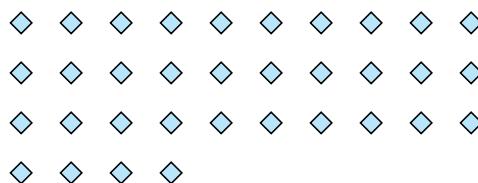
9) How many groups of 2 can you make with the 22 shapes below?



10) How many groups of 3 can you make with the 27 shapes below?



11) How many groups of 2 can you make with the 34 shapes below?



1. _____

2. _____

3.

4.

5.

6.

7.

8.

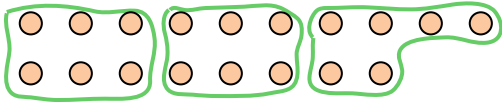
9.

10.


11.

Use the shapes provided to answer the questions.

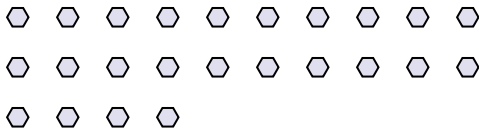
Ex) How many groups of 6 can you make with the 18 shapes below?



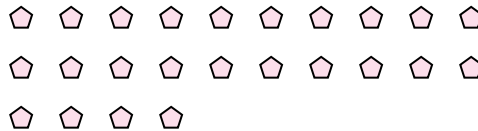
1) How many groups of 2 can you make with the 22 shapes below?



2) How many groups of 8 can you make with the 24 shapes below?



3) How many groups of 8 can you make with the 24 shapes below?



4) How many groups of 2 can you make with the 40 shapes below?



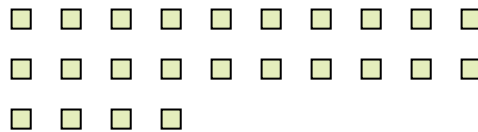
5) How many groups of 2 can you make with the 18 shapes below?




6) How many groups of 6 can you make with the 18 shapes below?



7) How many groups of 2 can you make with the 24 shapes below?




8) How many groups of 5 can you make with the 35 shapes below?




9) How many groups of 2 can you make with the 22 shapes below?



10) How many groups of 3 can you make with the 27 shapes below?



11) How many groups of 2 can you make with the 34 shapes below?



Answers

Ex. 3

1. 11

2. 3

3. 3

4. 20

5. 9

6. 3

7. 12

8. 7

9. 11

10. 9

11. **17**