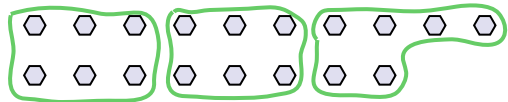




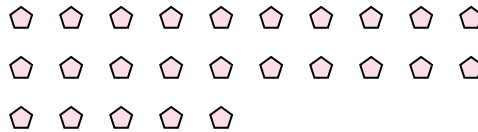
Use the shapes provided to answer the questions.

Answers

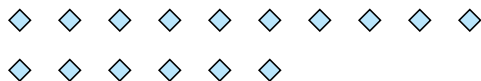
- Ex) How many groups of 6 can you make with the 18 shapes below?



- 1) How many groups of 5 can you make with the 25 shapes below?




- 2) How many groups of 4 can you make with the 16 shapes below?




- 3) How many groups of 2 can you make with the 14 shapes below?



- 4) How many groups of 4 can you make with the 28 shapes below?



- 5) How many groups of 9 can you make with the 36 shapes below?




- 6) How many groups of 9 can you make with the 27 shapes below?



- 7) How many groups of 6 can you make with the 30 shapes below?



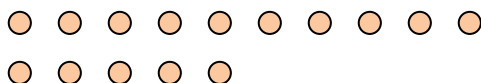
- 8) How many groups of 2 can you make with the 28 shapes below?




- 9) How many groups of 9 can you make with the 27 shapes below?



- 10) How many groups of 5 can you make with the 15 shapes below?



- 11) How many groups of 4 can you make with the 36 shapes below?

Ex. 3

1. _____

2. _____

3. _____

4. _____

5. _____

6. _____

7. _____

8. _____

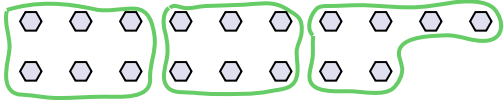
9. _____

10. _____

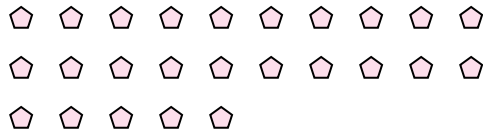
11. _____

Use the shapes provided to answer the questions.

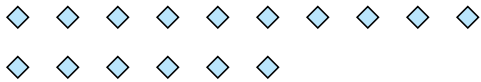
Ex) How many groups of 6 can you make with the 18 shapes below?



1) How many groups of 5 can you make with the 25 shapes below?




2) How many groups of 4 can you make with the 16 shapes below?




3) How many groups of 2 can you make with the 14 shapes below?



4) How many groups of 4 can you make with the 28 shapes below?



5) How many groups of 9 can you make with the 36 shapes below?



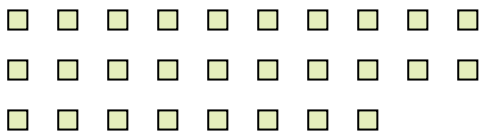
6) How many groups of 9 can you make with the 27 shapes below?




7) How many groups of 6 can you make with the 30 shapes below?



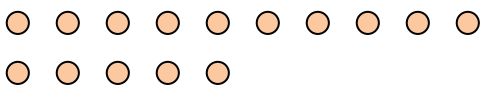
8) How many groups of 2 can you make with the 28 shapes below?




9) How many groups of 9 can you make with the 27 shapes below?



10) How many groups of 5 can you make with the 15 shapes below?



11) How many groups of 4 can you make with the 36 shapes below?



Answers

Ex. 3

1. 5

2. 4

3. 7

4. 7

5. 4

6. 3

7. 5

8. 14

9. 3

10. 3

11. 9