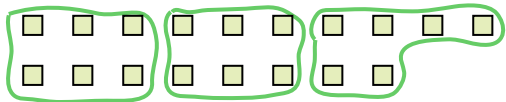



Use the shapes provided to answer the questions.

Ex) How many groups of 6 can you make with the 18 shapes below?




1) How many groups of 3 can you make with the 30 shapes below?



Answers

Ex. 3

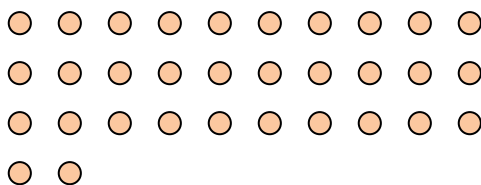
2) How many groups of 4 can you make with the 28 shapes below?



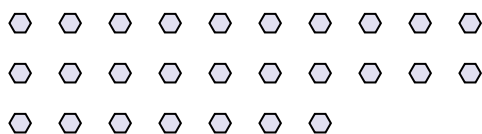
3) How many groups of 2 can you make with the 40 shapes below?



4) How many groups of 4 can you make with the 32 shapes below?




5) How many groups of 9 can you make with the 27 shapes below?




6) How many groups of 6 can you make with the 36 shapes below?



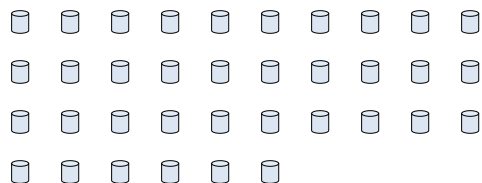
7) How many groups of 3 can you make with the 36 shapes below?



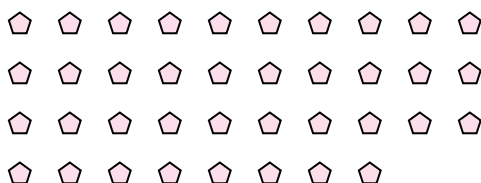
8) How many groups of 6 can you make with the 36 shapes below?



9) How many groups of 4 can you make with the 36 shapes below?



10) How many groups of 2 can you make with the 38 shapes below?



11) How many groups of 7 can you make with the 14 shapes below?



1. _____

2. _____

3. _____

4.

5.

6.

7.

8.

9.

10.

11.

