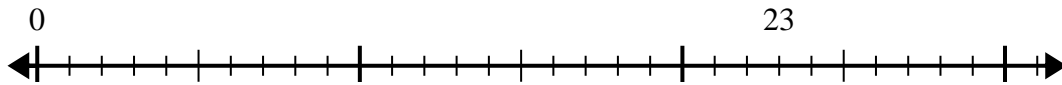


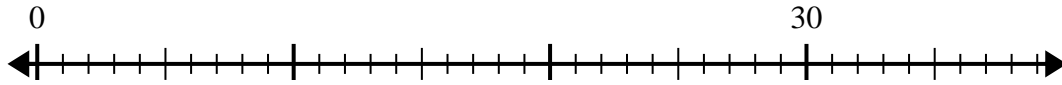


Use the number line to solve the division problem.

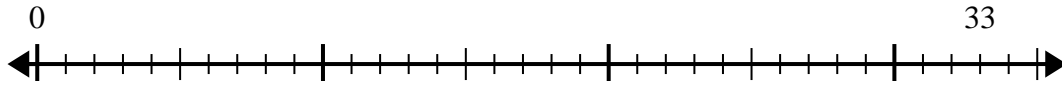
1)  $23 \div 5 =$



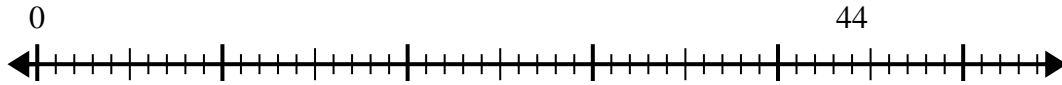
2)  $30 \div 4 =$



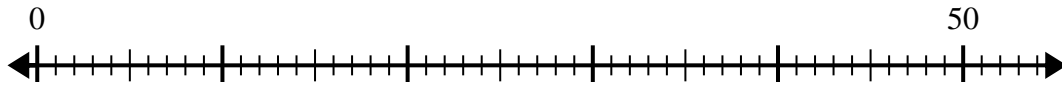
3)  $33 \div 6 =$



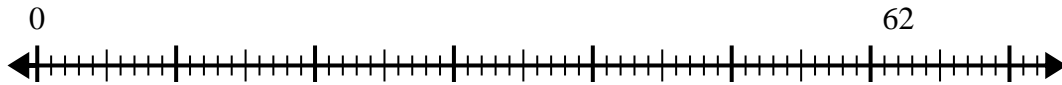
4)  $44 \div 6 =$



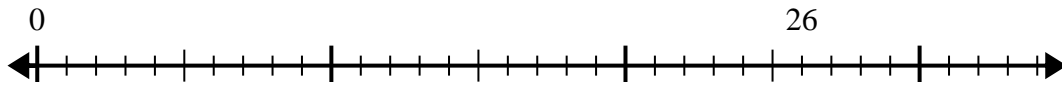
5)  $50 \div 6 =$



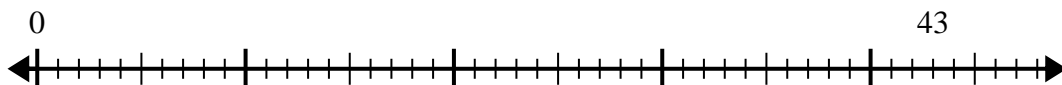
6)  $62 \div 8 =$



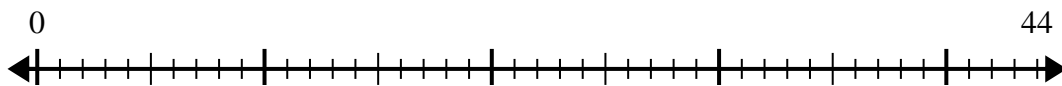
7)  $26 \div 6 =$



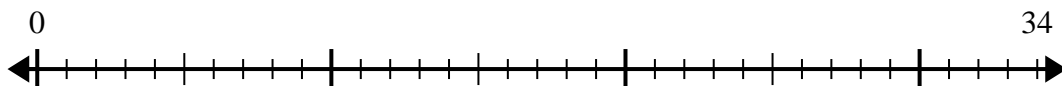
8)  $43 \div 8 =$



9)  $44 \div 7 =$



10)  $34 \div 4 =$



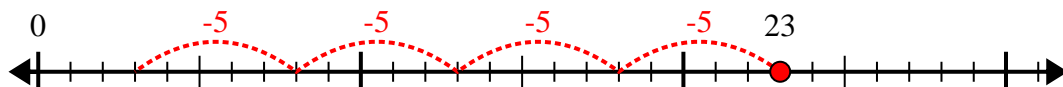
Answers

- 1. \_\_\_\_\_
- 2. \_\_\_\_\_
- 3. \_\_\_\_\_
- 4. \_\_\_\_\_
- 5. \_\_\_\_\_
- 6. \_\_\_\_\_
- 7. \_\_\_\_\_
- 8. \_\_\_\_\_
- 9. \_\_\_\_\_
- 10. \_\_\_\_\_

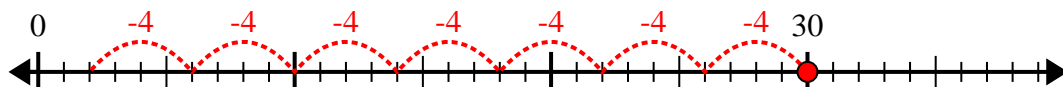


Use the number line to solve the division problem.

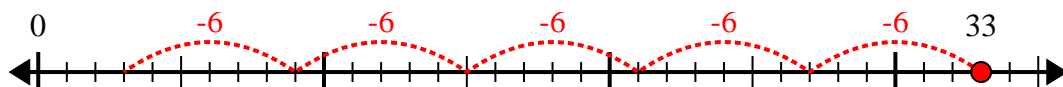
1)  $23 \div 5 =$



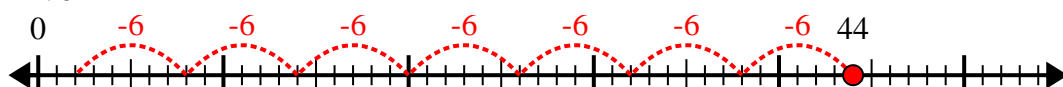
2)  $30 \div 4 =$



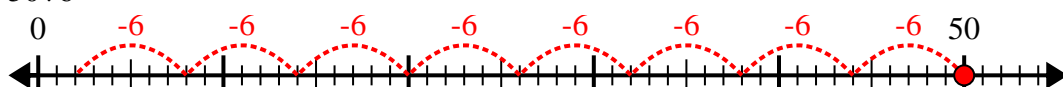
3)  $33 \div 6 =$



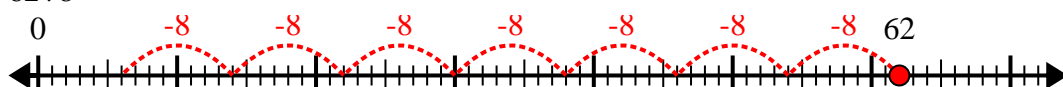
4)  $44 \div 6 =$



5)  $50 \div 6 =$



6)  $62 \div 8 =$



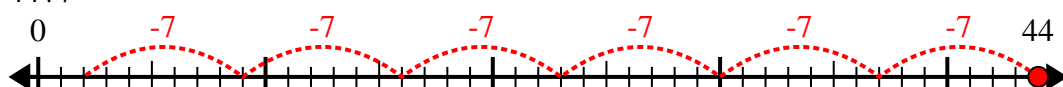
7)  $26 \div 6 =$



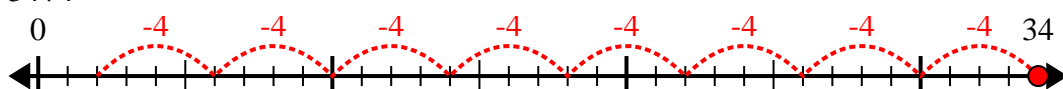
8)  $43 \div 8 =$



9)  $44 \div 7 =$



10)  $34 \div 4 =$



Answers

1. 4r3

2. 7r2

3. 5r3

4. 7r2

5. 8r2

6. 7r6

7. 4r2

8. 5r3

9. 6r2

10. 8r2