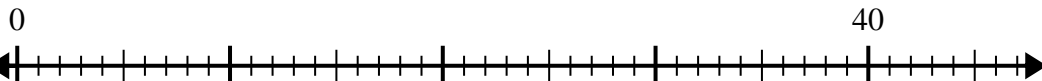




Use the number line to solve the division problem.

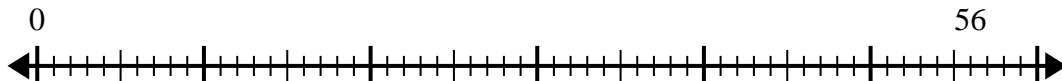
Answers

1) $40 \div 5 =$



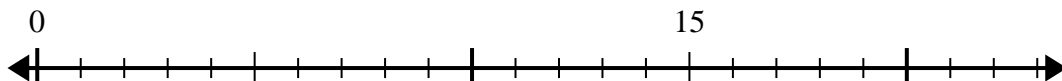
1. _____

2) $56 \div 7 =$



2. _____

3) $15 \div 5 =$



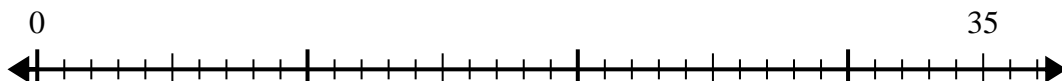
3. _____

4) $28 \div 4 =$



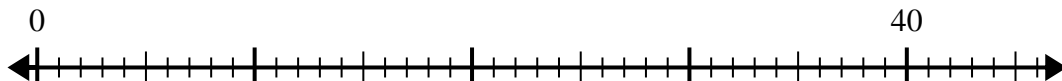
4. _____

5) $35 \div 7 =$



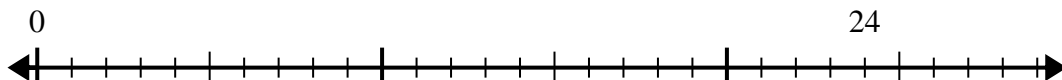
5. _____

6) $40 \div 8 =$



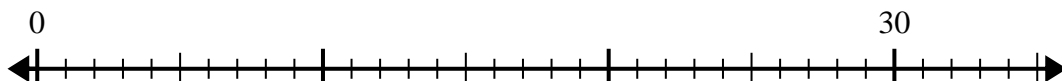
6. _____

7) $24 \div 4 =$



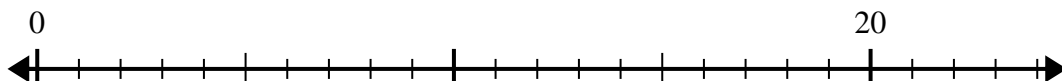
7. _____

8) $30 \div 5 =$



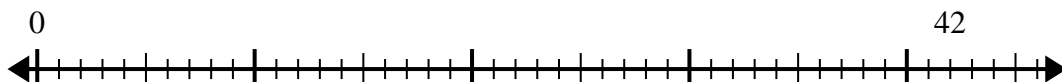
8. _____

9) $20 \div 4 =$



9. _____

10) $42 \div 6 =$

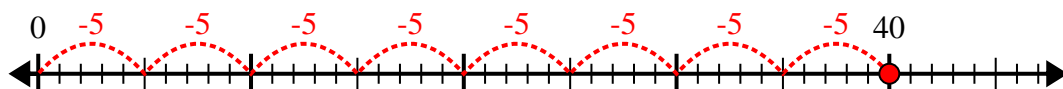


10. _____

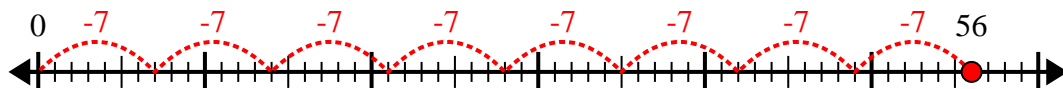


Use the number line to solve the division problem.

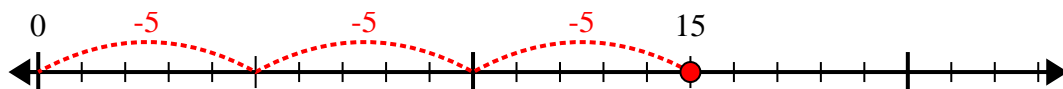
1) $40 \div 5 =$



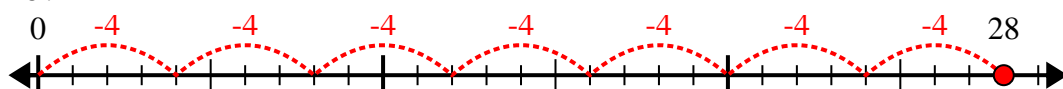
2) $56 \div 7 =$



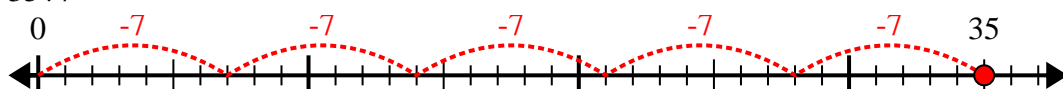
3) $15 \div 5 =$



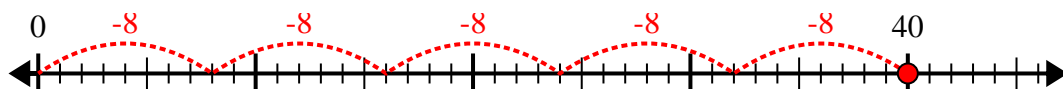
4) $28 \div 4 =$



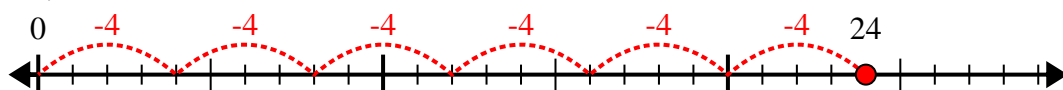
5) $35 \div 7 =$



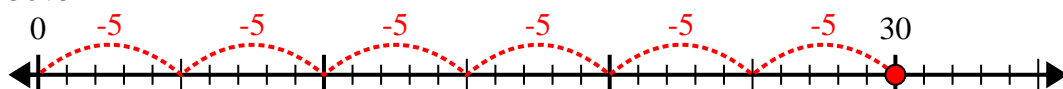
6) $40 \div 8 =$



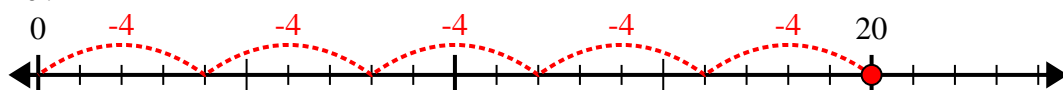
7) $24 \div 4 =$



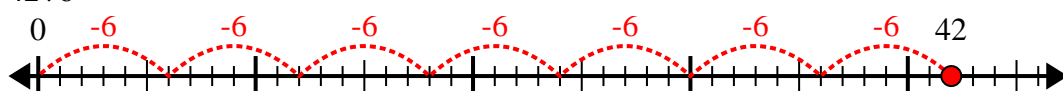
8) $30 \div 5 =$



9) $20 \div 4 =$



10) $42 \div 6 =$



Answers

1. 8

2. 8

3. 3

4. 7

5. 5

6. 5

7. 6

8. 6

9. 5

10. 7