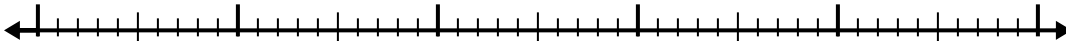


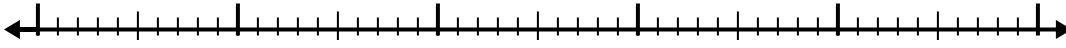


Use the number line to solve each problem.

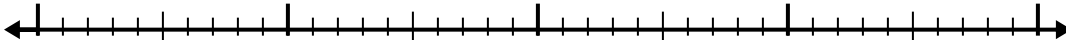
1) $8.6 - 3.8 =$



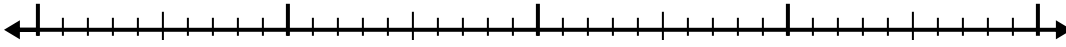
2) $8.8 - 2.7 =$



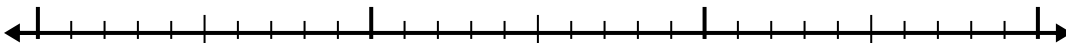
3) $6.8 - 1.3 =$



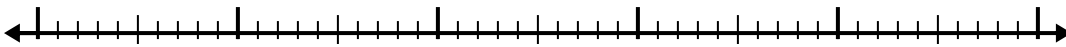
4) $5.2 - 2.4 =$



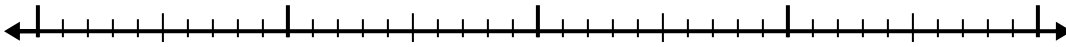
5) $2.7 - 1.3 =$




6) $7 - 2.4 =$



7) $10.5 - 2.5 =$



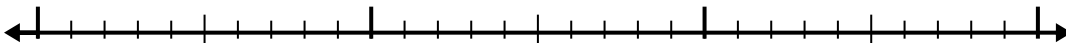
8) $12.3 - 3.8 =$



9) $4.2 - 2.7 =$



10) $3 - 1.3 =$



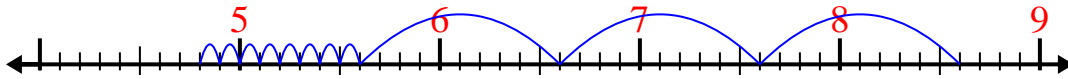
Answers

- 1. _____
- 2. _____
- 3. _____
- 4. _____
- 5. _____
- 6. _____
- 7. _____
- 8. _____
- 9. _____
- 10. _____

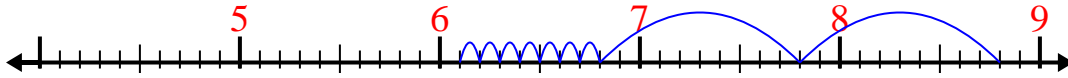


Use the number line to solve each problem.

1) $8.6 - 3.8 =$



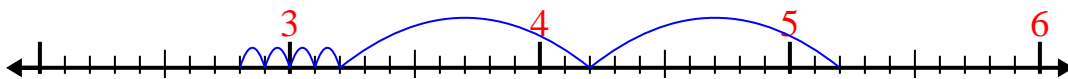
2) $8.8 - 2.7 =$



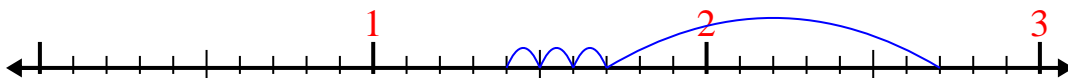
3) $6.8 - 1.3 =$



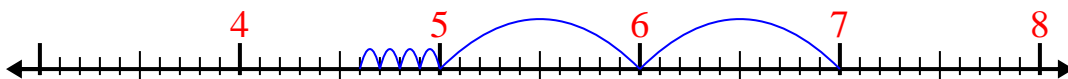
4) $5.2 - 2.4 =$



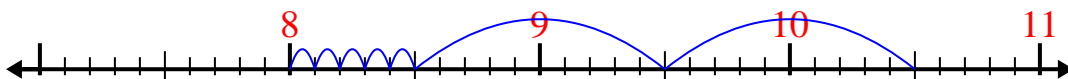
5) $2.7 - 1.3 =$



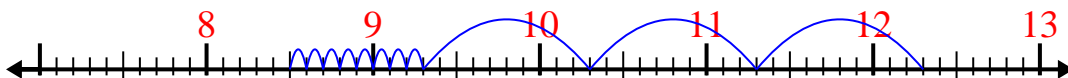
6) $7 - 2.4 =$



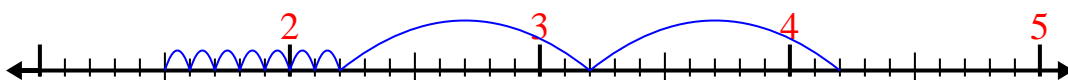
7) $10.5 - 2.5 =$



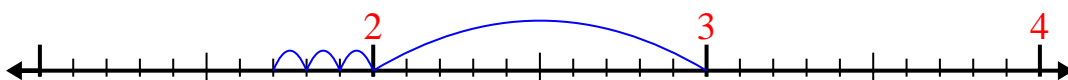
8) $12.3 - 3.8 =$



9) $4.2 - 2.7 =$



10) $3 - 1.3 =$

Answers1. 4.82. 6.13. 5.54. 2.85. 1.46. 4.67. 88. 8.59. 1.510. 1.7