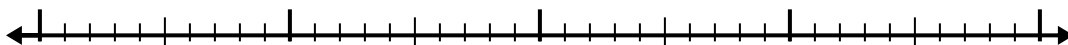


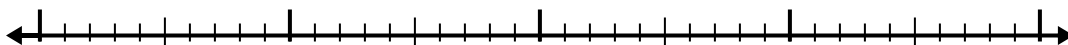


Use the number line to solve each problem.

1) $7.8 - 1.7 =$




2) $4.1 - 1.3 =$



3) $6.9 - 1.3 =$



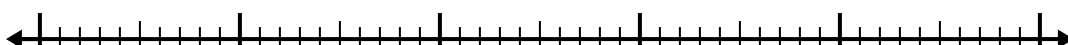
4) $11.2 - 3.7 =$



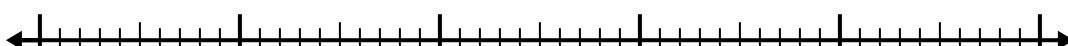
5) $10.7 - 2.9 =$



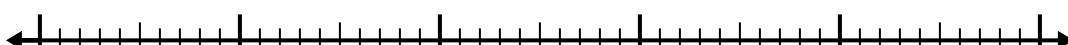
6) $5.9 - 2.5 =$



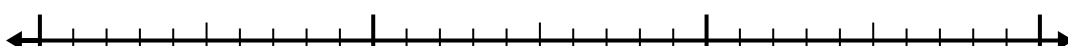
7) $9.4 - 2.7 =$



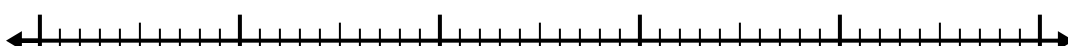
8) $5.4 - 3.3 =$



9) $2.7 - 1.7 =$



10) $6.1 - 3.1 =$



Answers

1. _____

2. _____

3. _____

4. _____

5. _____

6. _____

7. _____

8. _____

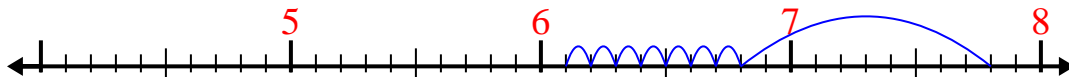
9. _____

10. _____

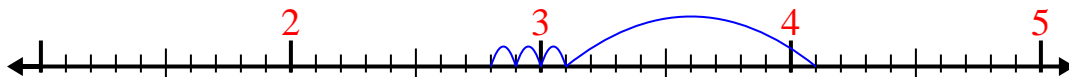


Use the number line to solve each problem.

1) $7.8 - 1.7 =$



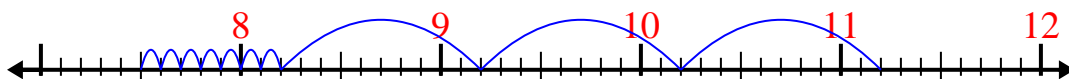
2) $4.1 - 1.3 =$



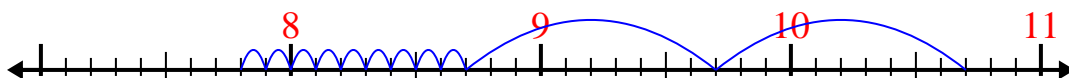
3) $6.9 - 1.3 =$



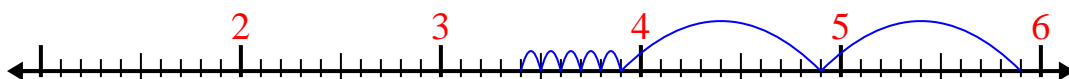
4) $11.2 - 3.7 =$



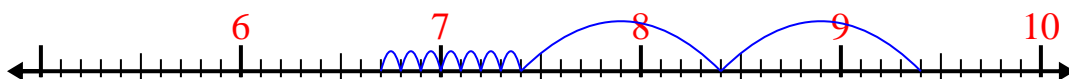
5) $10.7 - 2.9 =$



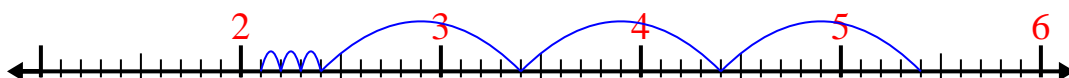
6) $5.9 - 2.5 =$



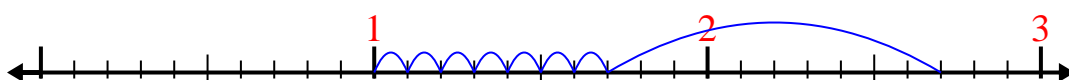
7) $9.4 - 2.7 =$



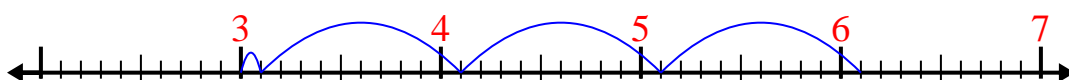
8) $5.4 - 3.3 =$



9) $2.7 - 1.7 =$



10) $6.1 - 3.1 =$



Answers

1. 6.1

2. 2.8

3. 5.6

4. 7.5

5. 7.8

6. 3.4

7. 6.7

8. 2.1

9. 1

10. 3