
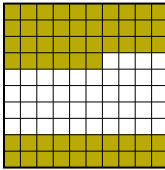






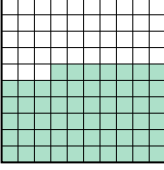

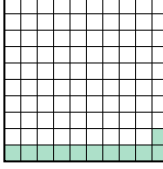

Put the boxes in order from least to greatest based on the shaded amount.

Answers

Ex) A  B  C  D 

small 0.12 - C
0.56 - B
0.7 - D
 large 0.8 - A

Ex. C,B,D,A

1) A  B  C  D 

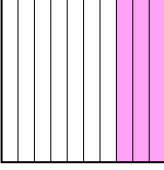
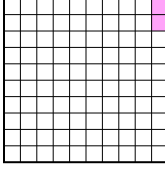
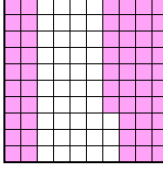
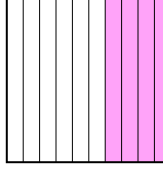
small _____

 large _____

1. _____

2. _____

3. _____

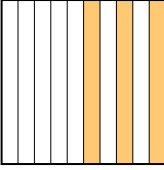
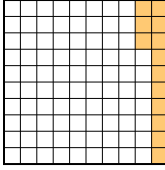
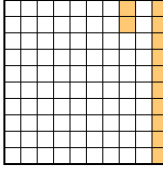
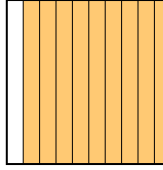
2) A  B  C  D 

small _____

 large _____

4. _____

5. _____

3) A  B  C  D 

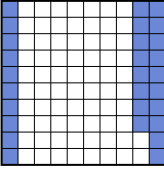
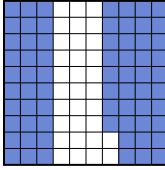
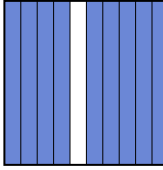
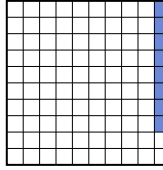
small _____

 large _____

6. _____





7. _____

8. _____

4) A  B  C  D 




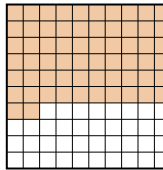
small _____

 large _____

5) A  B  C  D 


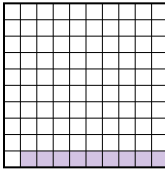

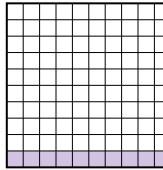
small _____

 large _____

6) A  B  C  D 



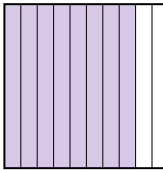
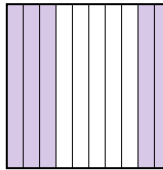
small _____

 large _____

7) A  B  C  D 

small _____

 large _____

8) A  B  C  D 

small _____

 large _____



Put the boxes in order from least to greatest based on the shaded amount.

Ex)	A	B	C	D	small <u>0.12 - C</u>
					<u>0.56 - B</u>
					<u>0.7 - D</u>
					large <u>0.8 - A</u>
1)	A	B	C	D	small <u>0.11 - C</u>
					<u>0.57 - A</u>
					<u>0.7 - D</u>
					large <u>0.9 - B</u>
2)	A	B	C	D	small <u>0.02 - B</u>
					<u>0.3 - A</u>
					<u>0.4 - D</u>
					large <u>0.57 - C</u>
3)	A	B	C	D	small <u>0.12 - C</u>
					<u>0.13 - B</u>
					<u>0.3 - A</u>
					large <u>0.9 - D</u>
4)	A	B	C	D	small <u>0.08 - D</u>
					<u>0.28 - A</u>
					<u>0.68 - B</u>
					large <u>0.9 - C</u>
5)	A	B	C	D	small <u>0.3 - D</u>
					<u>0.4 - C</u>
					<u>0.59 - B</u>
					large <u>0.9 - A</u>
6)	A	B	C	D	small <u>0.2 - C</u>
					<u>0.6 - B</u>
					<u>0.62 - D</u>
					large <u>0.9 - A</u>
7)	A	B	C	D	small <u>0.09 - B</u>
					<u>0.1 - C</u>
					<u>0.1 - C</u>
					large <u>0.6 - A</u>
8)	A	B	C	D	small <u>0.5 - D</u>
					<u>0.78 - B</u>
					<u>0.8 - C</u>
					large <u>0.98 - A</u>

Answers

- Ex. C,B,D,A
1. C,A,D,B
2. B,A,D,C
3. C,B,A,D
4. D,A,B,C
5. D,C,B,A
6. C,B,D,A
7. B,C,C,A
8. D,B,C,A