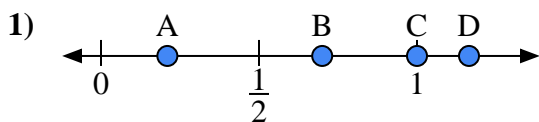


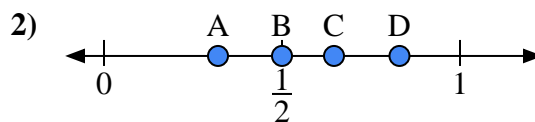


Use the number lines to answer the questions.

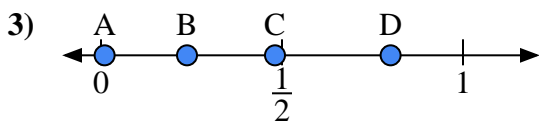
**Answers**



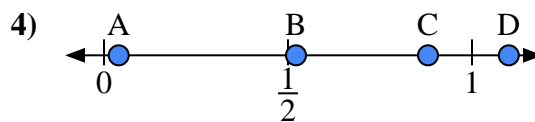
- a) Which letter best represents the location of 0.7?
- b) Which letter best represents the location of 0.21?



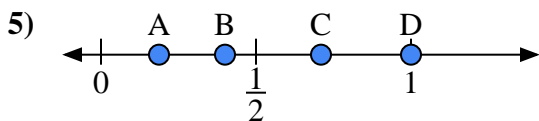
- a) Which letter best represents the location of 0.5?
- b) Which letter best represents the location of 0.83?



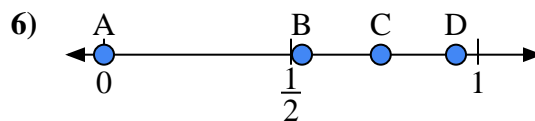
- a) Which letter best represents the location of 0.8?
- b) Which letter best represents the location of 0.01?



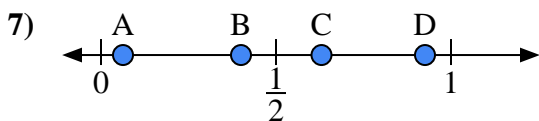
- a) Which letter best represents the location of 1.1?
- b) Which letter best represents the location of 0.04?



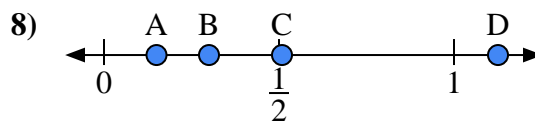
- a) Which letter best represents the location of 1.00?
- b) Which letter best represents the location of 0.40?



- a) Which letter best represents the location of 0.00?
- b) Which letter best represents the location of 0.74?



- a) Which letter best represents the location of 0.40?
- b) Which letter best represents the location of 0.63?

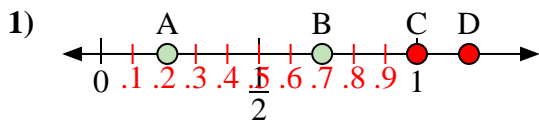


- a) Which letter best represents the location of 0.30?
- b) Which letter best represents the location of 0.15?

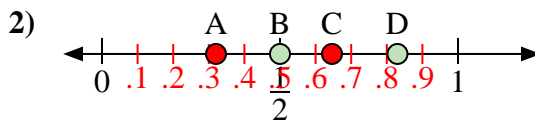
- 1. \_\_\_\_\_
- 2. \_\_\_\_\_
- 3. \_\_\_\_\_
- 4. \_\_\_\_\_
- 5. \_\_\_\_\_
- 6. \_\_\_\_\_
- 7. \_\_\_\_\_
- 8. \_\_\_\_\_



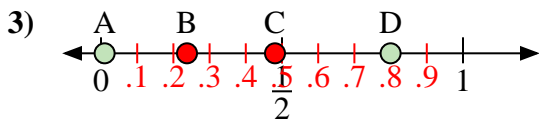
Use the number lines to answer the questions.



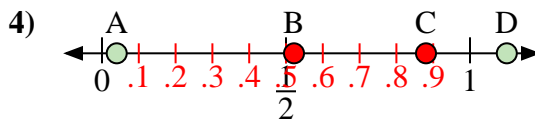
- a) Which letter best represents the location of 0.7?
- b) Which letter best represents the location of 0.21?



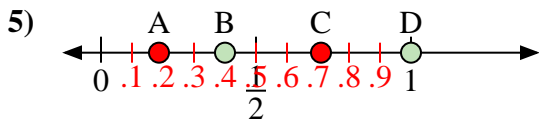
- a) Which letter best represents the location of 0.5?
- b) Which letter best represents the location of 0.83?



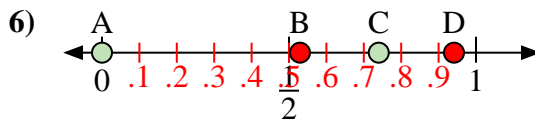
- a) Which letter best represents the location of 0.8?
- b) Which letter best represents the location of 0.01?



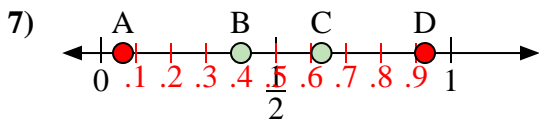
- a) Which letter best represents the location of 1.1?
- b) Which letter best represents the location of 0.04?



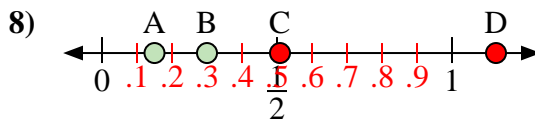
- a) Which letter best represents the location of 1.00?
- b) Which letter best represents the location of 0.40?



- a) Which letter best represents the location of 0.00?
- b) Which letter best represents the location of 0.74?



- a) Which letter best represents the location of 0.40?
- b) Which letter best represents the location of 0.63?



- a) Which letter best represents the location of 0.30?
- b) Which letter best represents the location of 0.15?

**Answers**

- 1. B A
- 2. B D
- 3. D A
- 4. D A
- 5. D B
- 6. A C
- 7. B C
- 8. B A