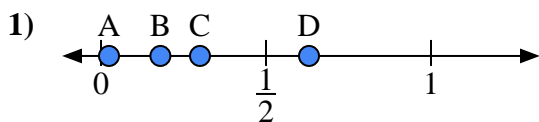


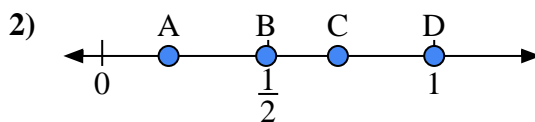


Use the number lines to answer the questions.

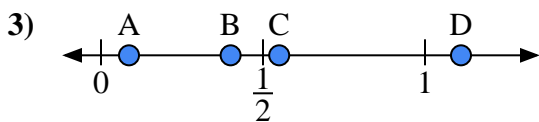
**Answers**



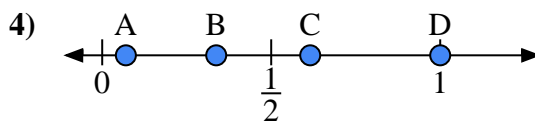
- a) Which letter best represents the location of 0.3?
- b) Which letter best represents the location of 0.18?



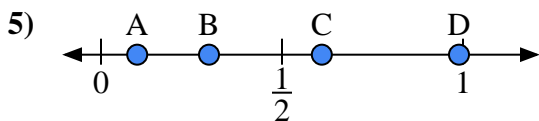
- a) Which letter best represents the location of 0.2?
- b) Which letter best represents the location of 0.71?



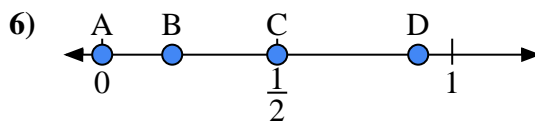
- a) Which letter best represents the location of 0.4?
- b) Which letter best represents the location of 0.55?



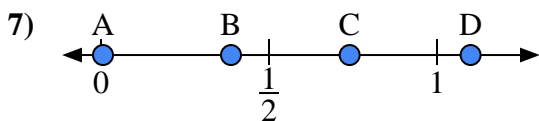
- a) Which letter best represents the location of 1.0?
- b) Which letter best represents the location of 0.07?



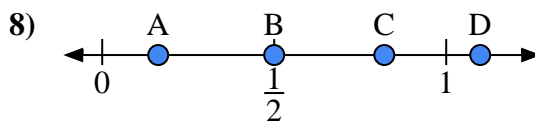
- a) Which letter best represents the location of 0.10?
- b) Which letter best represents the location of 0.61?



- a) Which letter best represents the location of 0.00?
- b) Which letter best represents the location of 0.50?



- a) Which letter best represents the location of 1.10?
- b) Which letter best represents the location of 0.74?

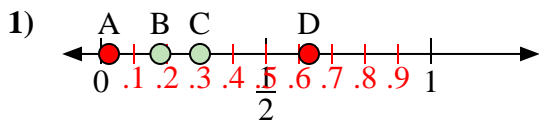


- a) Which letter best represents the location of 0.5?
- b) Which letter best represents the location of 0.82?

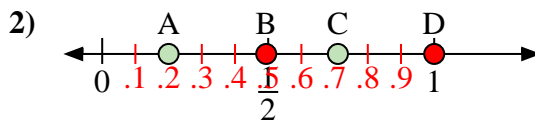
- 1. \_\_\_\_\_
- 2. \_\_\_\_\_
- 3. \_\_\_\_\_
- 4. \_\_\_\_\_
- 5. \_\_\_\_\_
- 6. \_\_\_\_\_
- 7. \_\_\_\_\_
- 8. \_\_\_\_\_



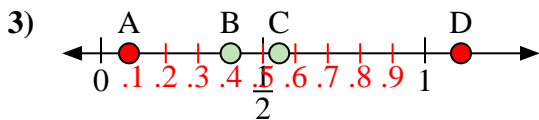
Use the number lines to answer the questions.



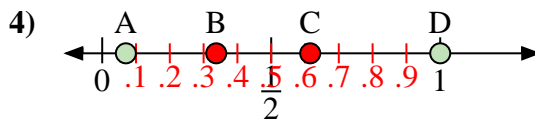
- a) Which letter best represents the location of 0.3?
- b) Which letter best represents the location of 0.18?



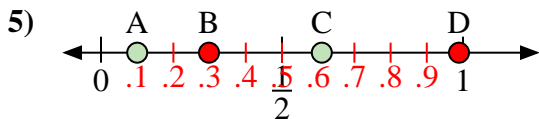
- a) Which letter best represents the location of 0.2?
- b) Which letter best represents the location of 0.71?



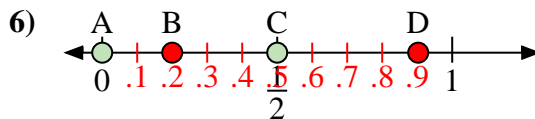
- a) Which letter best represents the location of 0.4?
- b) Which letter best represents the location of 0.55?



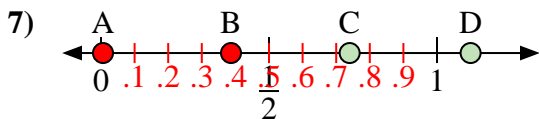
- a) Which letter best represents the location of 1.0?
- b) Which letter best represents the location of 0.07?



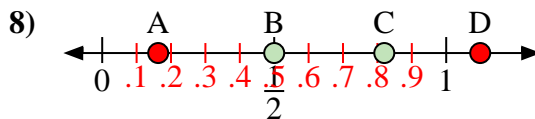
- a) Which letter best represents the location of 0.10?
- b) Which letter best represents the location of 0.61?



- a) Which letter best represents the location of 0.00?
- b) Which letter best represents the location of 0.50?



- a) Which letter best represents the location of 1.10?
- b) Which letter best represents the location of 0.74?



- a) Which letter best represents the location of 0.5?
- b) Which letter best represents the location of 0.82?

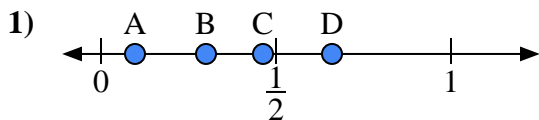
**Answers**

- 1. C B
- 2. A C
- 3. B C
- 4. D A
- 5. A C
- 6. A C
- 7. D C
- 8. B C

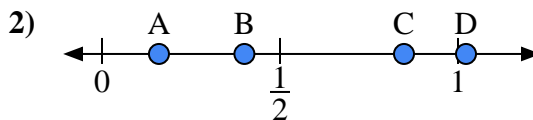


Use the number lines to answer the questions.

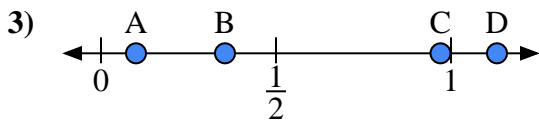
**Answers**



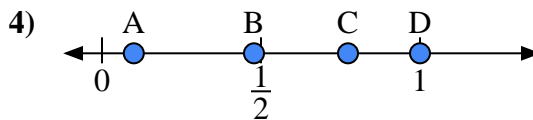
- a) Which letter best represents the location of 0.3?
- b) Which letter best represents the location of 0.66?



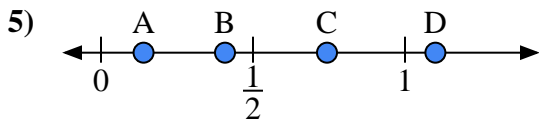
- a) Which letter best represents the location of 0.4?
- b) Which letter best represents the location of 0.16?



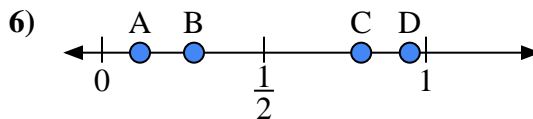
- a) Which letter best represents the location of 0.10?
- b) Which letter best represents the location of 0.97?



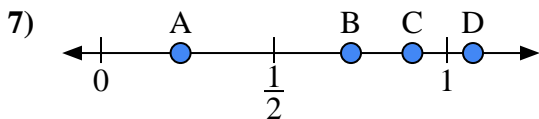
- a) Which letter best represents the location of 1.0?
- b) Which letter best represents the location of 0.10?



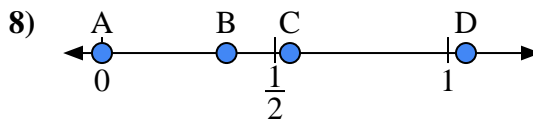
- a) Which letter best represents the location of 1.10?
- b) Which letter best represents the location of 0.14?



- a) Which letter best represents the location of 0.80?
- b) Which letter best represents the location of 0.95?



- a) Which letter best represents the location of 0.9?
- b) Which letter best represents the location of 0.23?

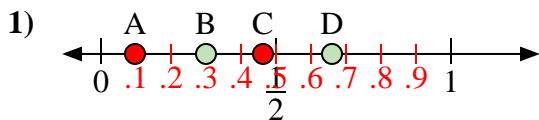


- a) Which letter best represents the location of 0.00?
- b) Which letter best represents the location of 0.36?

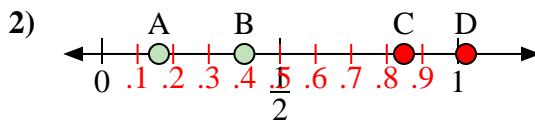
- 1. \_\_\_\_\_
- 2. \_\_\_\_\_
- 3. \_\_\_\_\_
- 4. \_\_\_\_\_
- 5. \_\_\_\_\_
- 6. \_\_\_\_\_
- 7. \_\_\_\_\_
- 8. \_\_\_\_\_



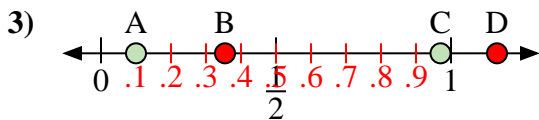
Use the number lines to answer the questions.



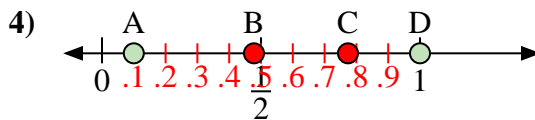
- a) Which letter best represents the location of 0.3?
- b) Which letter best represents the location of 0.66?



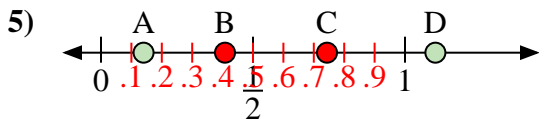
- a) Which letter best represents the location of 0.4?
- b) Which letter best represents the location of 0.16?



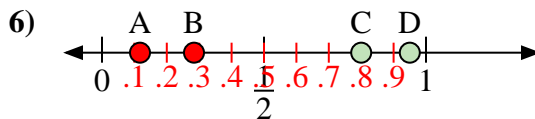
- a) Which letter best represents the location of 0.10?
- b) Which letter best represents the location of 0.97?



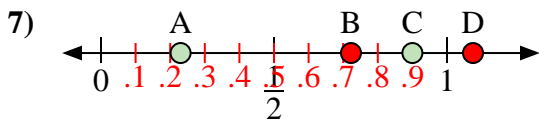
- a) Which letter best represents the location of 1.0?
- b) Which letter best represents the location of 0.10?



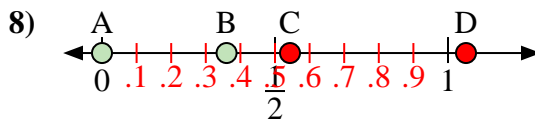
- a) Which letter best represents the location of 1.10?
- b) Which letter best represents the location of 0.14?



- a) Which letter best represents the location of 0.80?
- b) Which letter best represents the location of 0.95?



- a) Which letter best represents the location of 0.9?
- b) Which letter best represents the location of 0.23?



- a) Which letter best represents the location of 0.00?
- b) Which letter best represents the location of 0.36?

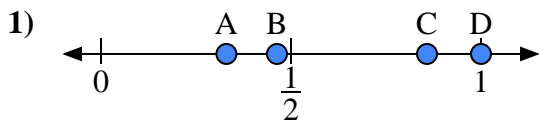
**Answers**

- 1.   B     D
- 2.   B     A
- 3.   A     C
- 4.   D     A
- 5.   D     A
- 6.   C     D
- 7.   C     A
- 8.   A     B

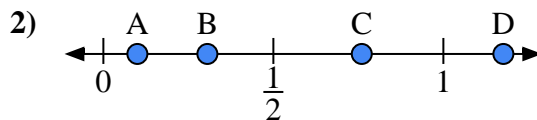


Use the number lines to answer the questions.

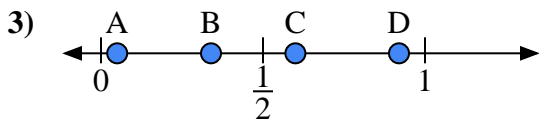
**Answers**



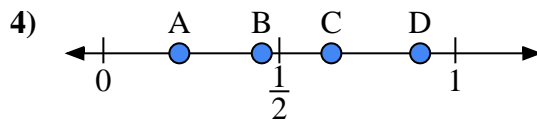
- a) Which letter best represents the location of 1.0?
- b) Which letter best represents the location of 0.33?



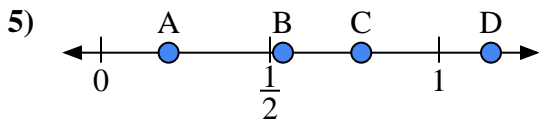
- a) Which letter best represents the location of 0.10?
- b) Which letter best represents the location of 0.76?



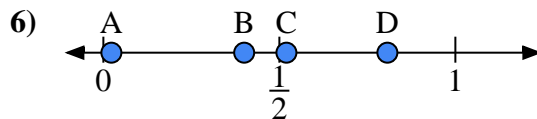
- a) Which letter best represents the location of 0.60?
- b) Which letter best represents the location of 0.05?



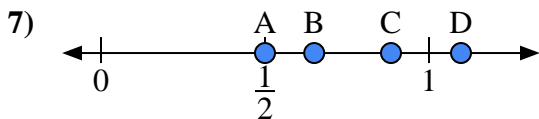
- a) Which letter best represents the location of 0.90?
- b) Which letter best represents the location of 0.45?



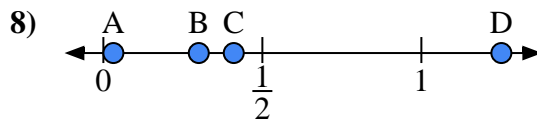
- a) Which letter best represents the location of 0.2?
- b) Which letter best represents the location of 0.77?



- a) Which letter best represents the location of 0.40?
- b) Which letter best represents the location of 0.52?



- a) Which letter best represents the location of 0.5?
- b) Which letter best represents the location of 0.65?

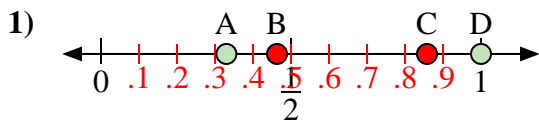


- a) Which letter best represents the location of 0.30?
- b) Which letter best represents the location of 0.41?

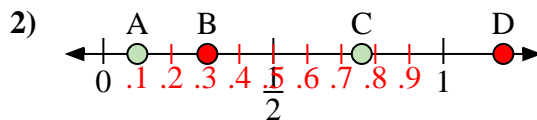
- 1. \_\_\_\_\_
- 2. \_\_\_\_\_
- 3. \_\_\_\_\_
- 4. \_\_\_\_\_
- 5. \_\_\_\_\_
- 6. \_\_\_\_\_
- 7. \_\_\_\_\_
- 8. \_\_\_\_\_



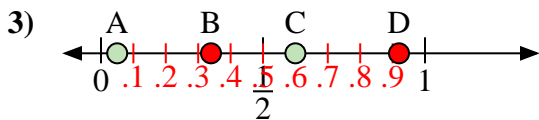
Use the number lines to answer the questions.



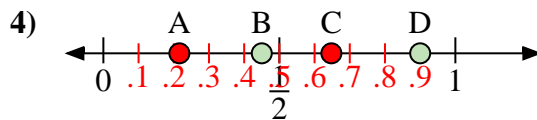
- a) Which letter best represents the location of 1.0?
- b) Which letter best represents the location of 0.33?



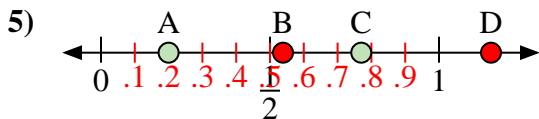
- a) Which letter best represents the location of 0.10?
- b) Which letter best represents the location of 0.76?



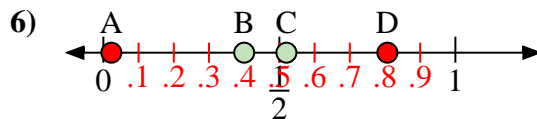
- a) Which letter best represents the location of 0.60?
- b) Which letter best represents the location of 0.05?



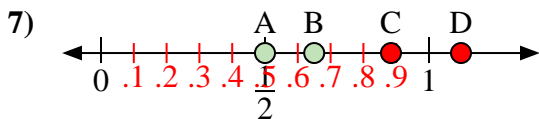
- a) Which letter best represents the location of 0.90?
- b) Which letter best represents the location of 0.45?



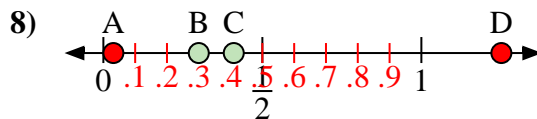
- a) Which letter best represents the location of 0.2?
- b) Which letter best represents the location of 0.77?



- a) Which letter best represents the location of 0.40?
- b) Which letter best represents the location of 0.52?



- a) Which letter best represents the location of 0.5?
- b) Which letter best represents the location of 0.65?



- a) Which letter best represents the location of 0.30?
- b) Which letter best represents the location of 0.41?

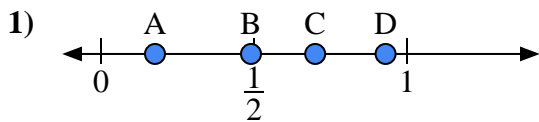
**Answers**

- 1. D A
- 2. A C
- 3. C A
- 4. D B
- 5. A C
- 6. B C
- 7. A B
- 8. B C

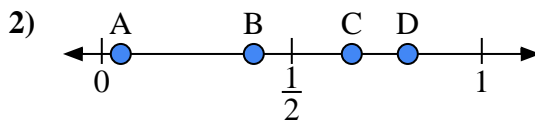


Use the number lines to answer the questions.

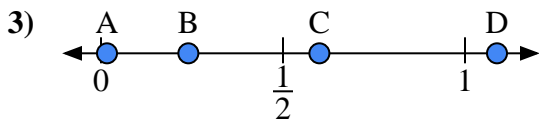
**Answers**



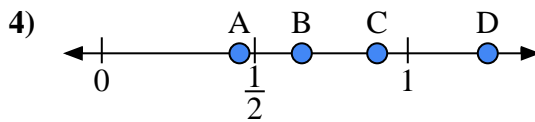
- a) Which letter best represents the location of 0.7?
- b) Which letter best represents the location of 0.93?



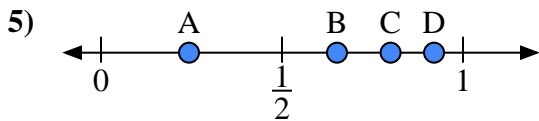
- a) Which letter best represents the location of 0.40?
- b) Which letter best represents the location of 0.05?



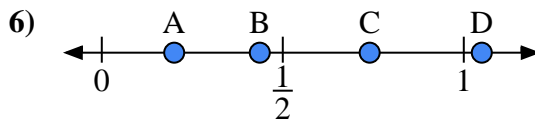
- a) Which letter best represents the location of 0.60?
- b) Which letter best represents the location of 0.24?



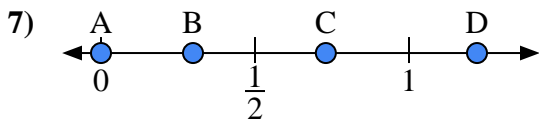
- a) Which letter best represents the location of 0.90?
- b) Which letter best represents the location of 0.45?



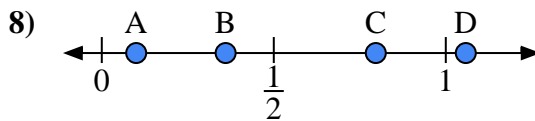
- a) Which letter best represents the location of 0.8?
- b) Which letter best represents the location of 0.92?



- a) Which letter best represents the location of 0.20?
- b) Which letter best represents the location of 0.74?



- a) Which letter best represents the location of 0.00?
- b) Which letter best represents the location of 0.73?

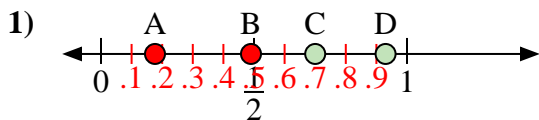


- a) Which letter best represents the location of 0.1?
- b) Which letter best represents the location of 0.36?

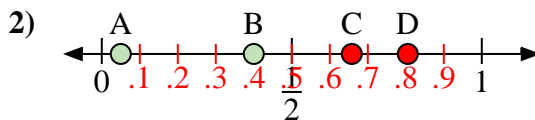
- 1. \_\_\_\_\_
- 2. \_\_\_\_\_
- 3. \_\_\_\_\_
- 4. \_\_\_\_\_
- 5. \_\_\_\_\_
- 6. \_\_\_\_\_
- 7. \_\_\_\_\_
- 8. \_\_\_\_\_



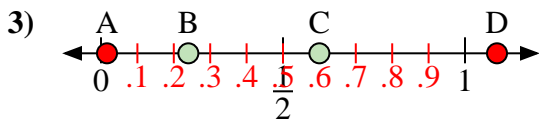
Use the number lines to answer the questions.



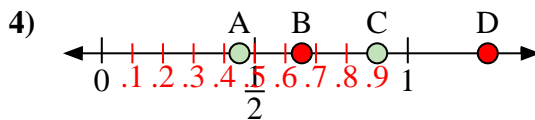
- a) Which letter best represents the location of 0.7?
- b) Which letter best represents the location of 0.93?



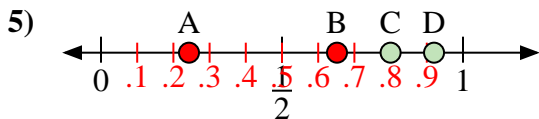
- a) Which letter best represents the location of 0.40?
- b) Which letter best represents the location of 0.05?



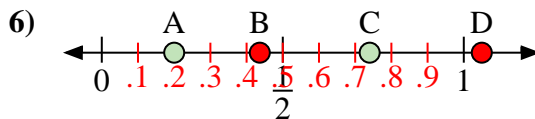
- a) Which letter best represents the location of 0.60?
- b) Which letter best represents the location of 0.24?



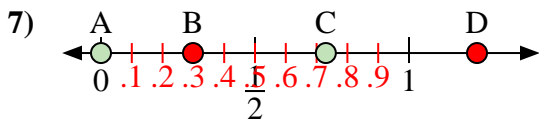
- a) Which letter best represents the location of 0.90?
- b) Which letter best represents the location of 0.45?



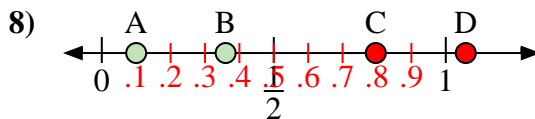
- a) Which letter best represents the location of 0.8?
- b) Which letter best represents the location of 0.92?



- a) Which letter best represents the location of 0.20?
- b) Which letter best represents the location of 0.74?



- a) Which letter best represents the location of 0.00?
- b) Which letter best represents the location of 0.73?



- a) Which letter best represents the location of 0.1?
- b) Which letter best represents the location of 0.36?

**Answers**

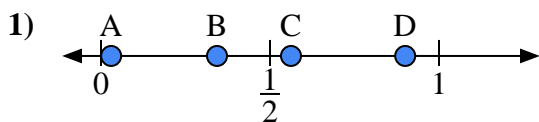
- 1. C D
- 2. B A
- 3. C B
- 4. C A
- 5. C D
- 6. A C
- 7. A C
- 8. A B



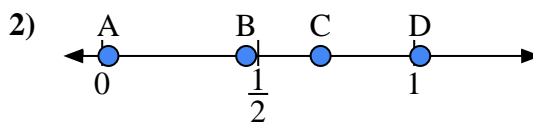


Use the number lines to answer the questions.

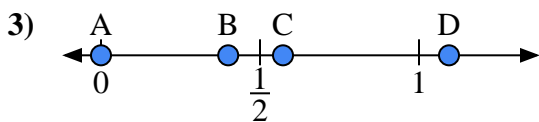
**Answers**



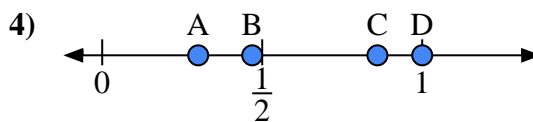
- a) Which letter best represents the location of 0.9?
- b) Which letter best represents the location of 0.03?



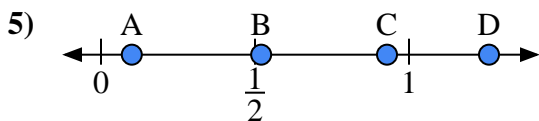
- a) Which letter best represents the location of 0.7?
- b) Which letter best represents the location of 0.02?



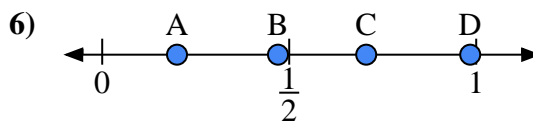
- a) Which letter best represents the location of 0.00?
- b) Which letter best represents the location of 0.40?



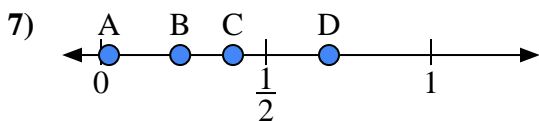
- a) Which letter best represents the location of 1.0?
- b) Which letter best represents the location of 0.86?



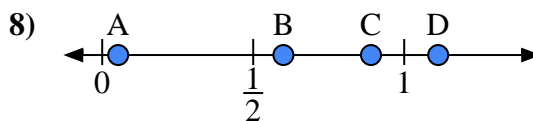
- a) Which letter best represents the location of 0.10?
- b) Which letter best represents the location of 0.52?



- a) Which letter best represents the location of 0.2?
- b) Which letter best represents the location of 0.47?



- a) Which letter best represents the location of 0.4?
- b) Which letter best represents the location of 0.24?

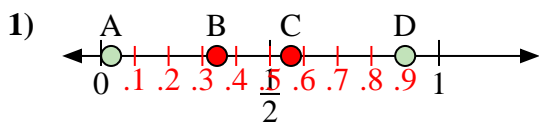


- a) Which letter best represents the location of 0.60?
- b) Which letter best represents the location of 0.89?

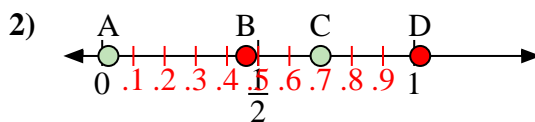
- 1. \_\_\_\_\_
- 2. \_\_\_\_\_
- 3. \_\_\_\_\_
- 4. \_\_\_\_\_
- 5. \_\_\_\_\_
- 6. \_\_\_\_\_
- 7. \_\_\_\_\_
- 8. \_\_\_\_\_



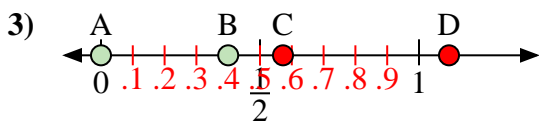
Use the number lines to answer the questions.



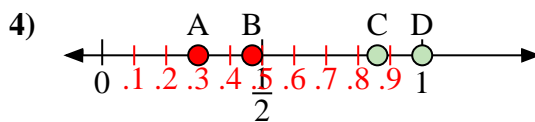
- a) Which letter best represents the location of 0.9?
- b) Which letter best represents the location of 0.03?



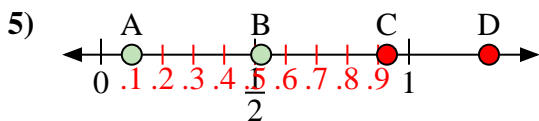
- a) Which letter best represents the location of 0.7?
- b) Which letter best represents the location of 0.02?



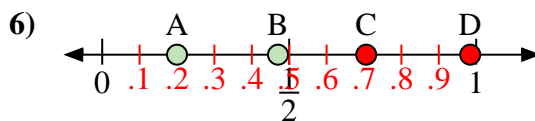
- a) Which letter best represents the location of 0.00?
- b) Which letter best represents the location of 0.40?



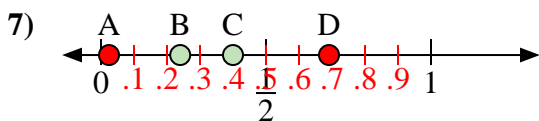
- a) Which letter best represents the location of 1.0?
- b) Which letter best represents the location of 0.86?



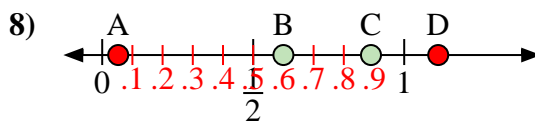
- a) Which letter best represents the location of 0.10?
- b) Which letter best represents the location of 0.52?



- a) Which letter best represents the location of 0.2?
- b) Which letter best represents the location of 0.47?



- a) Which letter best represents the location of 0.4?
- b) Which letter best represents the location of 0.24?



- a) Which letter best represents the location of 0.60?
- b) Which letter best represents the location of 0.89?

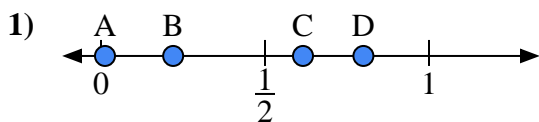
**Answers**

- 1. D A
- 2. C A
- 3. A B
- 4. D C
- 5. A B
- 6. A B
- 7. C B
- 8. B C

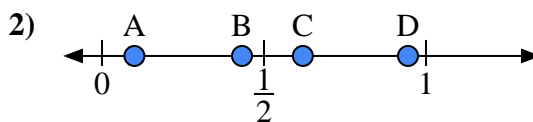


Use the number lines to answer the questions.

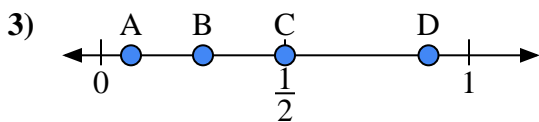
**Answers**



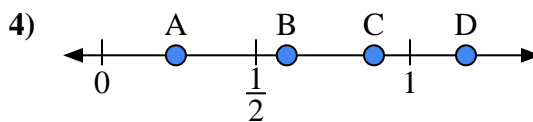
- a) Which letter best represents the location of 0.80?
- b) Which letter best represents the location of 0.22?



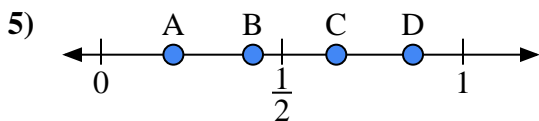
- a) Which letter best represents the location of 0.1?
- b) Which letter best represents the location of 0.62?



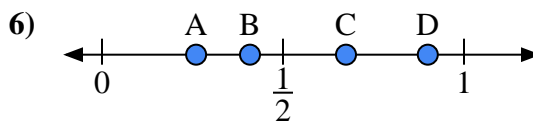
- a) Which letter best represents the location of 0.5?
- b) Which letter best represents the location of 0.89?



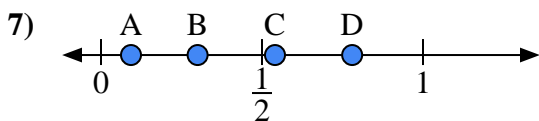
- a) Which letter best represents the location of 0.6?
- b) Which letter best represents the location of 0.24?



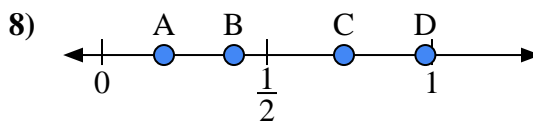
- a) Which letter best represents the location of 0.20?
- b) Which letter best represents the location of 0.65?



- a) Which letter best represents the location of 0.90?
- b) Which letter best represents the location of 0.26?



- a) Which letter best represents the location of 0.3?
- b) Which letter best represents the location of 0.78?

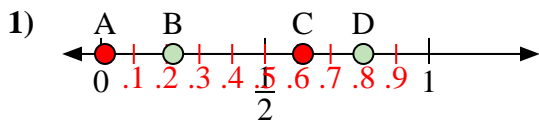


- a) Which letter best represents the location of 0.40?
- b) Which letter best represents the location of 0.98?

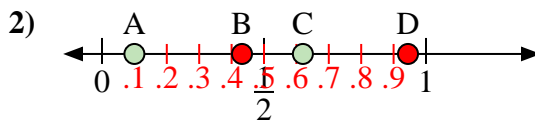
- 1. \_\_\_\_\_
- 2. \_\_\_\_\_
- 3. \_\_\_\_\_
- 4. \_\_\_\_\_
- 5. \_\_\_\_\_
- 6. \_\_\_\_\_
- 7. \_\_\_\_\_
- 8. \_\_\_\_\_



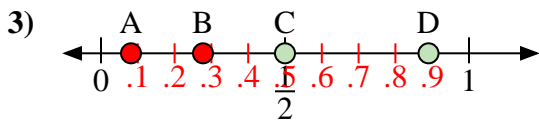
Use the number lines to answer the questions.



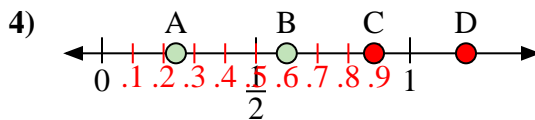
- a) Which letter best represents the location of 0.80?
- b) Which letter best represents the location of 0.22?



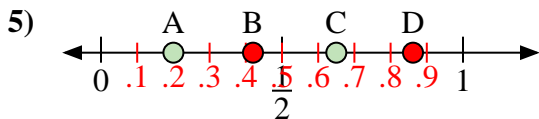
- a) Which letter best represents the location of 0.1?
- b) Which letter best represents the location of 0.62?



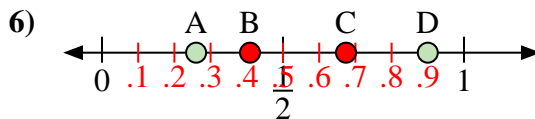
- a) Which letter best represents the location of 0.5?
- b) Which letter best represents the location of 0.89?



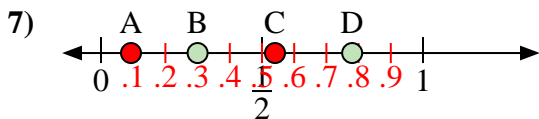
- a) Which letter best represents the location of 0.6?
- b) Which letter best represents the location of 0.24?



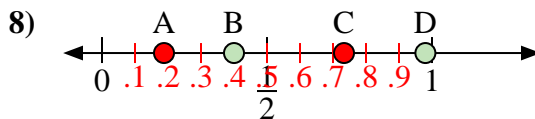
- a) Which letter best represents the location of 0.20?
- b) Which letter best represents the location of 0.65?



- a) Which letter best represents the location of 0.90?
- b) Which letter best represents the location of 0.26?



- a) Which letter best represents the location of 0.3?
- b) Which letter best represents the location of 0.78?



- a) Which letter best represents the location of 0.40?
- b) Which letter best represents the location of 0.98?

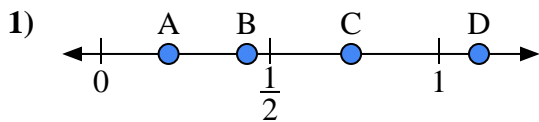
**Answers**

- 1. D B
- 2. A C
- 3. C D
- 4. B A
- 5. A C
- 6. D A
- 7. B D
- 8. B D

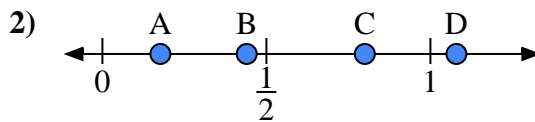


Use the number lines to answer the questions.

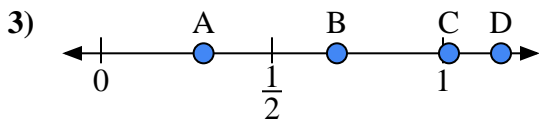
**Answers**



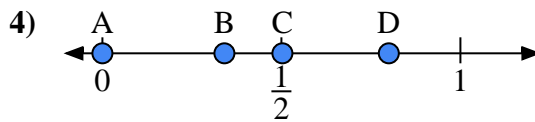
- a) Which letter best represents the location of 0.20?
- b) Which letter best represents the location of 0.74?



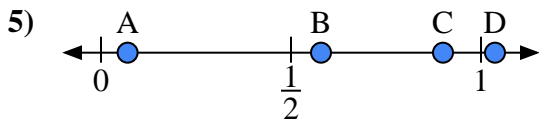
- a) Which letter best represents the location of 0.8?
- b) Which letter best represents the location of 0.44?



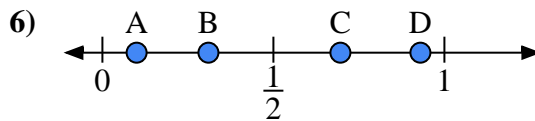
- a) Which letter best represents the location of 0.30?
- b) Which letter best represents the location of 0.69?



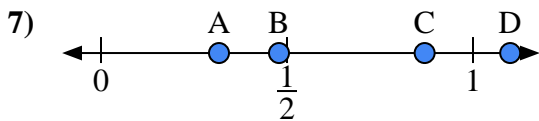
- a) Which letter best represents the location of 0.0?
- b) Which letter best represents the location of 0.80?



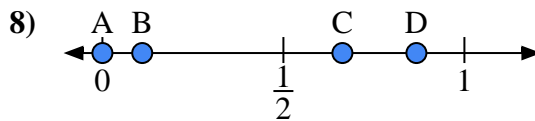
- a) Which letter best represents the location of 0.90?
- b) Which letter best represents the location of 0.07?



- a) Which letter best represents the location of 0.10?
- b) Which letter best represents the location of 0.31?



- a) Which letter best represents the location of 1.10?
- b) Which letter best represents the location of 0.87?

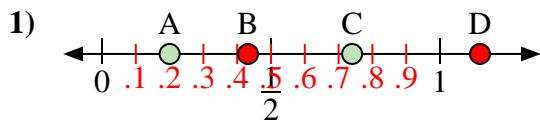


- a) Which letter best represents the location of 0.00?
- b) Which letter best represents the location of 0.11?

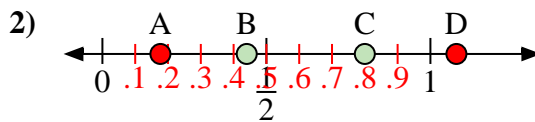
- 1. \_\_\_\_\_
- 2. \_\_\_\_\_
- 3. \_\_\_\_\_
- 4. \_\_\_\_\_
- 5. \_\_\_\_\_
- 6. \_\_\_\_\_
- 7. \_\_\_\_\_
- 8. \_\_\_\_\_



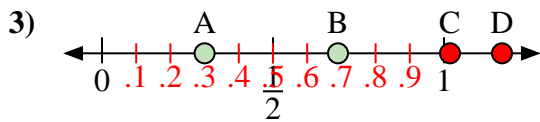
Use the number lines to answer the questions.



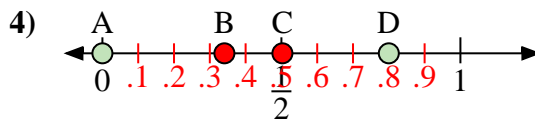
- a) Which letter best represents the location of 0.20?
- b) Which letter best represents the location of 0.74?



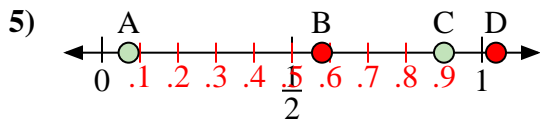
- a) Which letter best represents the location of 0.8?
- b) Which letter best represents the location of 0.44?



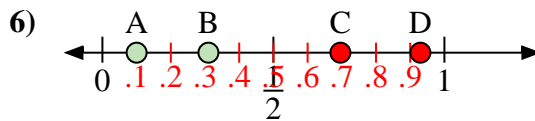
- a) Which letter best represents the location of 0.30?
- b) Which letter best represents the location of 0.69?



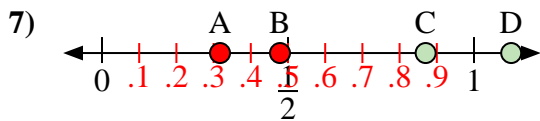
- a) Which letter best represents the location of 0.0?
- b) Which letter best represents the location of 0.80?



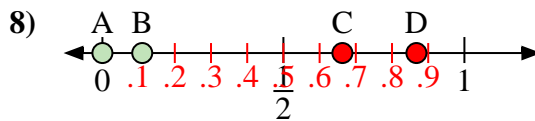
- a) Which letter best represents the location of 0.90?
- b) Which letter best represents the location of 0.07?



- a) Which letter best represents the location of 0.10?
- b) Which letter best represents the location of 0.31?



- a) Which letter best represents the location of 1.10?
- b) Which letter best represents the location of 0.87?



- a) Which letter best represents the location of 0.00?
- b) Which letter best represents the location of 0.11?

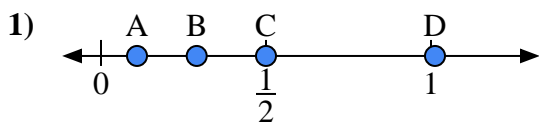
**Answers**

- 1. A C
- 2. C B
- 3. A B
- 4. A D
- 5. C A
- 6. A B
- 7. D C
- 8. A B

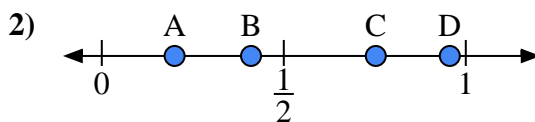


Use the number lines to answer the questions.

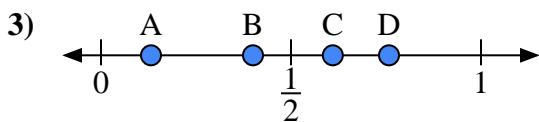
**Answers**



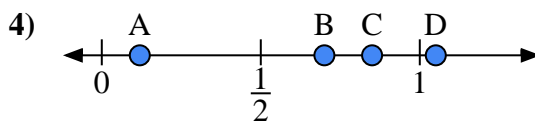
- a) Which letter best represents the location of 0.5?
- b) Which letter best represents the location of 0.29?



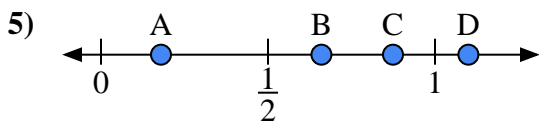
- a) Which letter best represents the location of 0.20?
- b) Which letter best represents the location of 0.41?



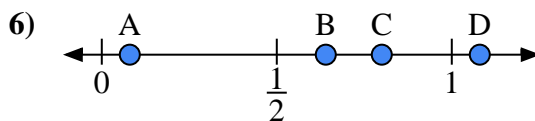
- a) Which letter best represents the location of 0.40?
- b) Which letter best represents the location of 0.61?



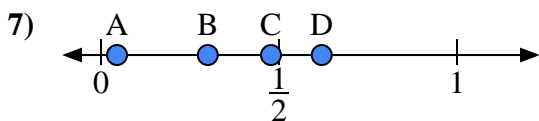
- a) Which letter best represents the location of 0.70?
- b) Which letter best represents the location of 0.85?



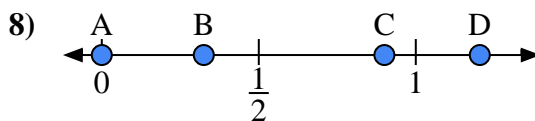
- a) Which letter best represents the location of 1.1?
- b) Which letter best represents the location of 0.66?



- a) Which letter best represents the location of 0.8?
- b) Which letter best represents the location of 0.08?



- a) Which letter best represents the location of 0.30?
- b) Which letter best represents the location of 0.62?

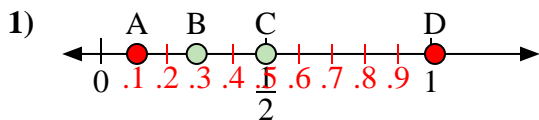


- a) Which letter best represents the location of 0.00?
- b) Which letter best represents the location of 0.90?

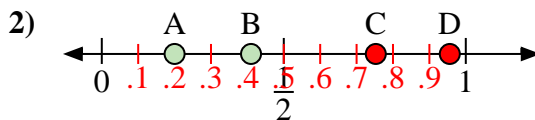
- 1. \_\_\_\_\_
- 2. \_\_\_\_\_
- 3. \_\_\_\_\_
- 4. \_\_\_\_\_
- 5. \_\_\_\_\_
- 6. \_\_\_\_\_
- 7. \_\_\_\_\_
- 8. \_\_\_\_\_



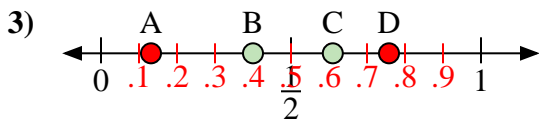
Use the number lines to answer the questions.



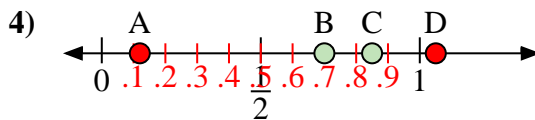
- a) Which letter best represents the location of 0.5?
- b) Which letter best represents the location of 0.29?



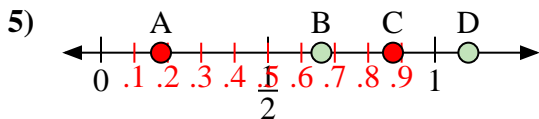
- a) Which letter best represents the location of 0.20?
- b) Which letter best represents the location of 0.41?



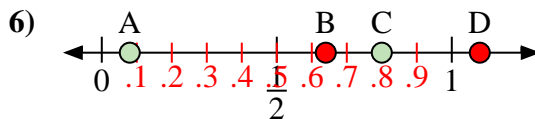
- a) Which letter best represents the location of 0.40?
- b) Which letter best represents the location of 0.61?



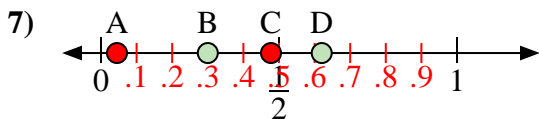
- a) Which letter best represents the location of 0.70?
- b) Which letter best represents the location of 0.85?



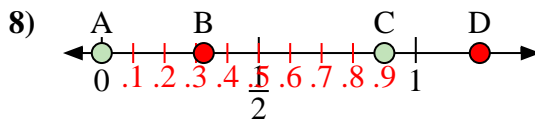
- a) Which letter best represents the location of 1.1?
- b) Which letter best represents the location of 0.66?



- a) Which letter best represents the location of 0.8?
- b) Which letter best represents the location of 0.08?



- a) Which letter best represents the location of 0.30?
- b) Which letter best represents the location of 0.62?



- a) Which letter best represents the location of 0.00?
- b) Which letter best represents the location of 0.90?

**Answers**

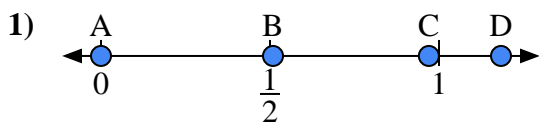
- 1. C B
- 2. A B
- 3. B C
- 4. B C
- 5. D B
- 6. C A
- 7. B D
- 8. A C



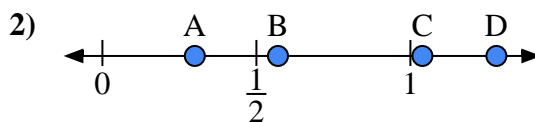


Use the number lines to answer the questions.

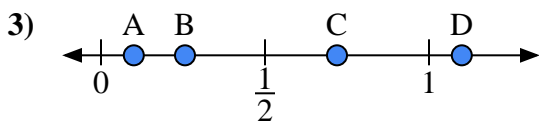
**Answers**



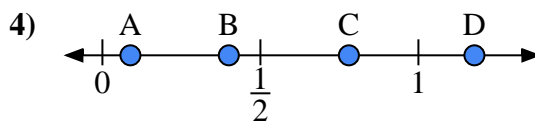
- a) Which letter best represents the location of 0.00?
- b) Which letter best represents the location of 0.97?



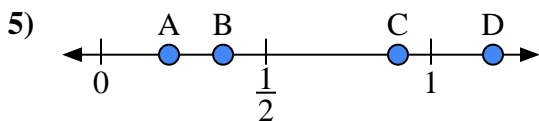
- a) Which letter best represents the location of 0.30?
- b) Which letter best represents the location of 0.57?



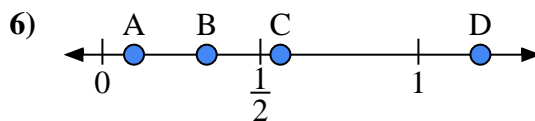
- a) Which letter best represents the location of 1.10?
- b) Which letter best represents the location of 0.10?



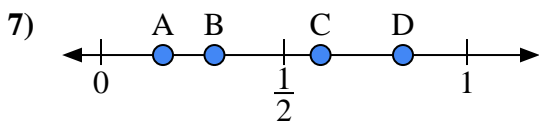
- a) Which letter best represents the location of 0.4?
- b) Which letter best represents the location of 0.78?



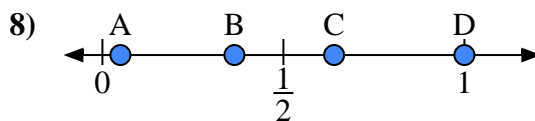
- a) Which letter best represents the location of 0.90?
- b) Which letter best represents the location of 0.37?



- a) Which letter best represents the location of 0.1?
- b) Which letter best represents the location of 0.33?



- a) Which letter best represents the location of 0.6?
- b) Which letter best represents the location of 0.31?



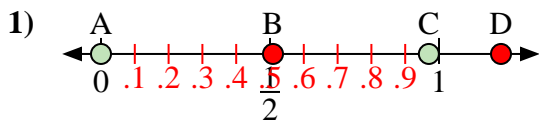
- a) Which letter best represents the location of 1.0?
- b) Which letter best represents the location of 0.64?

- 1. \_\_\_\_\_
- 2. \_\_\_\_\_
- 3. \_\_\_\_\_
- 4. \_\_\_\_\_
- 5. \_\_\_\_\_
- 6. \_\_\_\_\_
- 7. \_\_\_\_\_
- 8. \_\_\_\_\_

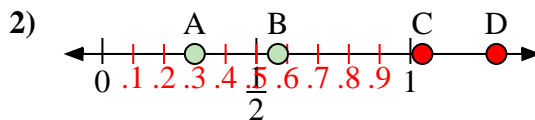


Use the number lines to answer the questions.

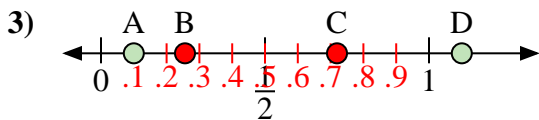
**Answers**



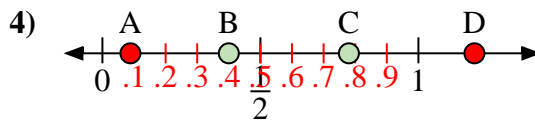
- a) Which letter best represents the location of 0.00?
- b) Which letter best represents the location of 0.97?



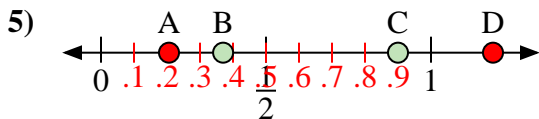
- a) Which letter best represents the location of 0.30?
- b) Which letter best represents the location of 0.57?



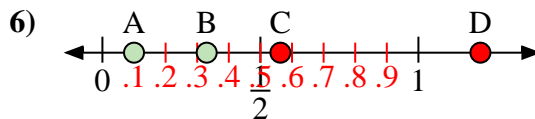
- a) Which letter best represents the location of 1.10?
- b) Which letter best represents the location of 0.10?



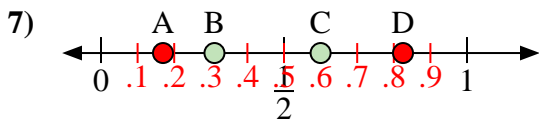
- a) Which letter best represents the location of 0.4?
- b) Which letter best represents the location of 0.78?



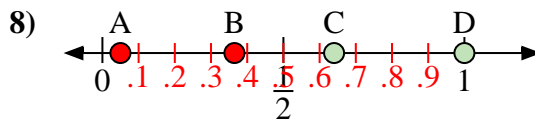
- a) Which letter best represents the location of 0.90?
- b) Which letter best represents the location of 0.37?



- a) Which letter best represents the location of 0.1?
- b) Which letter best represents the location of 0.33?



- a) Which letter best represents the location of 0.6?
- b) Which letter best represents the location of 0.31?



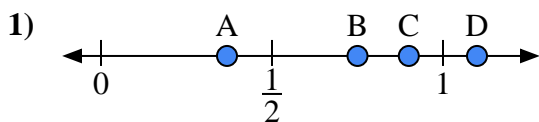
- a) Which letter best represents the location of 1.0?
- b) Which letter best represents the location of 0.64?

- 1. A C
- 2. A B
- 3. D A
- 4. B C
- 5. C B
- 6. A B
- 7. C B
- 8. D C

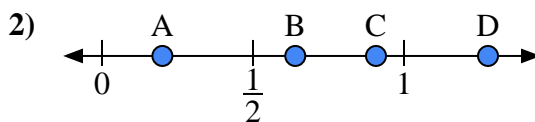


Use the number lines to answer the questions.

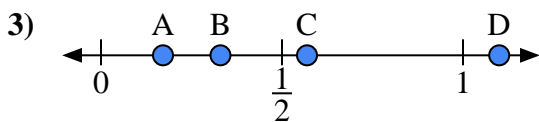
**Answers**



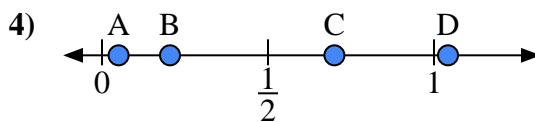
- a) Which letter best represents the location of 0.90?
- b) Which letter best represents the location of 0.75?



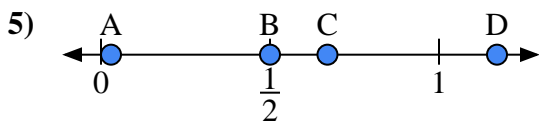
- a) Which letter best represents the location of 0.2?
- b) Which letter best represents the location of 0.64?



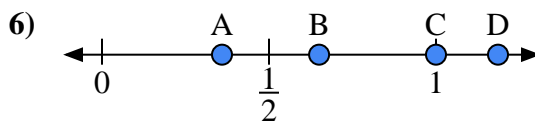
- a) Which letter best represents the location of 1.10?
- b) Which letter best represents the location of 0.33?



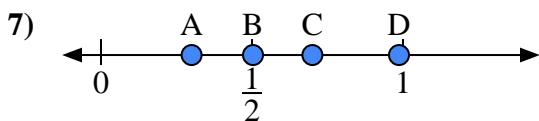
- a) Which letter best represents the location of 0.70?
- b) Which letter best represents the location of 0.05?



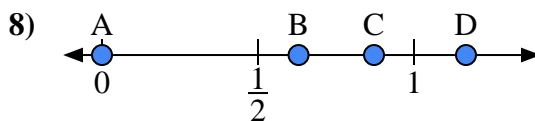
- a) Which letter best represents the location of 0.50?
- b) Which letter best represents the location of 0.67?



- a) Which letter best represents the location of 1.00?
- b) Which letter best represents the location of 0.65?



- a) Which letter best represents the location of 0.3?
- b) Which letter best represents the location of 0.70?

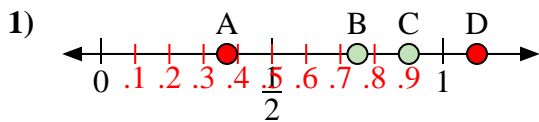


- a) Which letter best represents the location of 0.00?
- b) Which letter best represents the location of 0.63?

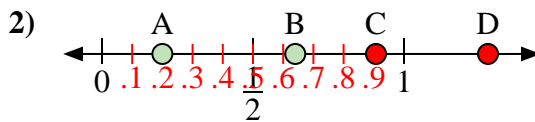
- 1. \_\_\_\_\_
- 2. \_\_\_\_\_
- 3. \_\_\_\_\_
- 4. \_\_\_\_\_
- 5. \_\_\_\_\_
- 6. \_\_\_\_\_
- 7. \_\_\_\_\_
- 8. \_\_\_\_\_



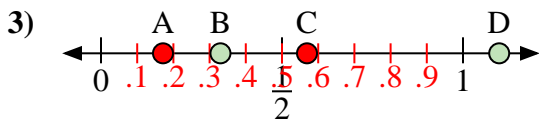
Use the number lines to answer the questions.



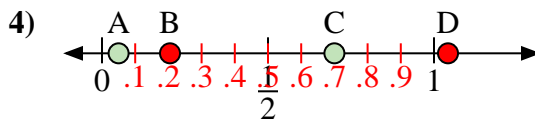
- a) Which letter best represents the location of 0.90?
- b) Which letter best represents the location of 0.75?



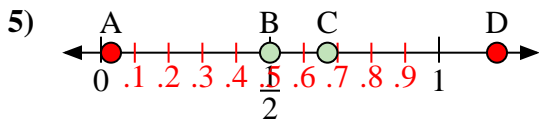
- a) Which letter best represents the location of 0.2?
- b) Which letter best represents the location of 0.64?



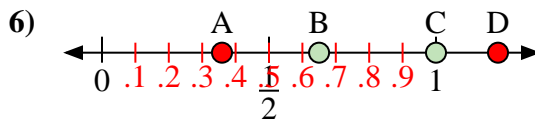
- a) Which letter best represents the location of 1.10?
- b) Which letter best represents the location of 0.33?



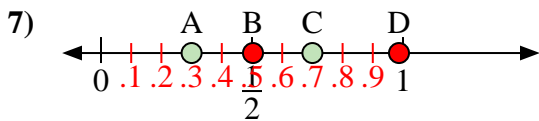
- a) Which letter best represents the location of 0.70?
- b) Which letter best represents the location of 0.05?



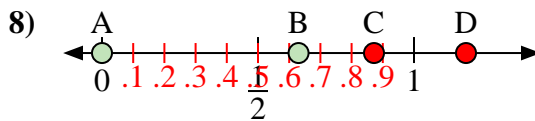
- a) Which letter best represents the location of 0.50?
- b) Which letter best represents the location of 0.67?



- a) Which letter best represents the location of 1.00?
- b) Which letter best represents the location of 0.65?



- a) Which letter best represents the location of 0.3?
- b) Which letter best represents the location of 0.70?



- a) Which letter best represents the location of 0.00?
- b) Which letter best represents the location of 0.63?

**Answers**

- 1. C B
- 2. A B
- 3. D B
- 4. C A
- 5. B C
- 6. C B
- 7. A C
- 8. A B