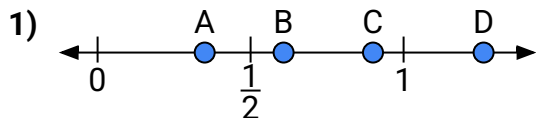
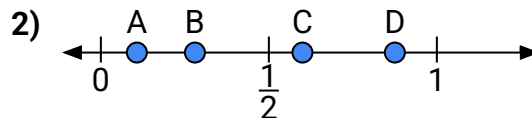




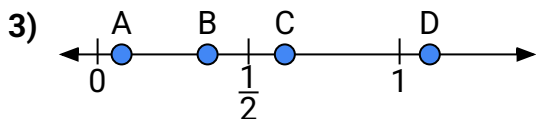
Use the number lines to answer the questions.

Answers

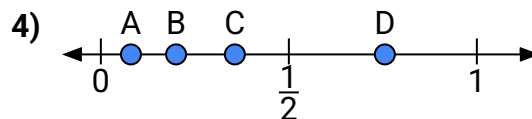
- a) Which letter best represents the location of 0.90?
b) Which letter best represents the location of 0.35?



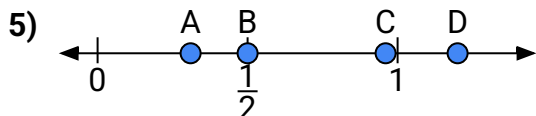
- a) Which letter best represents the location of 0.6?
b) Which letter best represents the location of 0.28?



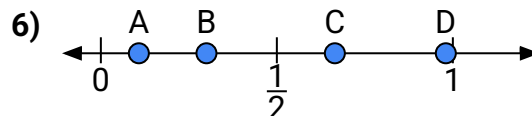
- a) Which letter best represents the location of 1.10?
b) Which letter best represents the location of 0.62?



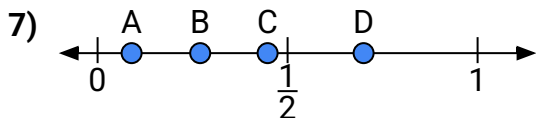
- a) Which letter best represents the location of 0.2?
b) Which letter best represents the location of 0.08?



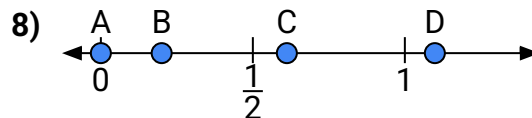
- a) Which letter best represents the location of 0.50?
b) Which letter best represents the location of 0.31?



- a) Which letter best represents the location of 0.30?
b) Which letter best represents the location of 0.98?



- a) Which letter best represents the location of 0.7?
b) Which letter best represents the location of 0.27?



- a) Which letter best represents the location of 0.0?
b) Which letter best represents the location of 0.20?

1. _____

2. _____

3. _____

4. _____

5. _____

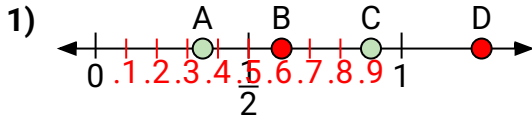
6. _____

7. _____

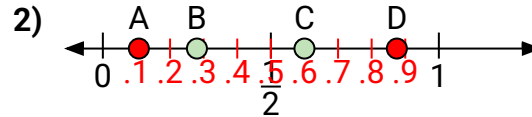
8. _____



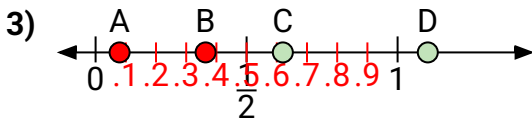
Use the number lines to answer the questions.

Answers

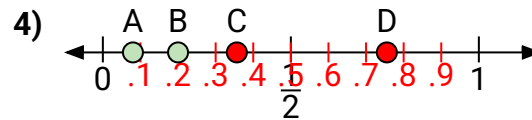
- a) Which letter best represents the location of 0.90?
b) Which letter best represents the location of 0.35?



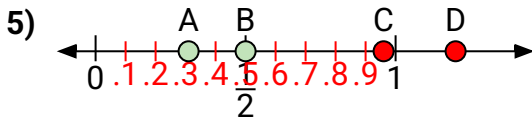
- a) Which letter best represents the location of 0.6?
b) Which letter best represents the location of 0.28?



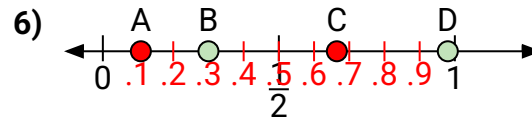
- a) Which letter best represents the location of 1.10?
b) Which letter best represents the location of 0.62?



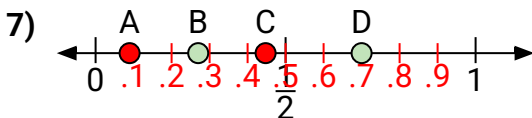
- a) Which letter best represents the location of 0.2?
b) Which letter best represents the location of 0.08?



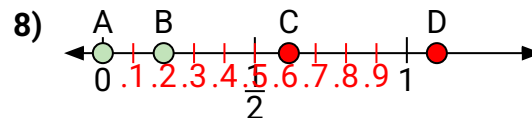
- a) Which letter best represents the location of 0.50?
b) Which letter best represents the location of 0.31?



- a) Which letter best represents the location of 0.30?
b) Which letter best represents the location of 0.98?



- a) Which letter best represents the location of 0.7?
b) Which letter best represents the location of 0.27?



- a) Which letter best represents the location of 0.0?
b) Which letter best represents the location of 0.20?

- | | C | A |
|----|----------|----------|
| 1. | C | A |
| 2. | C | B |
| 3. | D | C |
| 4. | B | A |
| 5. | B | A |
| 6. | B | D |
| 7. | D | B |
| 8. | A | B |