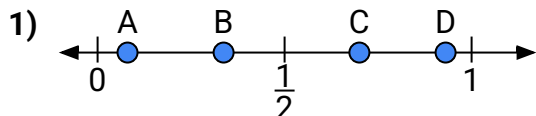
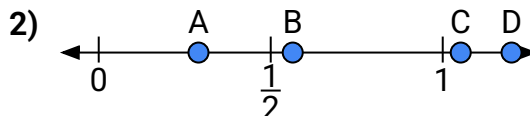




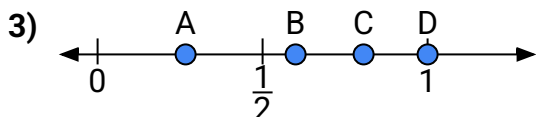
Use the number lines to answer the questions.

Answers

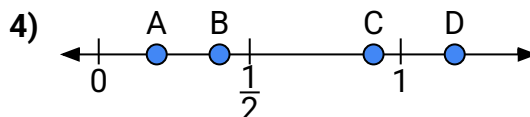
- a) Which letter best represents the location of 0.7?
b) Which letter best represents the location of 0.08?



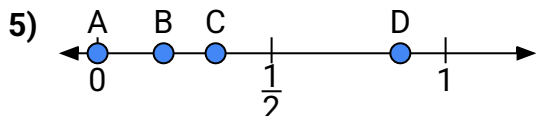
- a) Which letter best represents the location of 1.2?
b) Which letter best represents the location of 0.29?



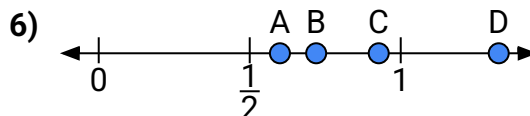
- a) Which letter best represents the location of 1.0?
b) Which letter best represents the location of 0.60?



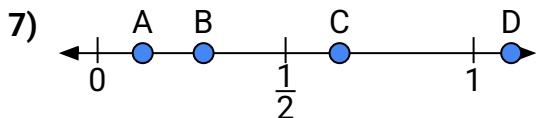
- a) Which letter best represents the location of 0.4?
b) Which letter best represents the location of 0.91?



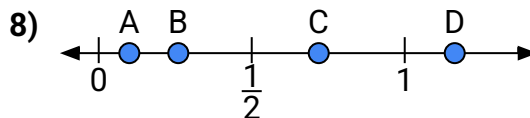
- a) Which letter best represents the location of 0.00?
b) Which letter best represents the location of 0.87?



- a) Which letter best represents the location of 0.6?
b) Which letter best represents the location of 0.72?



- a) Which letter best represents the location of 1.1?
b) Which letter best represents the location of 0.12?



- a) Which letter best represents the location of 0.1?
b) Which letter best represents the location of 0.26?

1. _____

2. _____

3. _____

4. _____

5. _____

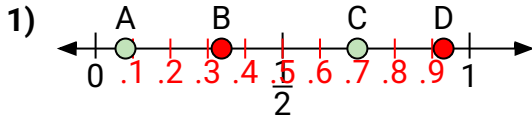
6. _____

7. _____

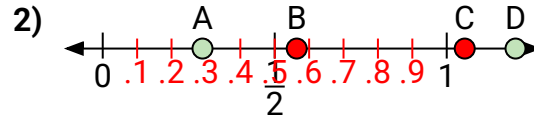
8. _____



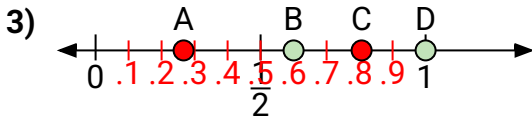
Use the number lines to answer the questions.

Answers

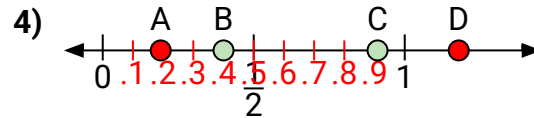
- a) Which letter best represents the location of 0.7?
- b) Which letter best represents the location of 0.08?



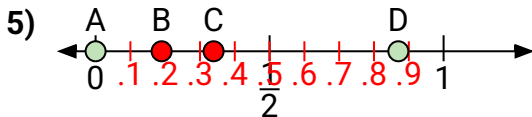
- a) Which letter best represents the location of 1.2?
- b) Which letter best represents the location of 0.29?



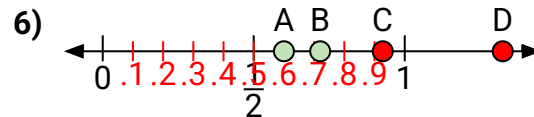
- a) Which letter best represents the location of 1.0?
- b) Which letter best represents the location of 0.60?



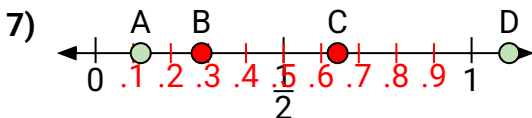
- a) Which letter best represents the location of 0.4?
- b) Which letter best represents the location of 0.91?



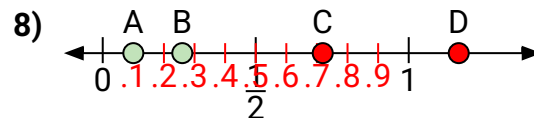
- a) Which letter best represents the location of 0.00?
- b) Which letter best represents the location of 0.87?



- a) Which letter best represents the location of 0.6?
- b) Which letter best represents the location of 0.72?



- a) Which letter best represents the location of 1.1?
- b) Which letter best represents the location of 0.12?



- a) Which letter best represents the location of 0.1?
- b) Which letter best represents the location of 0.26?

1. C A
2. D A
3. D B
4. B C
5. A D
6. A B
7. D A
8. A B