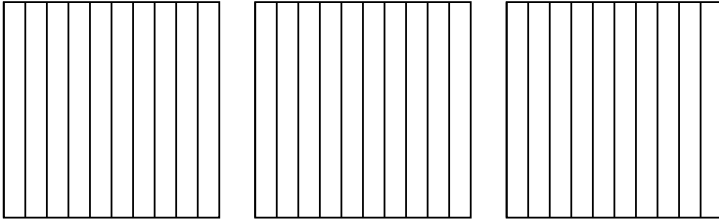


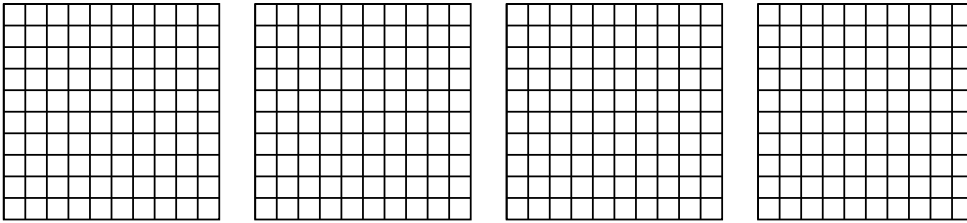


Use the visual model to solve each problem.

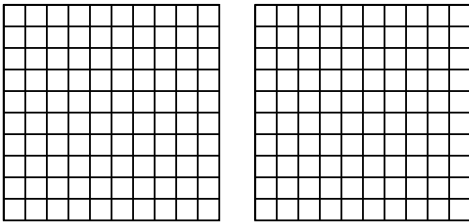
1)  $3 \times 0.6 =$



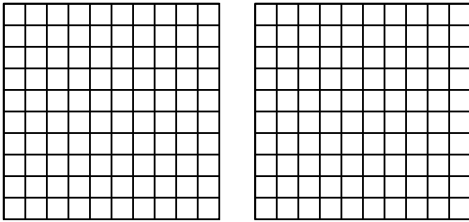
2)  $4 \times 0.69 =$



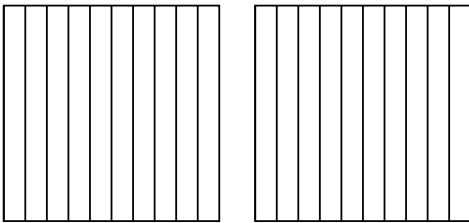
3)  $2 \times 0.97 =$



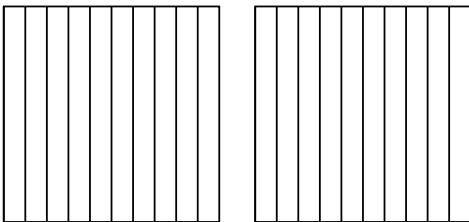
4)  $2 \times 0.75 =$



5)  $2 \times 0.3 =$



6)  $2 \times 0.2 =$



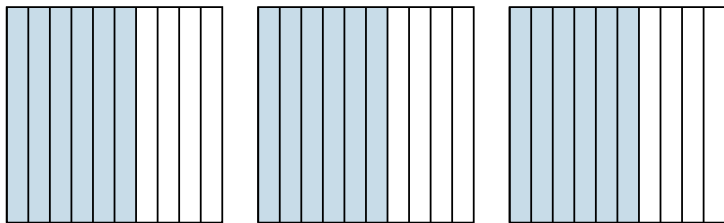
Answers

- 1. \_\_\_\_\_
- 2. \_\_\_\_\_
- 3. \_\_\_\_\_
- 4. \_\_\_\_\_
- 5. \_\_\_\_\_
- 6. \_\_\_\_\_

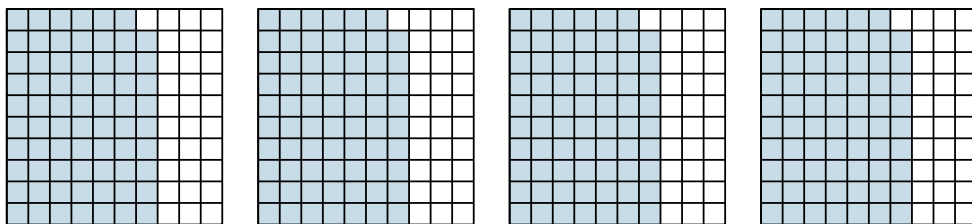


Use the visual model to solve each problem.

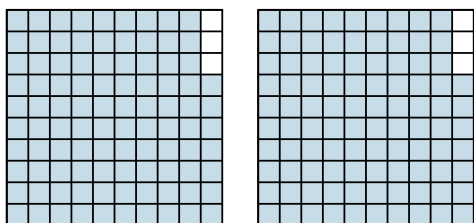
1)  $3 \times 0.6 =$



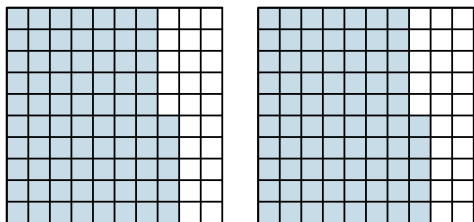
2)  $4 \times 0.69 =$



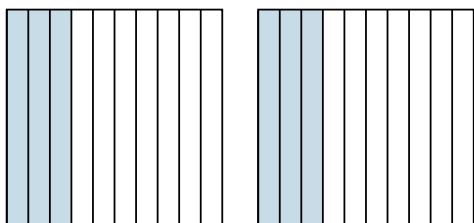
3)  $2 \times 0.97 =$



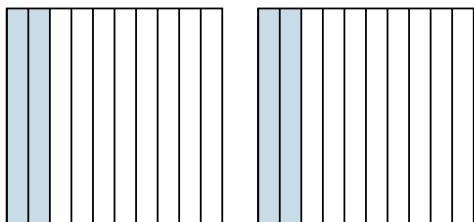
4)  $2 \times 0.75 =$



5)  $2 \times 0.3 =$



6)  $2 \times 0.2 =$



Answers

1.  $\frac{18}{10} = 1.8$

2.  $\frac{276}{100} = 2.76$

3.  $\frac{194}{100} = 1.94$

4.  $\frac{150}{100} = 1.5$

5.  $\frac{6}{10} = 0.6$

6.  $\frac{4}{10} = 0.4$