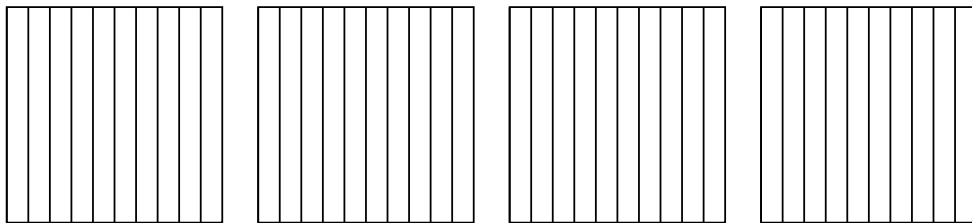


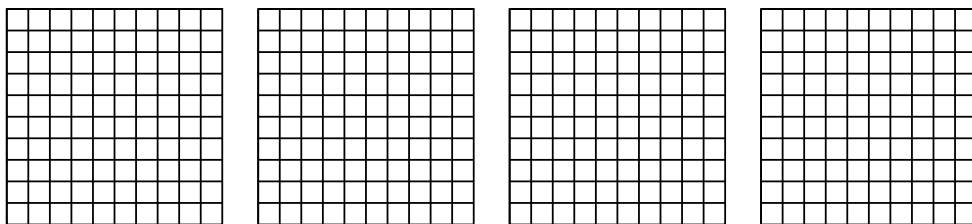


Use the visual model to solve each problem.


1) $4 \times 0.9 =$



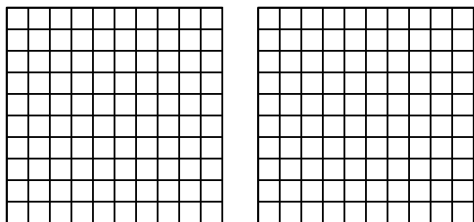
2) $4 \times 0.39 =$



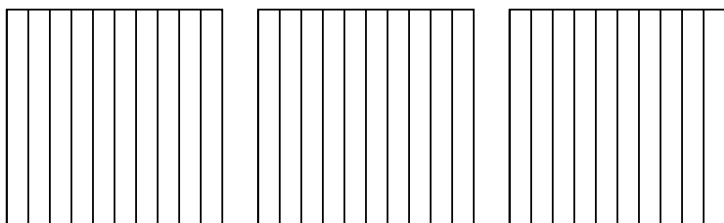
3) $3 \times 0.54 =$



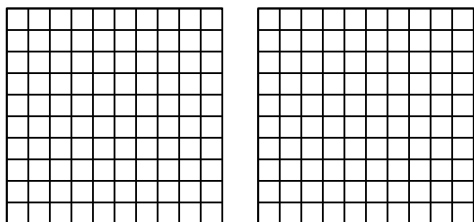
4) $2 \times 0.79 =$



5) $3 \times 0.2 =$



6) $2 \times 0.23 =$



Answers

1. _____

2. _____

3. _____

4. _____

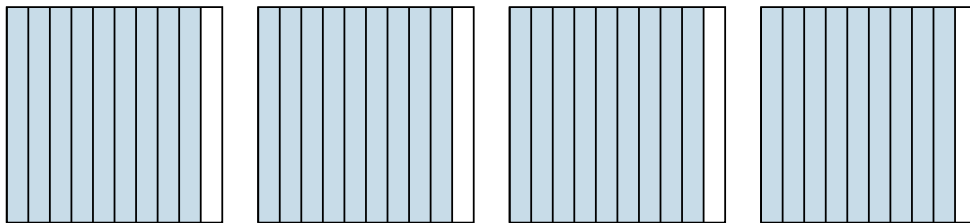
5. _____

6. _____

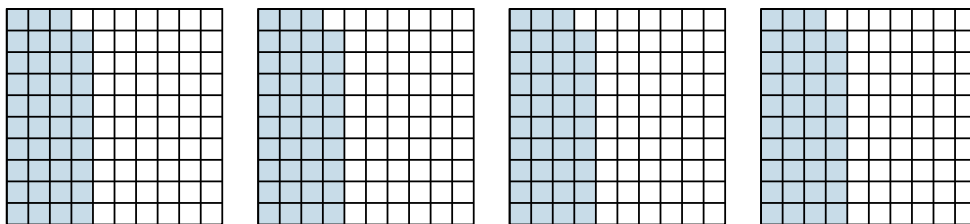


Use the visual model to solve each problem.

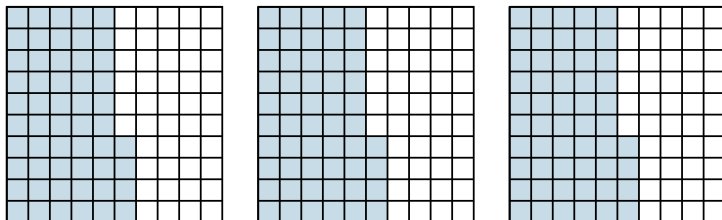
1) $4 \times 0.9 =$



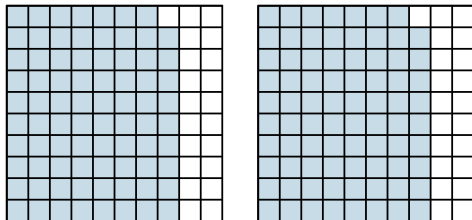
2) $4 \times 0.39 =$




3) $3 \times 0.54 =$



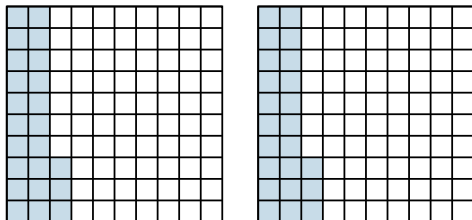
4) $2 \times 0.79 =$



5) $3 \times 0.2 =$



6) $2 \times 0.23 =$



Answers

1. $\frac{36}{10} = 3.6$

2. $\frac{156}{100} = 1.56$

3. $\frac{162}{100} = 1.62$

4. $\frac{158}{100} = 1.58$

5. $\frac{6}{10} = 0.6$

6. $\frac{46}{100} = 0.46$