





Use the visual model to solve each problem.


1) $0.9 \times 0.5 =$




2) $0.6 \times 0.2 =$




3) $0.2 \times 0.9 =$




4) $0.7 \times 0.2 =$




5) $0.2 \times 0.6 =$




6) $0.4 \times 0.8 =$




7) $0.5 \times 0.8 =$




8) $0.9 \times 0.3 =$




9) $0.8 \times 0.5 =$




10) $0.4 \times 0.5 =$




11) $0.2 \times 0.1 =$




12) $0.5 \times 0.2 =$




13) $0.8 \times 0.4 =$



14) $0.7 \times 0.9 =$



15) $0.7 \times 0.1 =$



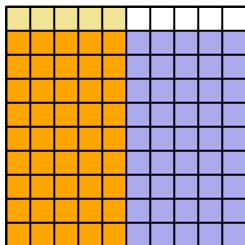
Answers

1. _____
2. _____
3. _____
4. _____
5. _____
6. _____
7. _____
8. _____
9. _____
10. _____
11. _____
12. _____
13. _____
14. _____
15. _____

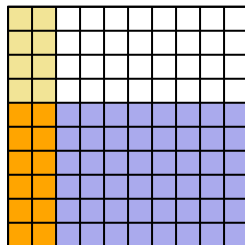


Use the visual model to solve each problem.

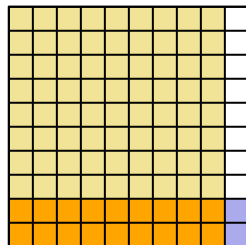
1) $0.9 \times 0.5 =$



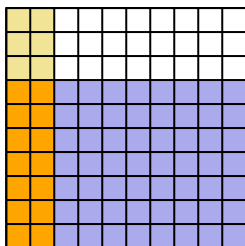
2) $0.6 \times 0.2 =$



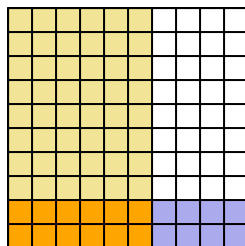
3) $0.2 \times 0.9 =$



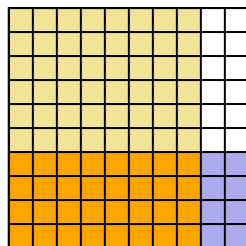
4) $0.7 \times 0.2 =$



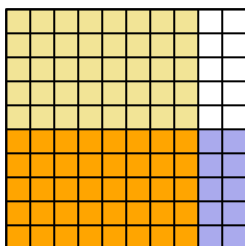
5) $0.2 \times 0.6 =$



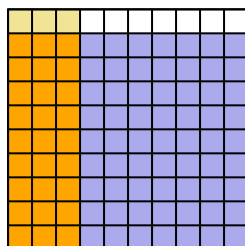
6) $0.4 \times 0.8 =$



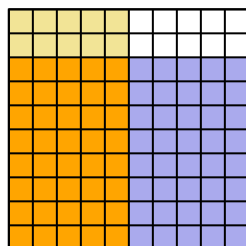
7) $0.5 \times 0.8 =$



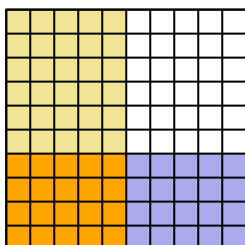
8) $0.9 \times 0.3 =$



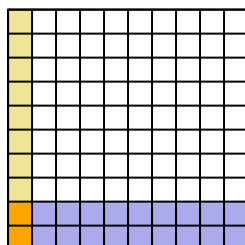
9) $0.8 \times 0.5 =$



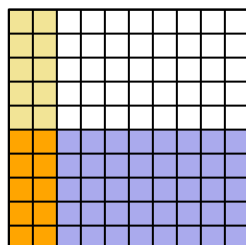
10) $0.4 \times 0.5 =$



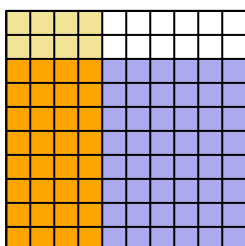
11) $0.2 \times 0.1 =$



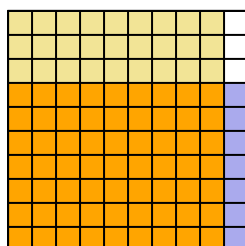
12) $0.5 \times 0.2 =$



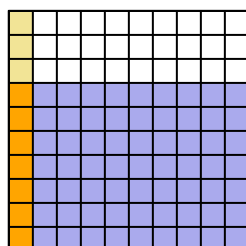
13) $0.8 \times 0.4 =$



14) $0.7 \times 0.9 =$



15) $0.7 \times 0.1 =$



Answers

1. $\frac{45}{100} = 0.45$
2. $\frac{12}{100} = 0.12$
3. $\frac{18}{100} = 0.18$
4. $\frac{14}{100} = 0.14$
5. $\frac{12}{100} = 0.12$
6. $\frac{32}{100} = 0.32$
7. $\frac{40}{100} = 0.4$
8. $\frac{27}{100} = 0.27$
9. $\frac{40}{100} = 0.4$
10. $\frac{20}{100} = 0.2$
11. $\frac{2}{100} = 0.02$
12. $\frac{10}{100} = 0.1$
13. $\frac{32}{100} = 0.32$
14. $\frac{63}{100} = 0.63$
15. $\frac{7}{100} = 0.07$