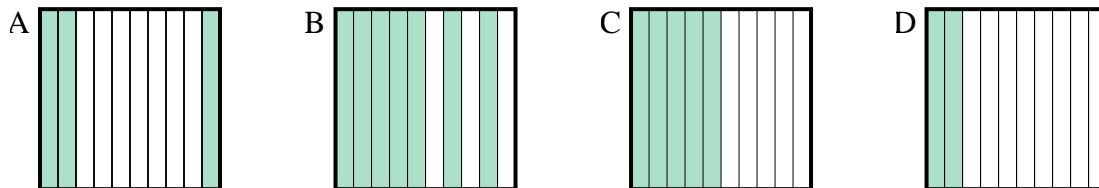




Determine which letter best answer the question.

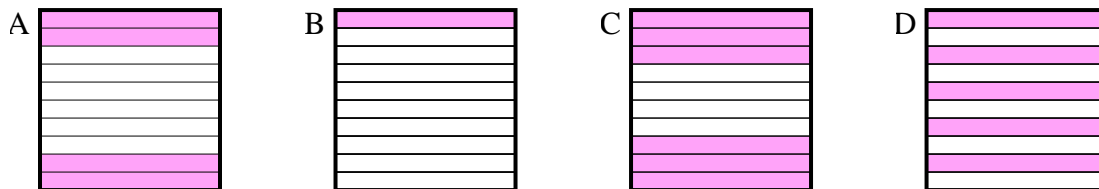
Answers

1) Which 10×1 grid is shaded to represent the decimal number that, when added to 0.5, results in a total of 1.00?



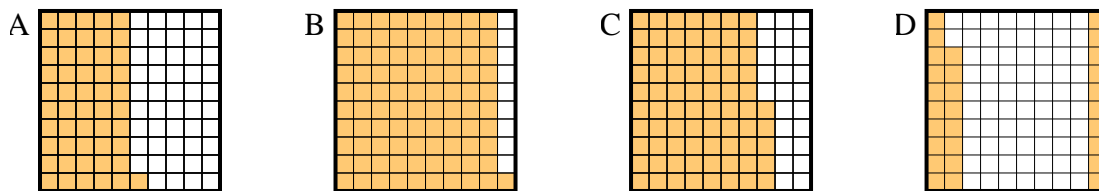
1. _____
2. _____
3. _____

2) Which 10×1 grid is shaded to represent the decimal number that, when added to 0.6, results in a total of 1.00?

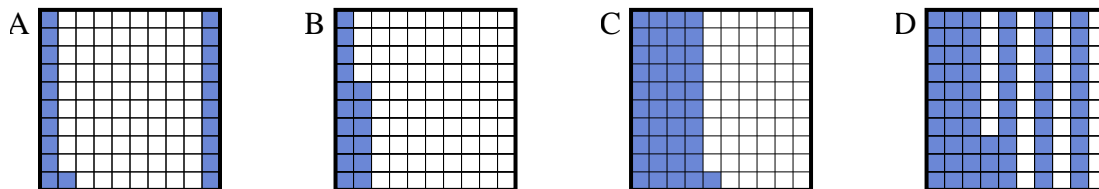


4. _____
5. _____
6. _____

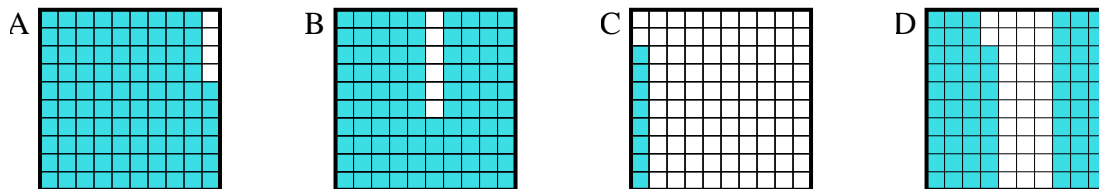
3) Which 10×10 grid is shaded to represent the decimal number that, when added to 0.72, results in a total of 1.00?



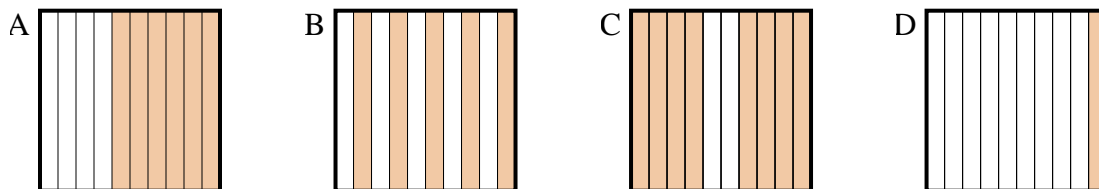
4) Which 10×10 grid is shaded to represent the decimal number that, when added to 0.59, results in a total of 1.00?



5) Which 10×10 grid is shaded to represent the decimal number that, when added to 0.32, results in a total of 1.00?



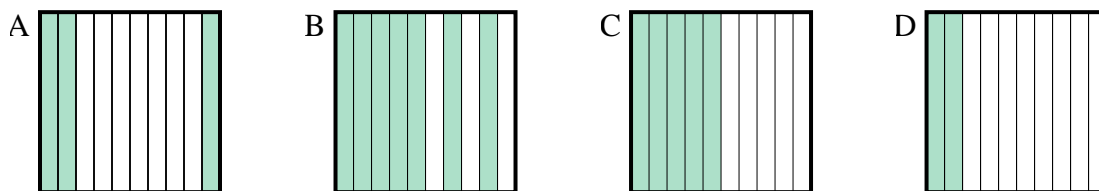
6) Which 10×1 grid is shaded to represent the decimal number that, when added to 0.4, results in a total of 1.00?



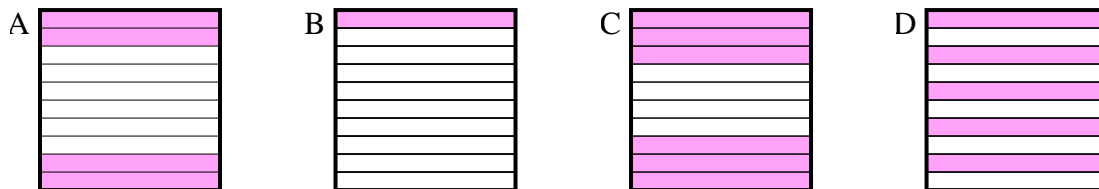


Determine which letter best answer the question.

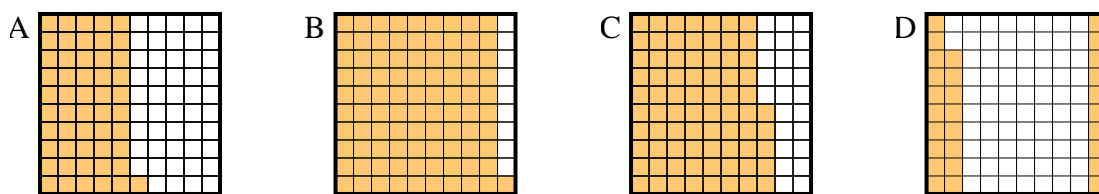
1) Which 10×1 grid is shaded to represent the decimal number that, when added to 0.5, results in a total of 1.00?



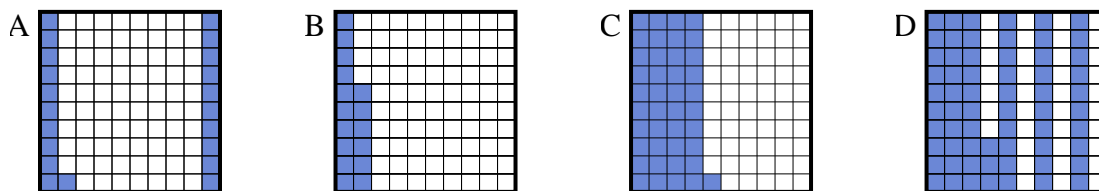
2) Which 10×1 grid is shaded to represent the decimal number that, when added to 0.6, results in a total of 1.00?



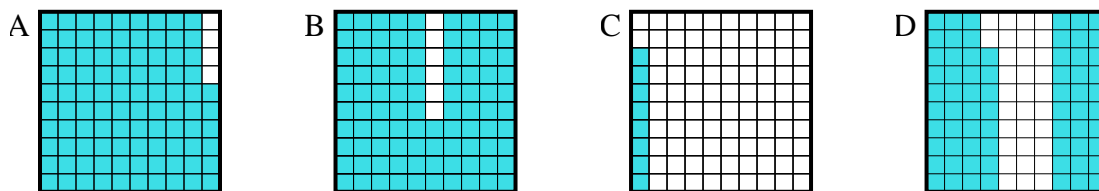
3) Which 10×10 grid is shaded to represent the decimal number that, when added to 0.72, results in a total of 1.00?



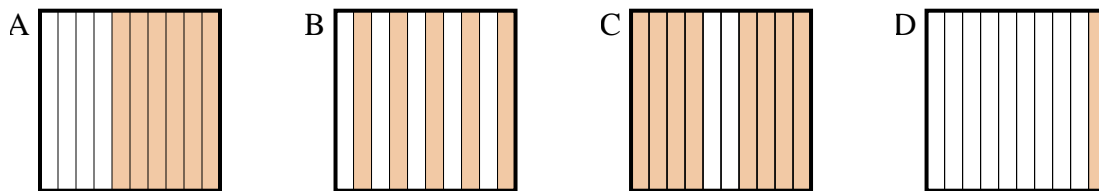
4) Which 10×10 grid is shaded to represent the decimal number that, when added to 0.59, results in a total of 1.00?



5) Which 10×10 grid is shaded to represent the decimal number that, when added to 0.32, results in a total of 1.00?



6) Which 10×1 grid is shaded to represent the decimal number that, when added to 0.4, results in a total of 1.00?



Answers

1. **C**

2. **A**

3. **D**

4. **C**

5. **D**

6. **A**