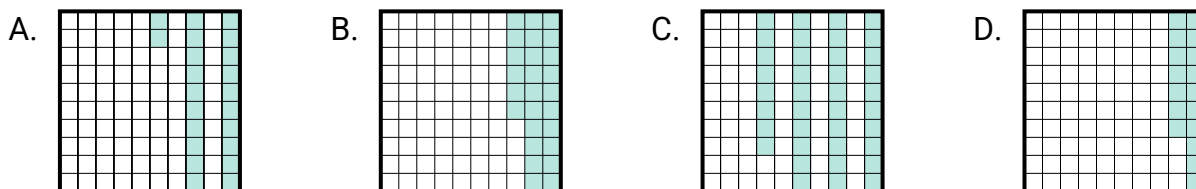
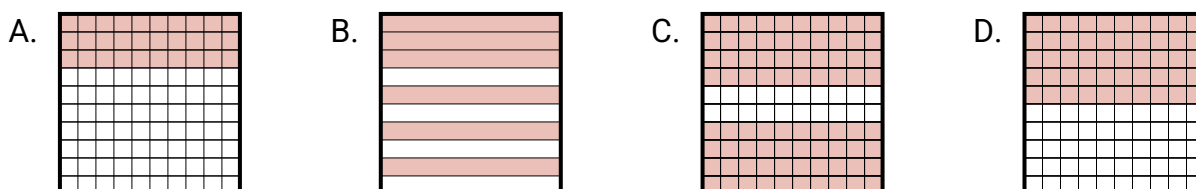


**Determine which choice best answer the question.****Answers**

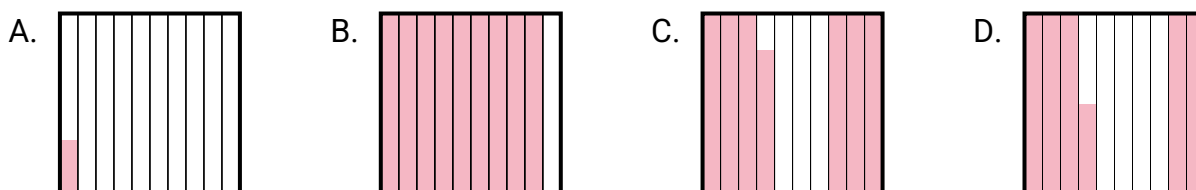
- 1) Which 10×10 grid is shaded to represent the decimal number that, when added to 0.74, results in a total of 1.00?



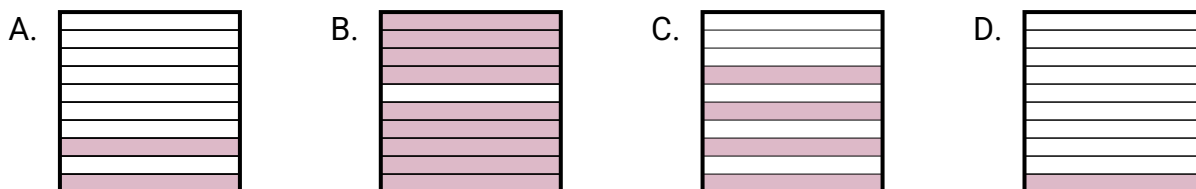
- 2) Which 10×1 grid is shaded to represent the decimal number that, when added to 0.4, results in a total of 1.00?



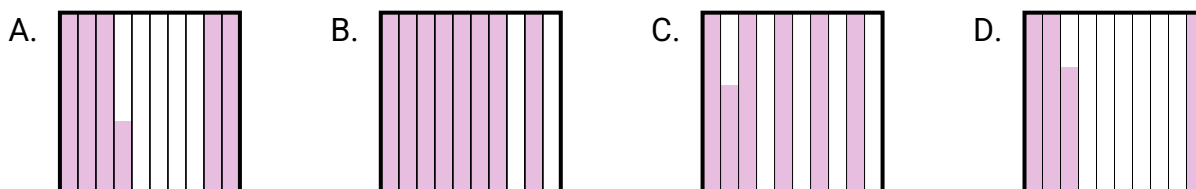
- 3) Which 10×10 grid is shaded to represent the decimal number that, when added to 0.45, results in a total of 1.00?



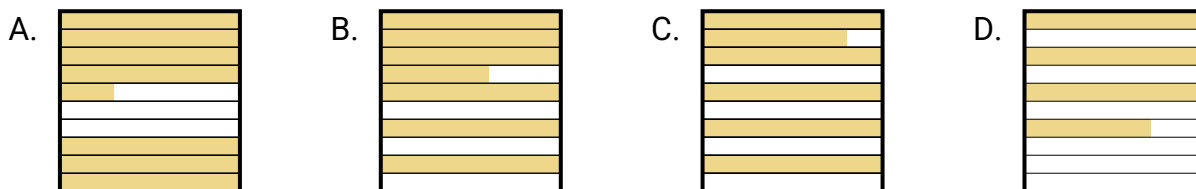
- 4) Which 10×1 grid is shaded to represent the decimal number that, when added to 0.6, results in a total of 1.00?



- 5) Which 10×10 grid is shaded to represent the decimal number that, when added to 0.44, results in a total of 1.00?



- 6) Which 10×10 grid is shaded to represent the decimal number that, when added to 0.63, results in a total of 1.00?



1. _____

2. _____

3. _____

4. _____

5. _____

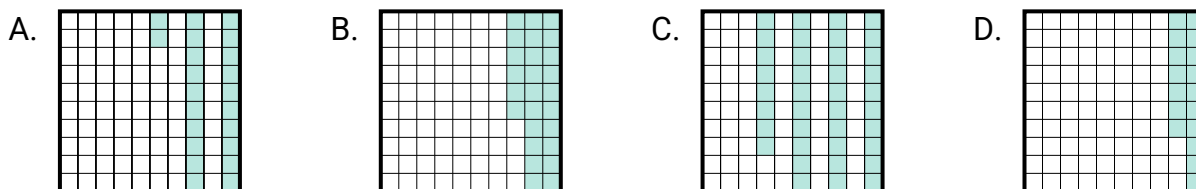
6. _____



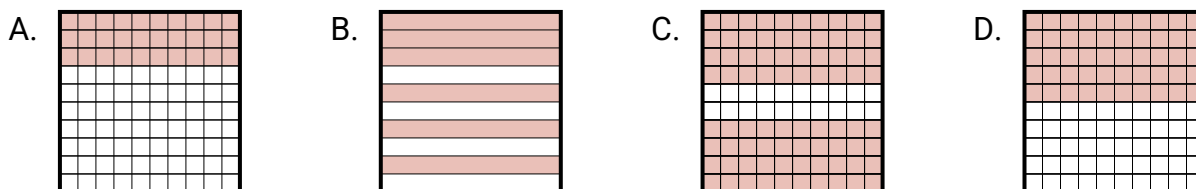
Determine which choice best answer the question.

Answers

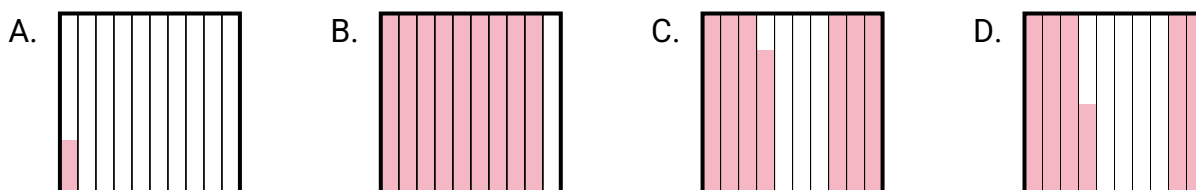
- 1) Which 10×10 grid is shaded to represent the decimal number that, when added to 0.74, results in a total of 1.00?

1. **B**

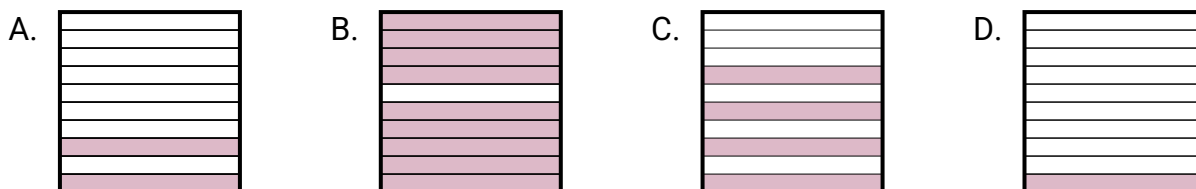
- 2) Which 10×1 grid is shaded to represent the decimal number that, when added to 0.4, results in a total of 1.00?

2. **B**3. **D**4. **C**5. **C**6. **D**

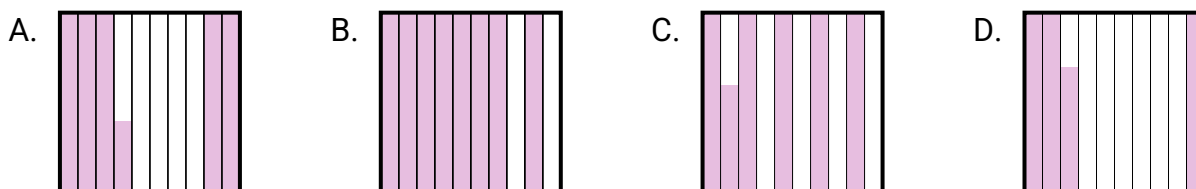
- 3) Which 10×10 grid is shaded to represent the decimal number that, when added to 0.45, results in a total of 1.00?



- 4) Which 10×1 grid is shaded to represent the decimal number that, when added to 0.6, results in a total of 1.00?



- 5) Which 10×10 grid is shaded to represent the decimal number that, when added to 0.44, results in a total of 1.00?



- 6) Which 10×10 grid is shaded to represent the decimal number that, when added to 0.63, results in a total of 1.00?

