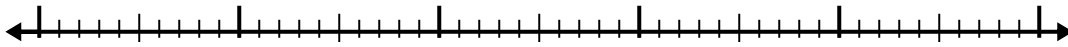


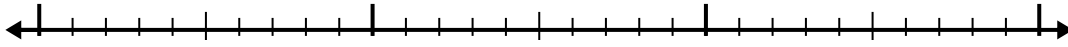


Use the number line to solve each problem.

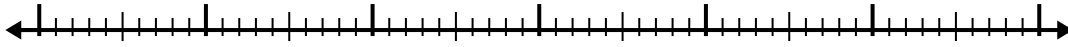
1) $1 + 3.5 =$



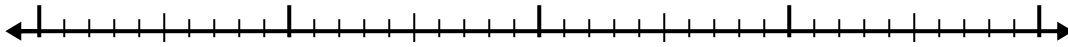
2) $1.3 + 1.1 =$



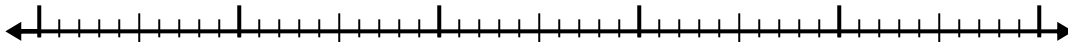
3) $1.1 + 3.8 =$



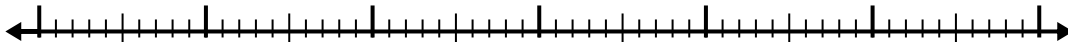
4) $8.5 + 1.8 =$



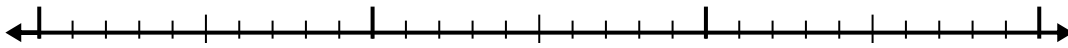
5) $3.2 + 2.9 =$



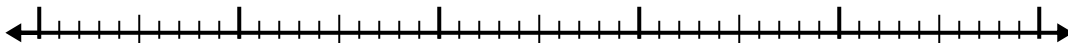
6) $2.5 + 3.4 =$



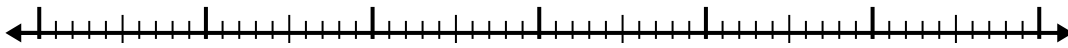
7) $8.6 + 1.8 =$



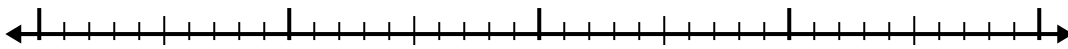
8) $3.4 + 2.6 =$



9) $2.7 + 3.7 =$



10) $2 + 1.7 =$



Answers

1. _____

2. _____

3. _____

4. _____

5. _____

6. _____

7. _____

8. _____

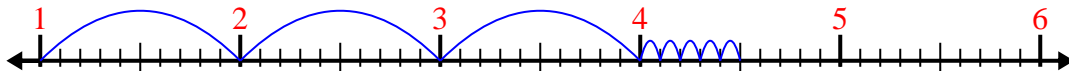
9. _____

10. _____

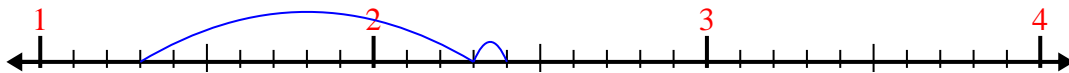


Use the number line to solve each problem.

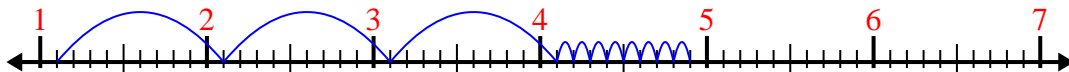
1) $1 + 3.5 =$



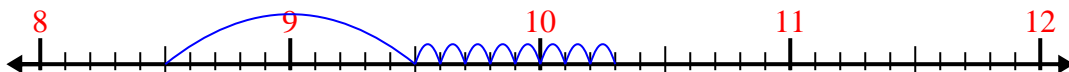
2) $1.3 + 1.1 =$



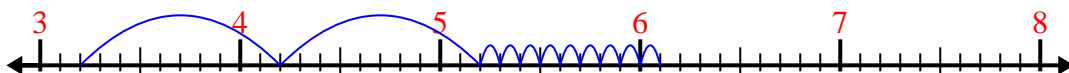
3) $1.1 + 3.8 =$



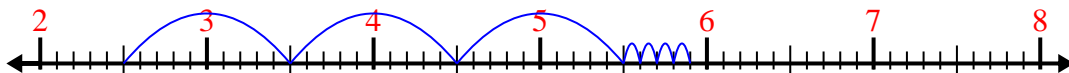
4) $8.5 + 1.8 =$




5) $3.2 + 2.9 =$



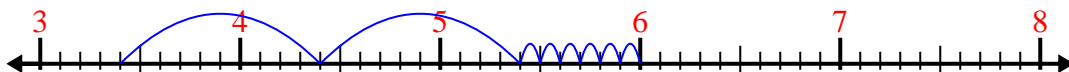
6) $2.5 + 3.4 =$



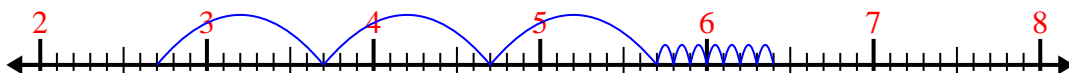
7) $8.6 + 1.8 =$



8) $3.4 + 2.6 =$



9) $2.7 + 3.7 =$



10) $2 + 1.7 =$



Answers

1. 4.5

2. 2.4

3. 4.9

4. 10.3

5. 6.1

6. 5.9

7. 10.4

8. 6.0

9. 6.4

10. 3.7