


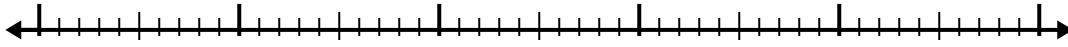


Use the number line to solve each problem.

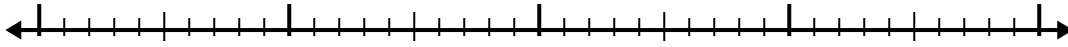
1)  $6.5 + 3.2 =$



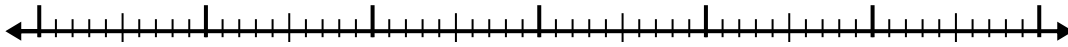
2)  $5.3 + 3.8 =$




3)  $3.1 + 1.1 =$



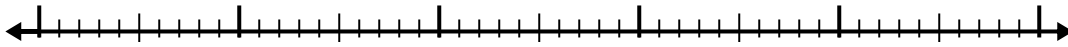
4)  $8.4 + 3.2 =$




5)  $5.7 + 1.2 =$




6)  $2 + 2.8 =$



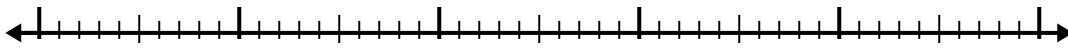
7)  $4.2 + 1.8 =$



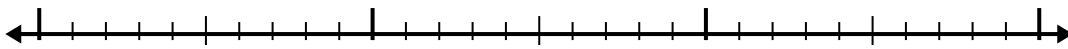
8)  $6.6 + 1.4 =$



9)  $4.3 + 3.9 =$



10)  $1.1 + 1.4 =$



Answers

1. \_\_\_\_\_

2. \_\_\_\_\_

3. \_\_\_\_\_

4. \_\_\_\_\_

5. \_\_\_\_\_

6. \_\_\_\_\_

7. \_\_\_\_\_

8. \_\_\_\_\_

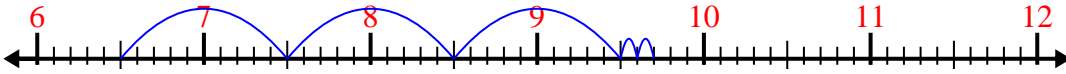
9. \_\_\_\_\_

10. \_\_\_\_\_

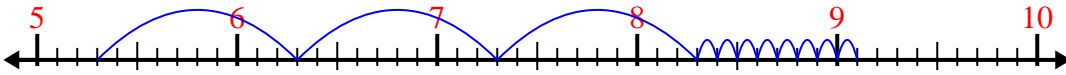


Use the number line to solve each problem.

1)  $6.5 + 3.2 =$



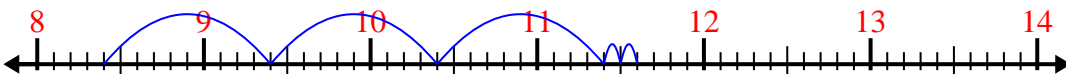
2)  $5.3 + 3.8 =$



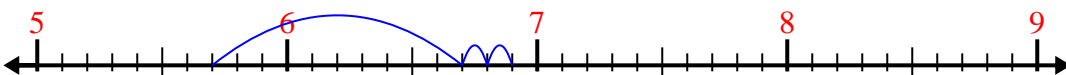
3)  $3.1 + 1.1 =$



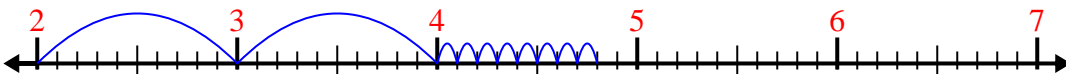
4)  $8.4 + 3.2 =$



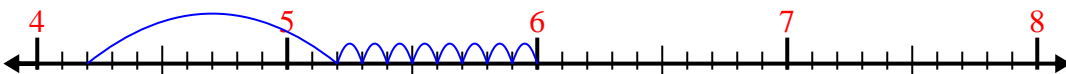
5)  $5.7 + 1.2 =$



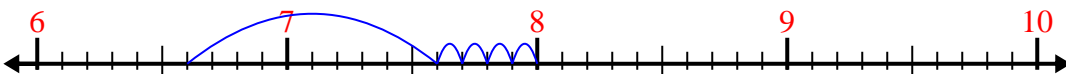
6)  $2 + 2.8 =$



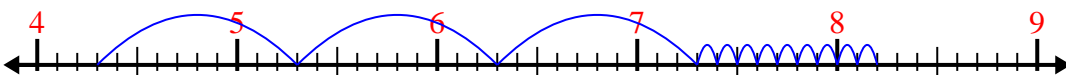
7)  $4.2 + 1.8 =$



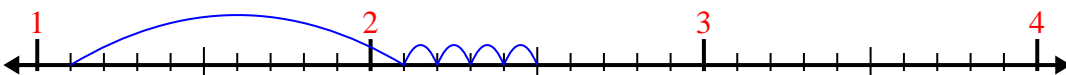
8)  $6.6 + 1.4 =$



9)  $4.3 + 3.9 =$



10)  $1.1 + 1.4 =$



Answers

1. 9.7

2. 9.1

3. 4.2

4. 11.6

5. 6.9

6. 4.8

7. 6.0

8. 8.0

9. 8.2

10. 2.5