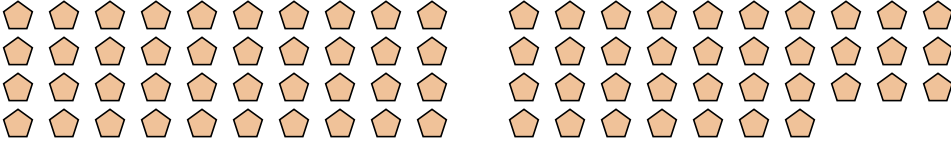




Count the number of shapes shown.

Answers

1) 


1. _____

2. _____

3. _____

4. _____

5. _____

2) 


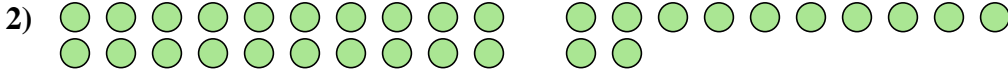
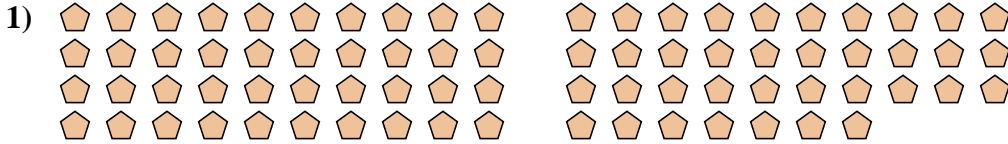
3) 

4) 

5) 



Count the number of shapes shown.



Answers

1. 77

2. 32

3. 14

4. 59

5. 96