



Determine which letter best represents the volume.

Milliliter

A milliliter is equal to about 20 drops of water.



Liter

Many large soda bottles are either 1 or 2 liters.

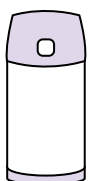
1 Liter = 1,000 Milliliters



Answers

1. _____
2. _____
3. _____
4. _____
5. _____
6. _____
7. _____
8. _____
9. _____

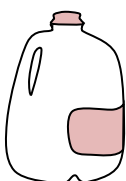
1)



Liquid in a thermos

- A. 20 liters
- B. 3 liters
- C. 440 milliliters
- D. 20 milliliters

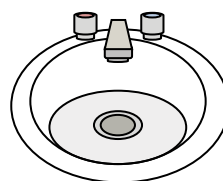
2)



Gallon of Milk

- A. 1 liter
- B. 3.75 liters
- C. 50 milliliters
- D. 750 milliliters

3)



Water in bathroom sink

- A. 500 milliliters
- B. 10 milliliters
- C. 7.5 liters
- D. 2 liters


4)



Measuring Cup

- A. 50 milliliters
- B. 237 milliliters
- C. 1 liter
- D. 237 liters

5)



Soda in a can

- A. 2 liters
- B. 350 milliliters
- C. 350 liters
- D. 2 milliliters

6)



Water for a house plant

- A. 2 milliliters
- B. 80 liters
- C. 500 milliliters
- D. 3 liters

7)



Cafeteria Milk

- A. 237 liters
- B. 1 liter
- C. 237 milliliters
- D. 2 liters

8)



Ink in a pen

- A. 2 milliliters
- B. 0.25 milliliters
- C. 1 liter
- D. 400 milliliters

9)



Liquid in a tea cup

- A. 2 milliliters
- B. 250 milliliters
- C. 2 liters
- D. 5 liters



Determine which letter best represents the volume.

Milliliter

A milliliter is equal to about 20 drops of water.



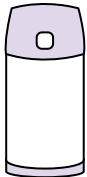
Liter


Many large soda bottles are either 1 or 2 liters.

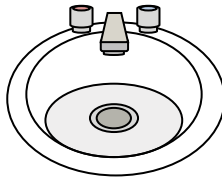
1 Liter = 1,000 Milliliters





Answers


- 1) 
 Liquid in a thermos
 A. 20 liters
 B. 3 liters
 C. 440 milliliters
 D. 20 milliliters


- 2) 
 Gallon of Milk
 A. 1 liter
 B. 3.75 liters
 C. 50 milliliters
 D. 750 milliliters


- 3) 
 Water in bathroom sink
 A. 500 milliliters
 B. 10 milliliters
 C. 7.5 liters
 D. 2 liters


- 4) 
 Measuring Cup
 A. 50 milliliters
 B. 237 milliliters
 C. 1 liter
 D. 237 liters

- 5) 
 Soda in a can
 A. 2 liters
 B. 350 milliliters
 C. 350 liters
 D. 2 milliliters

- 6) 
 Water for a house plant
 A. 2 milliliters
 B. 80 liters
 C. 500 milliliters
 D. 3 liters

- 7) 
 Cafeteria Milk
 A. 237 liters
 B. 1 liter
 C. 237 milliliters
 D. 2 liters

- 8) 
 Ink in a pen
 A. 2 milliliters
 B. 0.25 milliliters
 C. 1 liter
 D. 400 milliliters

- 9) 
 Liquid in a tea cup
 A. 2 milliliters
 B. 250 milliliters
 C. 2 liters
 D. 5 liters

1. **C**
 2. **B**
 3. **C**
 4. **B**
 5. **B**
 6. **C**
 7. **C**
 8. **B**
 9. **B**