



Determine which letter best represents the volume.

**Milliliter**

A milliliter is equal to about 20 drops of water.



**Liter**

Many large soda bottles are either 1 or 2 liters.

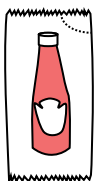
1 Liter = 1,000 Milliliters



**Answers**

1. \_\_\_\_\_
2. \_\_\_\_\_
3. \_\_\_\_\_
4. \_\_\_\_\_
5. \_\_\_\_\_
6. \_\_\_\_\_
7. \_\_\_\_\_
8. \_\_\_\_\_
9. \_\_\_\_\_

1)



Ketchup in a packet

- A. 500 milliliters
- B. 1 liter
- C. 1 milliliter
- D. 50 milliliters


2)



Liquid a spoon holds

- A. 5 liters
- B. 500 milliliters
- C. 5 milliliters
- D. 1 liter

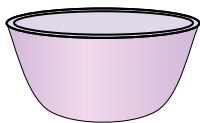
3)



Liquid in a pitcher

- A. 1 liter
- B. 5 liters
- C. 20 milliliters
- D. 500 milliliters

4)



Cereal Bowl

- A. 1 milliliter
- B. 50 milliliters
- C. 475 milliliters
- D. 2 liters


5)



Measuring Cup

- A. 237 liters
- B. 50 milliliters
- C. 237 milliliters
- D. 1 liter

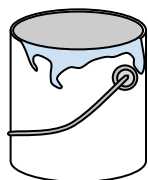
6)



Water in a pool

- A. 12000 milliliters
- B. 12000 liters
- C. 800 liters
- D. 800 milliliters

7)



Paint in a can

- A. 400 milliliters
- B. 20 milliliters
- C. 3.75 liters
- D. 1 liter

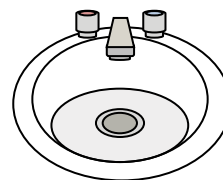
8)



Shampoo in a bottle

- A. 1 milliliter
- B. 1.5 liters
- C. 20 milliliters
- D. 20 liters

9)



Water in bathroom sink

- A. 10 milliliters
- B. 2 liters
- C. 500 milliliters
- D. 7.5 liters



Determine which letter best represents the volume.

**Milliliter**

A milliliter is equal to about 20 drops of water.



**Liter**

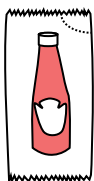
Many large soda bottles are either 1 or 2 liters.

1 Liter = 1,000 Milliliters



**Answers**

1)



Ketchup in a packet

- A. 500 milliliters
- B. 1 liter
- C. 1 milliliter
- D. 50 milliliters


2)



Liquid a spoon holds

- A. 5 liters
- B. 500 milliliters
- C. 5 milliliters
- D. 1 liter

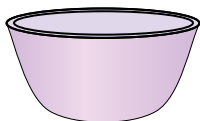
3)



Liquid in a pitcher

- A. 1 liter
- B. 5 liters
- C. 20 milliliters
- D. 500 milliliters

4)



Cereal Bowl

- A. 1 milliliter
- B. 50 milliliters
- C. 475 milliliters
- D. 2 liters

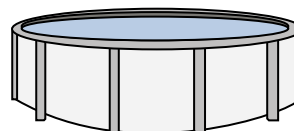
5)



Measuring Cup

- A. 237 liters
- B. 50 milliliters
- C. 237 milliliters
- D. 1 liter

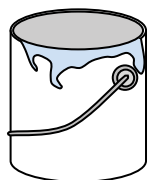
6)



Water in a pool

- A. 12000 milliliters
- B. 12000 liters
- C. 800 liters
- D. 800 milliliters

7)



Paint in a can

- A. 400 milliliters
- B. 20 milliliters
- C. 3.75 liters
- D. 1 liter

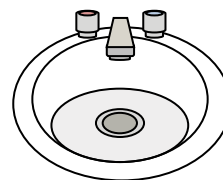
8)



Shampoo in a bottle

- A. 1 milliliter
- B. 1.5 liters
- C. 20 milliliters
- D. 20 liters

9)



Water in bathroom sink

- A. 10 milliliters
- B. 2 liters
- C. 500 milliliters
- D. 7.5 liters

- 1.   **C**
- 2.   **C**
- 3.   **B**
- 4.   **C**
- 5.   **C**
- 6.   **B**
- 7.   **C**
- 8.   **B**
- 9.   **D**