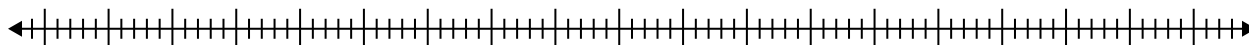


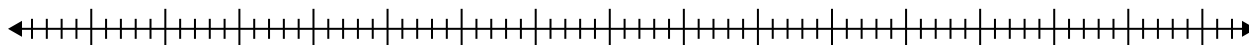


Create a box plot from the set of numbers.

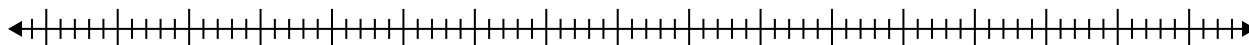
- 1) 52 , 70 , 21 , 22 , 47 , 25 , 70 , 32 , 89 , 90 , 96 , 29 , 39



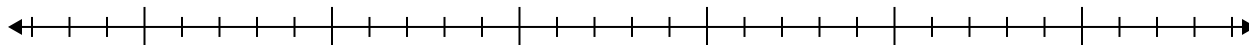
- 2) 65 , 37 , 30 , 30 , 75 , 79 , 87 , 61



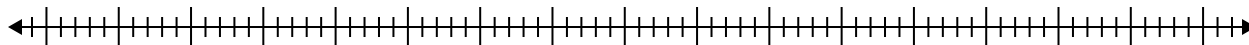
- 3) 79 , 91 , 61 , 29 , 60 , 88 , 32 , 97



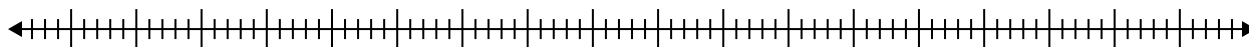
- 4) 8 , 5 , 12 , 13 , 14 , 5 , 10 , 12 , 17 , 8



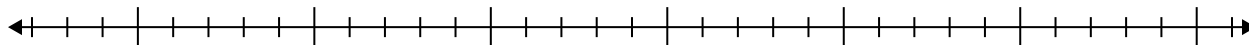
- 5) 92 , 30 , 23 , 45 , 62 , 90 , 90



- 6) 69 , 23 , 61 , 38 , 84 , 71 , 94 , 91 , 69



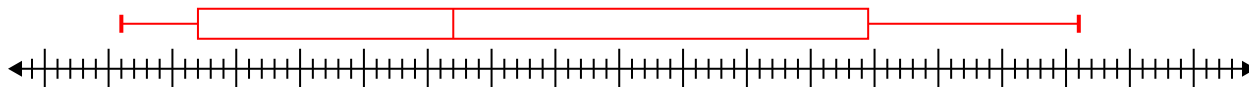
- 7) 18 , 7 , 13 , 11 , 6 , 13 , 19



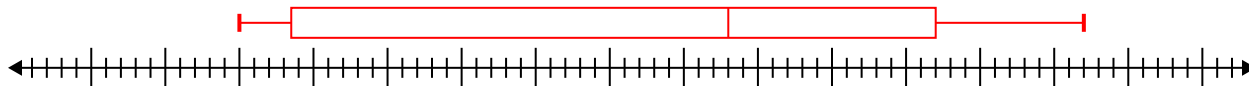


Create a box plot from the set of numbers.

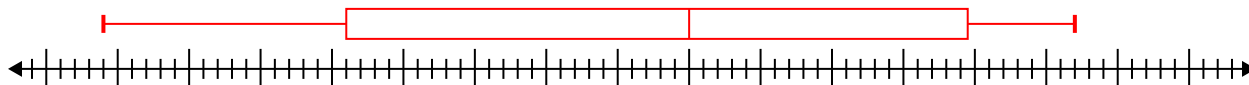
1) 52, 70, 21, 22, 47, 25, 70, 32, 89, 90, 96, 29, 39 **Min=21 Max=96 q1=27 Q2=47 q3=79.5**



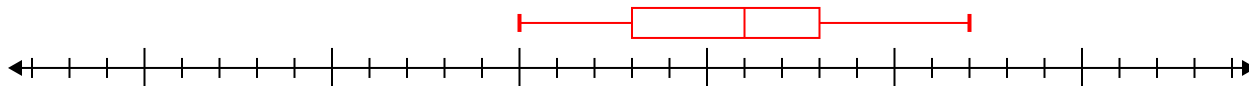
2) 65, 37, 30, 30, 75, 79, 87, 61 **Min=30 Max=87 q1=33.5 Q2=63 q3=77**



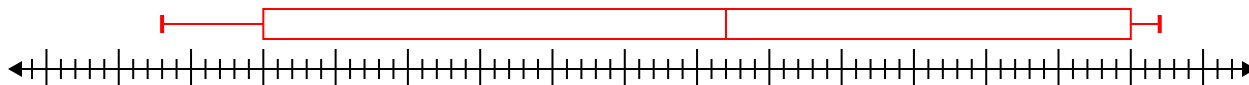
3) 79, 91, 61, 29, 60, 88, 32, 97 **Min=29 Max=97 q1=46 Q2=70 q3=89.5**



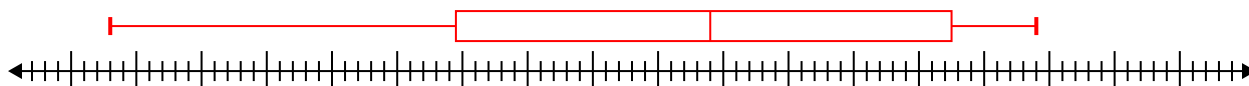
4) 8, 5, 12, 13, 14, 5, 10, 12, 17, 8 **Min=5 Max=17 q1=8 Q2=11 q3=13**



5) 92, 30, 23, 45, 62, 90, 90 **Min=23 Max=92 q1=30 Q2=62 q3=90**



6) 69, 23, 61, 38, 84, 71, 94, 91, 69 **Min=23 Max=94 q1=49.5 Q2=69 q3=87.5**



7) 18, 7, 13, 11, 6, 13, 19 **Min=6 Max=19 q1=7 Q2=13 q3=18**

