




Solve each problem.



Each  = 2 votes

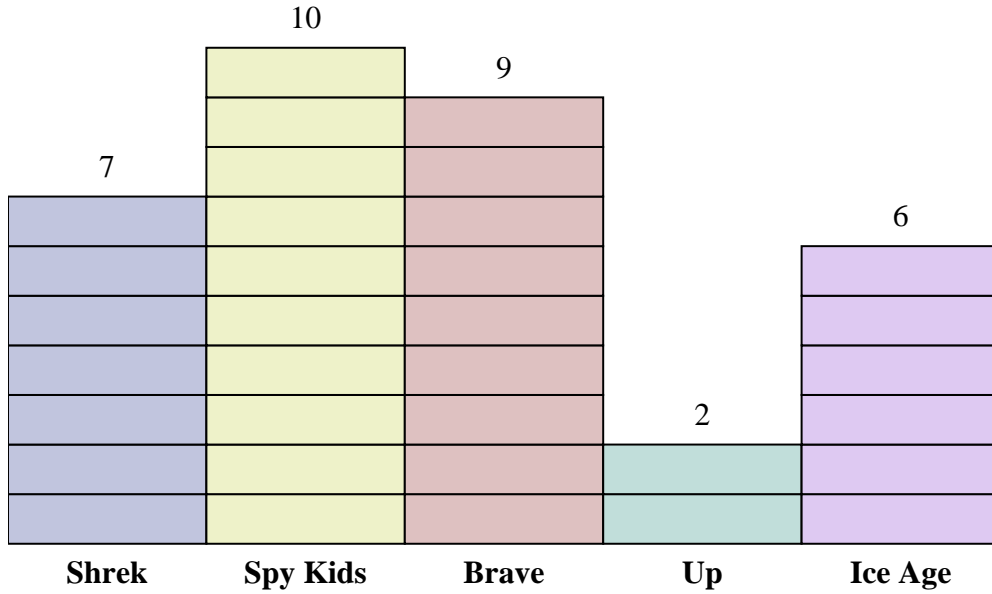
Answers

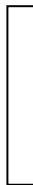
1. _____
2. _____
3. _____
4. _____
5. _____
6. _____
7. _____
8. _____
9. _____
10. _____

- 1) How many more votes did Shrek receive than Up?
- 2) Which movie received the most votes?
- 3) Which movie received the fewest votes?
- 4) What is the total number of students who voted?
- 5) Did fewer students vote for Spy Kids or for Up?
- 6) Did more people vote for Shrek or for Ice Age?
- 7) Which movie received exactly 14 votes?
- 8) How many people voted for Ice Age?
- 9) What is the combined number of people who voted for Brave and Shrek?
- 10) What is the difference in the number of people who voted for Shrek and the number who voted for Spy Kids?



Solve each problem.



Each  = 2 votes

Answers

1. 10
2. Spy Kids
3. Up
4. 68
5. Up
6. Shrek
7. Shrek
8. 12
9. 32
10. 6

- 1) How many more votes did Shrek receive than Up?
- 2) Which movie received the most votes?
- 3) Which movie received the fewest votes?
- 4) What is the total number of students who voted?
- 5) Did fewer students vote for Spy Kids or for Up?
- 6) Did more people vote for Shrek or for Ice Age?
- 7) Which movie received exactly 14 votes?
- 8) How many people voted for Ice Age?
- 9) What is the combined number of people who voted for Brave and Shrek?
- 10) What is the difference in the number of people who voted for Shrek and the number who voted for Spy Kids?