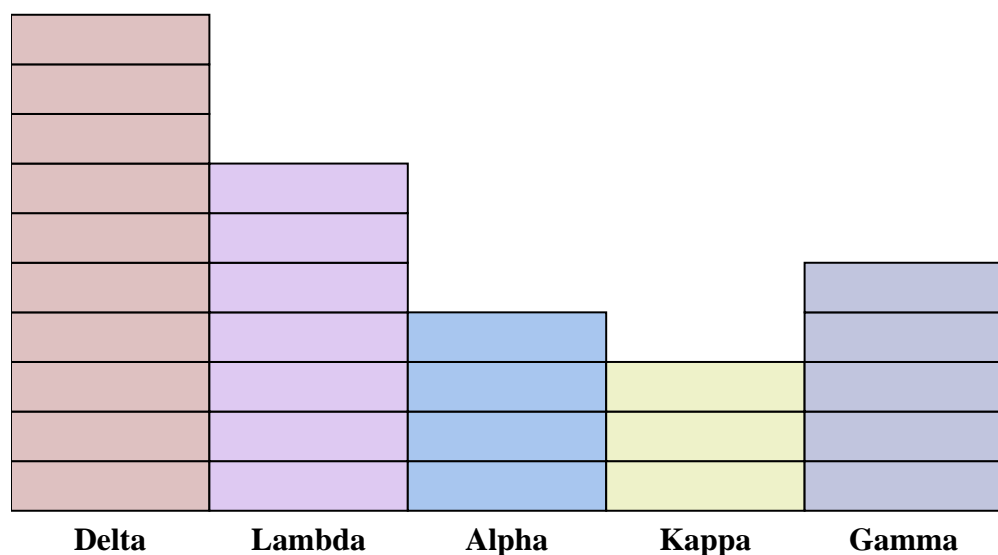





Solve each problem.

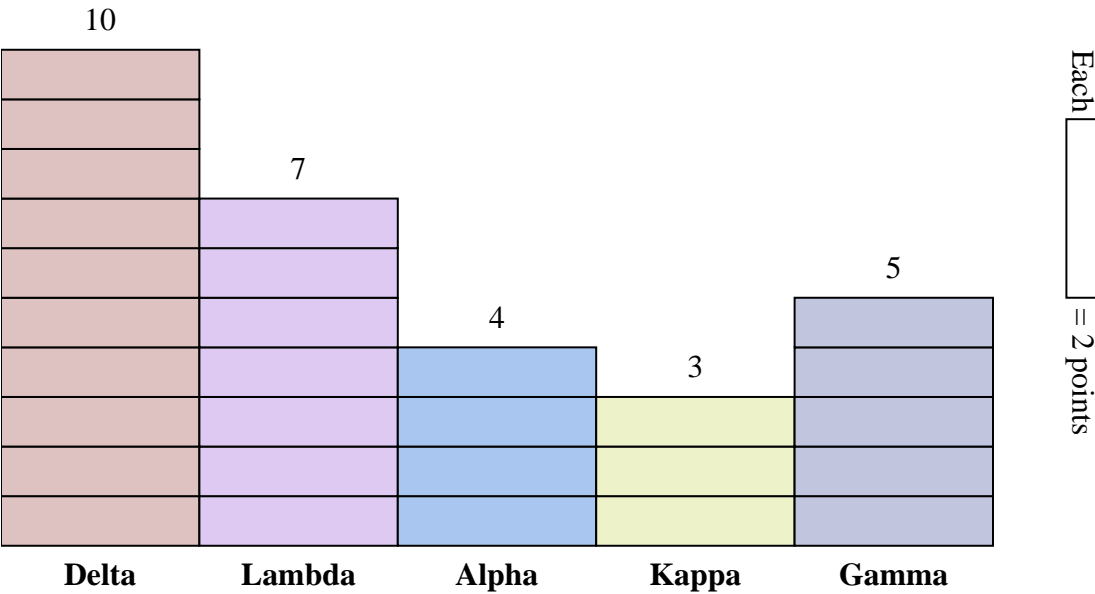
Each  = 2 points**Answers**

1. \_\_\_\_\_
2. \_\_\_\_\_
3. \_\_\_\_\_
4. \_\_\_\_\_
5. \_\_\_\_\_
6. \_\_\_\_\_
7. \_\_\_\_\_
8. \_\_\_\_\_
9. \_\_\_\_\_
10. \_\_\_\_\_

- 1) How many more points did team Alpha score than team Kappa?
- 2) Which team scored the most points?
- 3) Which team scored the fewest points?
- 4) What is the total number of points earned in the game?
- 5) Did team Gamma or team Lambda score fewer points?
- 6) Did team Kappa or team Gamma score more points?
- 7) Which team scored 8 points?
- 8) How many points did team Lambda score?
- 9) What is the combined points scored by Lambda and Kappa?
- 10) What is the difference in the number of points Delta scored and the number Lambda scored?



Solve each problem.



- 1) How many more points did team Alpha score than team Kappa?
- 2) Which team scored the most points?
- 3) Which team scored the fewest points?
- 4) What is the total number of points earned in the game?
- 5) Did team Gamma or team Lambda score fewer points?
- 6) Did team Kappa or team Gamma score more points?
- 7) Which team scored 8 points?
- 8) How many points did team Lambda score?
- 9) What is the combined points scored by Lambda and Kappa?
- 10) What is the difference in the number of points Delta scored and the number Lambda scored?

Answers

- 1. **2**
- 2. **Delta**
- 3. **Kappa**
- 4. **58**
- 5. **Gamma**
- 6. **Gamma**
- 7. **Alpha**
- 8. **14**
- 9. **20**
- 10. **6**