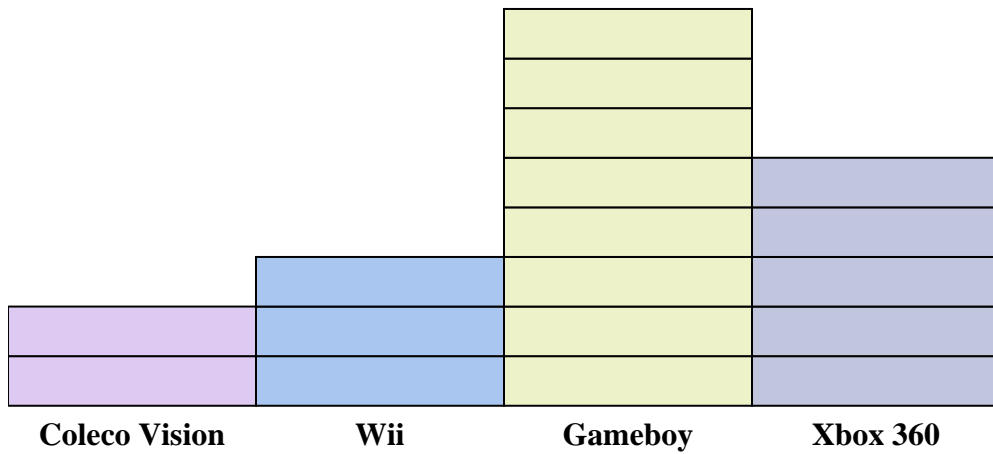
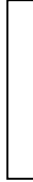




Solve each problem.



Each  = 2 people owned

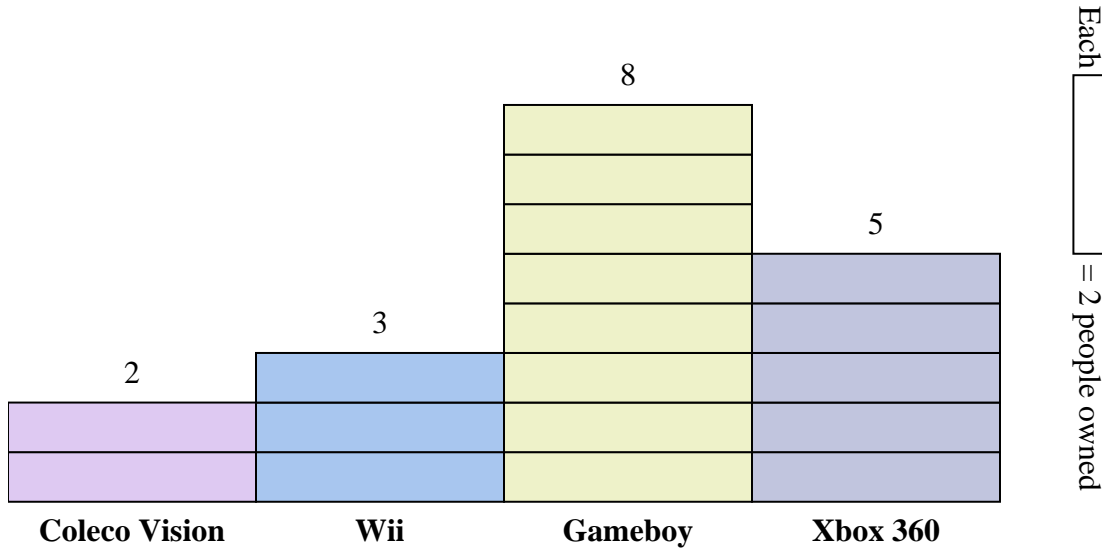
Answers

1. _____
2. _____
3. _____
4. _____
5. _____
6. _____
7. _____
8. _____
9. _____
10. _____

- 1) How many more people owned a Gameboy than owned a Xbox 360?
- 2) Which console did the largest number of people own?
- 3) Which console did the fewest number of people own?
- 4) How many consoles total did the people own?
- 5) Did fewer people own a Wiis or a Gameboys?
- 6) Did more people own a Xbox 360s or a Wiis?
- 7) Which console did exactly 6 people own?
- 8) How many people owned a Gameboy?
- 9) What is the combined number of Gameboys and Coleco Visions owned?
- 10) What is the difference in the number of people who owned a Coleco Vision and the number who owned a Wii?



Solve each problem.



- How many more people owned a Gameboy than owned a Xbox 360?
- Which console did the largest number of people own?
- Which console did the fewest number of people own?
- How many consoles total did the people own?
- Did fewer people own a Wiis or a Gameboys?
- Did more people own a Xbox 360s or a Wiis?
- Which console did exactly 6 people own?
- How many people owned a Gameboy?
- What is the combined number of Gameboys and Coleco Visions owned?
- What is the difference in the number of people who owned a Coleco Vision and the number who owned a Wii?

Answers

- 6
- Gameboy
- Coleco Vision
- 36
- Wii
- Xbox 360
- Wii
- 16
- 20
- 2