

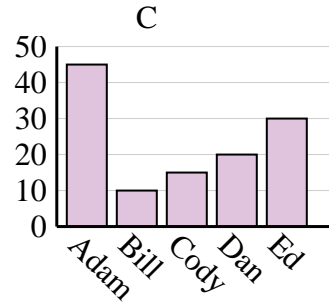
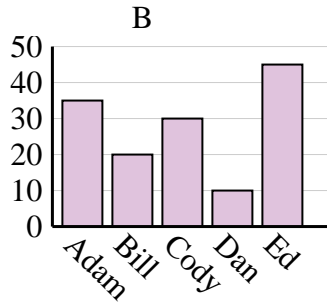
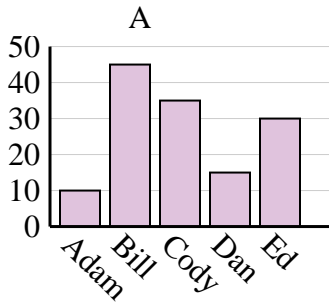


Determine which graph (A, B or C) best represents the information in the table.

Answers

1)

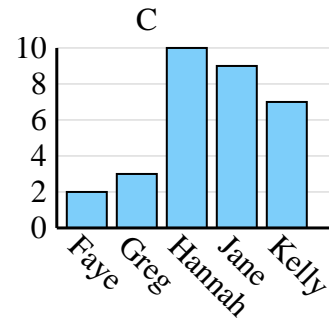
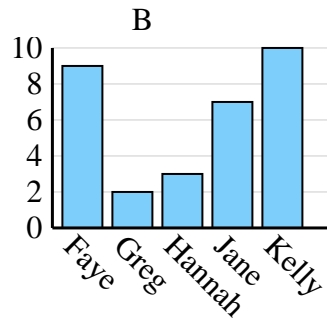
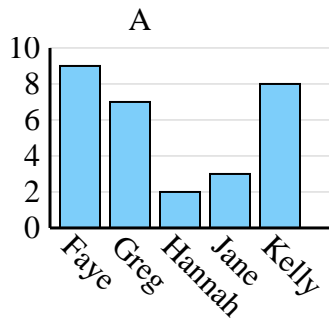
Name	Adam	Bill	Cody	Dan	Ed
Points	45	10	15	20	30



1. \_\_\_\_\_
2. \_\_\_\_\_
3. \_\_\_\_\_
4. \_\_\_\_\_

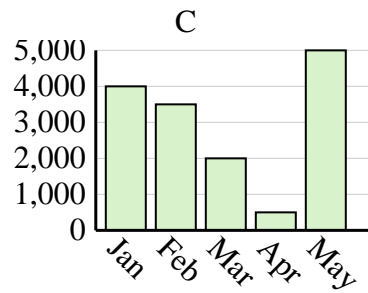
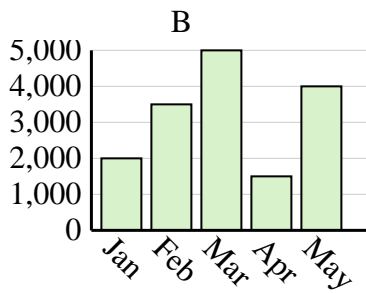
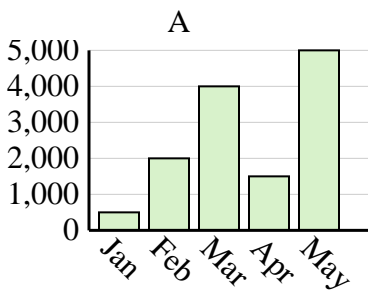
2)

Name	Faye	Greg	Hannah	Jane	Kelly
States Lived In	9	2	3	7	10



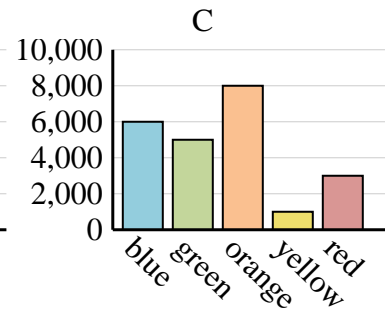
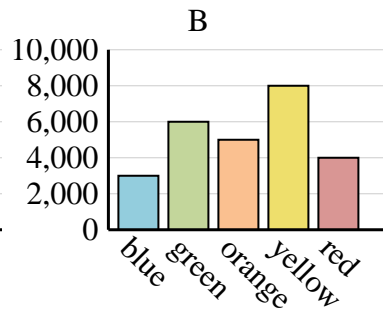
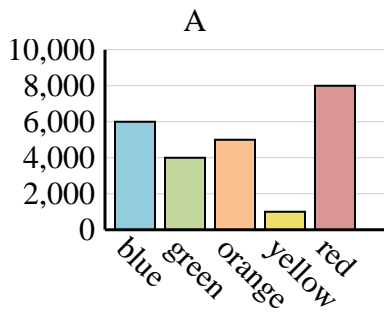
3)

Sales	Jan	Feb	Mar	Apr	May
Month	2,000	3,500	5,000	1,500	4,000



4)

Favorite Color	blue	green	orange	yellow	red
People	6,000	5,000	8,000	1,000	3,000

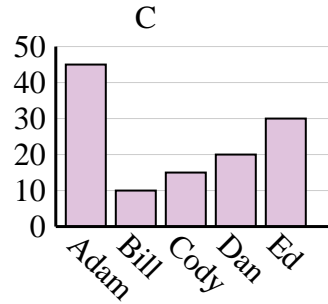
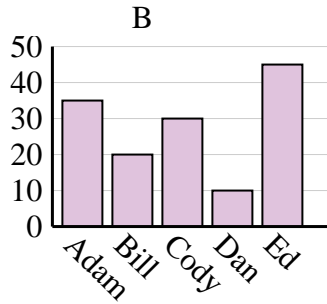
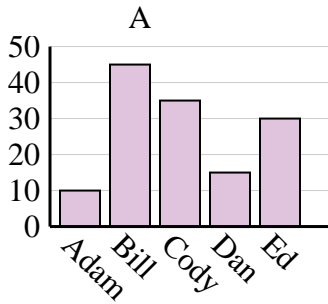




Determine which graph (A, B or C) best represents the information in the table.

Answers

<b>Name</b>	Adam	Bill	Cody	Dan	Ed
<b>Points</b>	45	10	15	20	30



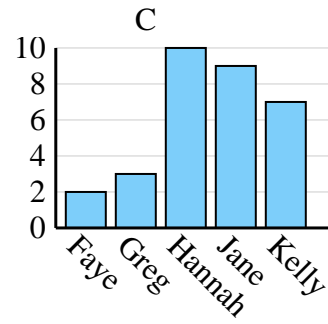
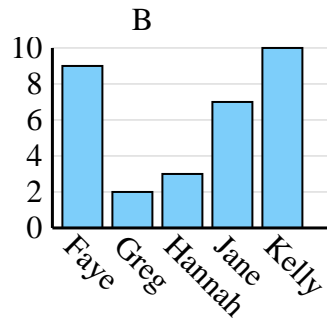
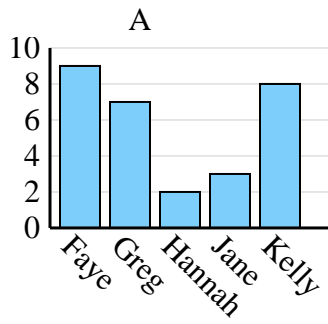
1. **C**

2. **B**

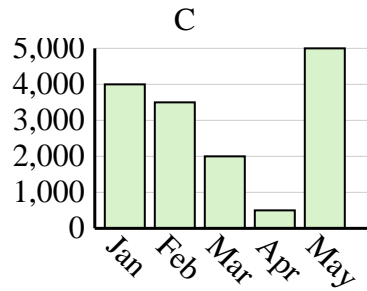
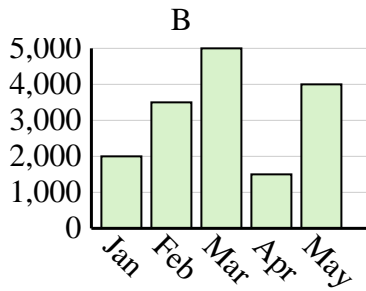
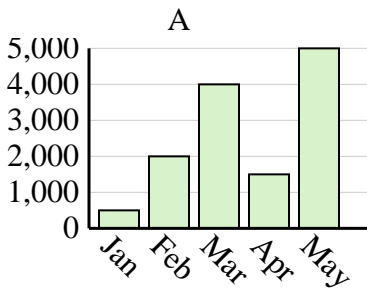
3. **B**

4. **C**

<b>Name</b>	Faye	Greg	Hannah	Jane	Kelly
<b>States Lived In</b>	9	2	3	7	10



<b>Sales</b>	Jan	Feb	Mar	Apr	May
<b>Month</b>	2,000	3,500	5,000	1,500	4,000



<b>Favorite Color</b>	blue	green	orange	yellow	red
<b>People</b>	6,000	5,000	8,000	1,000	3,000

