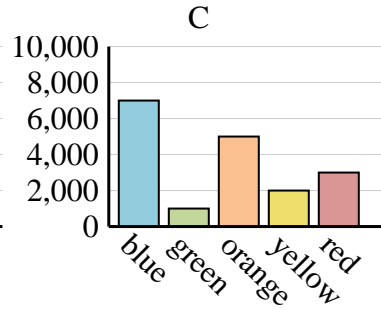
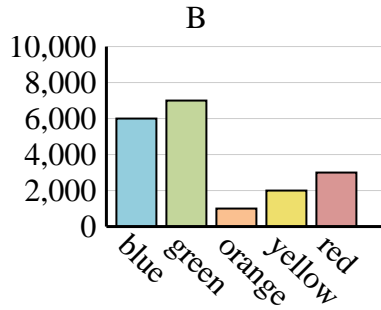
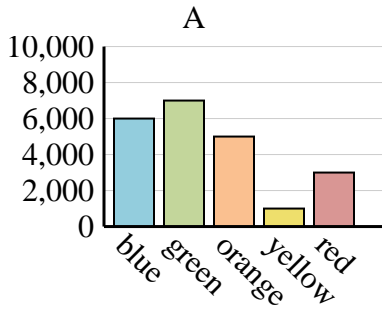




Determine which graph (A, B or C) best represents the information in the table.

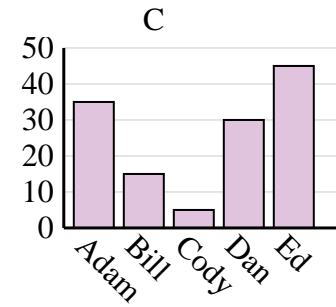
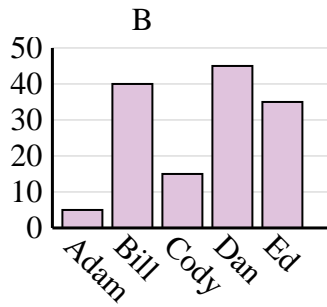
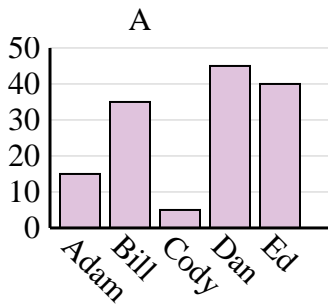
Answers

Favorite Color	blue	green	orange	yellow	red
People	6,000	7,000	1,000	2,000	3,000

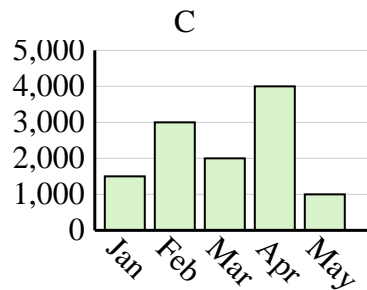
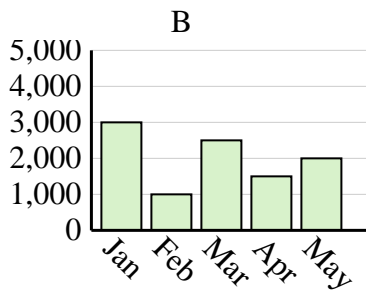
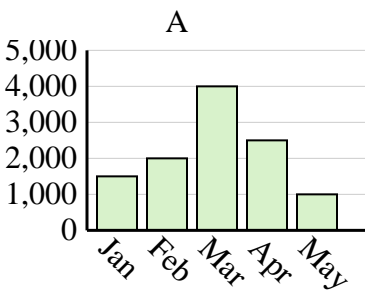


1. _____
2. _____
3. _____
4. _____

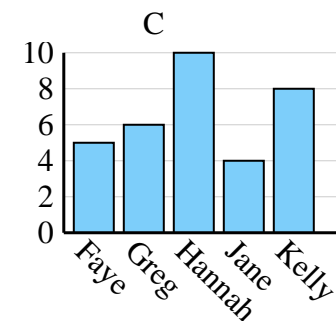
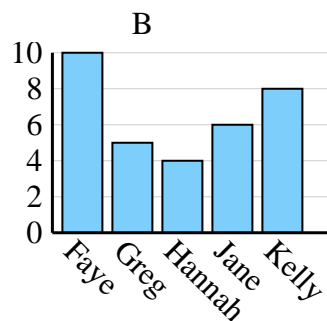
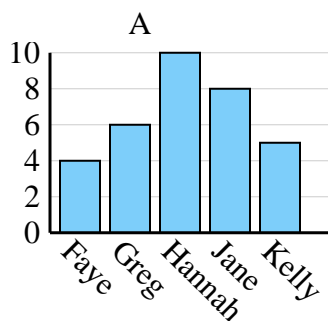
Name	Adam	Bill	Cody	Dan	Ed
Points	15	35	5	45	40



Sales	Jan	Feb	Mar	Apr	May
Month	3,000	1,000	2,500	1,500	2,000



Name	Faye	Greg	Hannah	Jane	Kelly
States Lived In	5	6	10	4	8

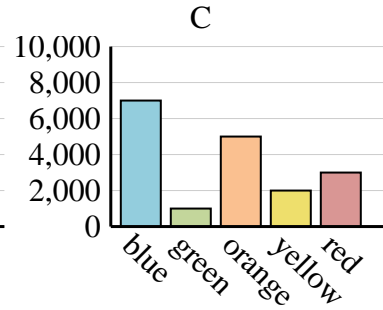
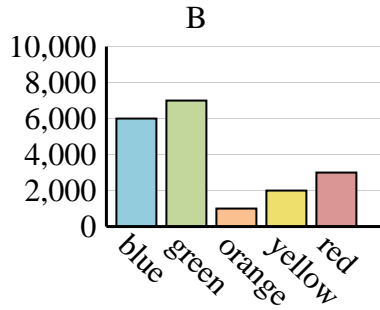
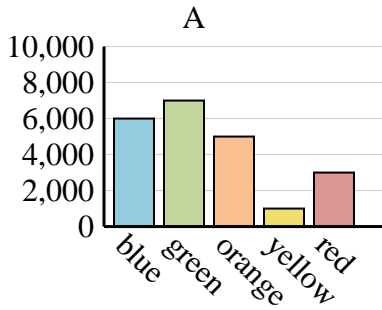




Determine which graph (A, B or C) best represents the information in the table.

Answers

Favorite Color	blue	green	orange	yellow	red
People	6,000	7,000	1,000	2,000	3,000



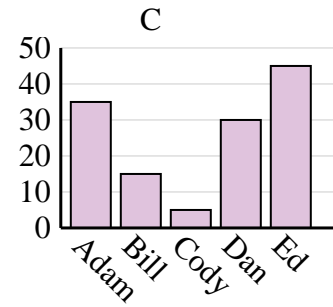
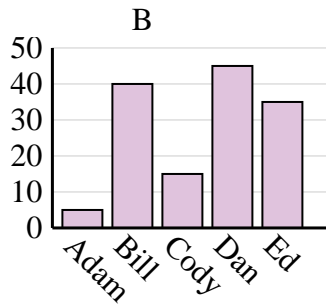
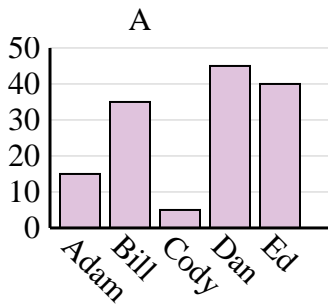
1. **B**

2. **A**

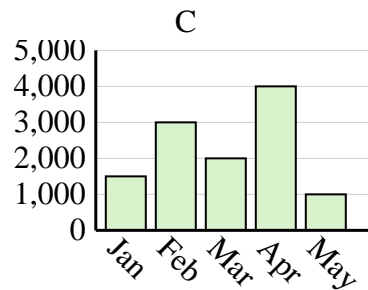
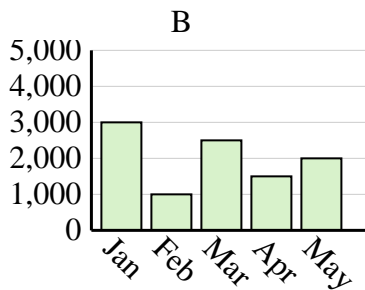
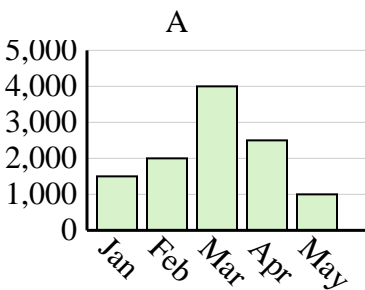
3. **B**

4. **C**

Name	Adam	Bill	Cody	Dan	Ed
Points	15	35	5	45	40



Sales	Jan	Feb	Mar	Apr	May
Month	3,000	1,000	2,500	1,500	2,000



Name	Faye	Greg	Hannah	Jane	Kelly
States Lived In	5	6	10	4	8

