

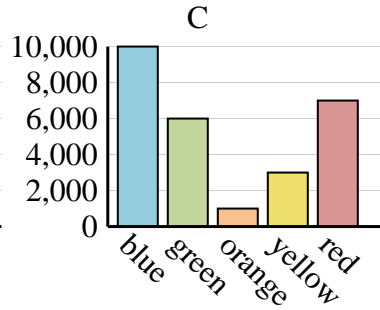
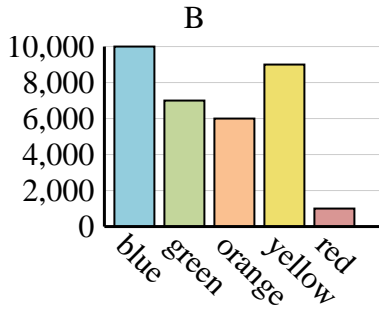
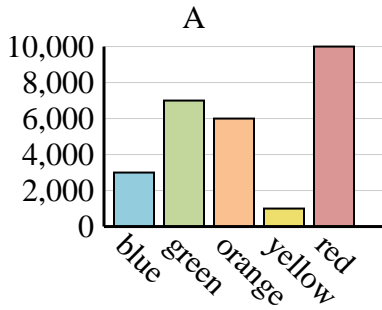


Determine which graph (A, B or C) best represents the information in the table.

Answers

1)

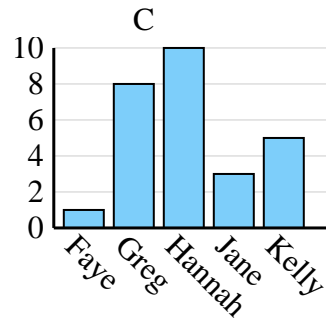
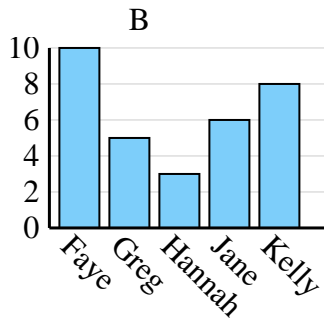
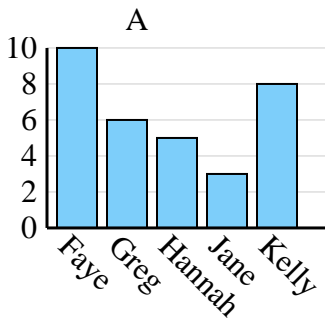
Favorite Color	blue	green	orange	yellow	red
People	10,000	6,000	1,000	3,000	7,000



1. _____
2. _____
3. _____
4. _____

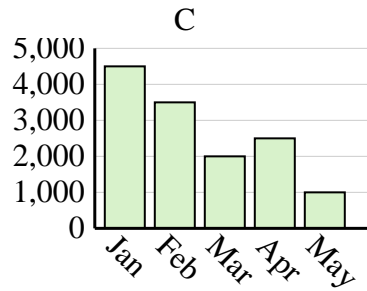
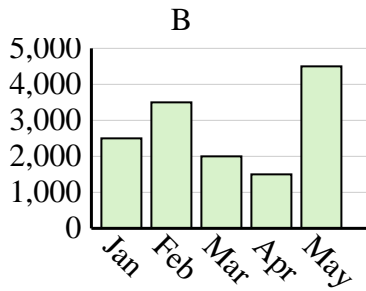
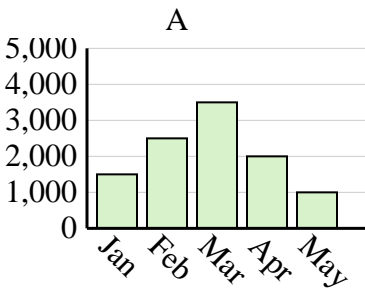
2)

Name	Faye	Greg	Hannah	Jane	Kelly
States Lived In	1	8	10	3	5



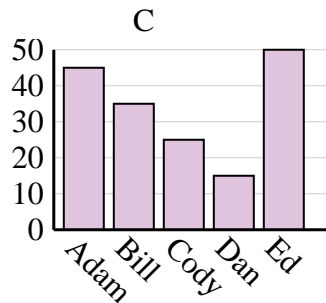
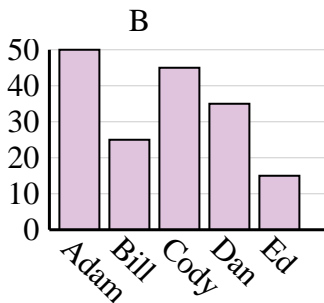
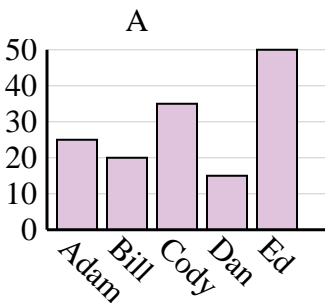
3)

Sales	Jan	Feb	Mar	Apr	May
Month	4,500	3,500	2,000	2,500	1,000



4)

Name	Adam	Bill	Cody	Dan	Ed
Points	45	35	25	15	50

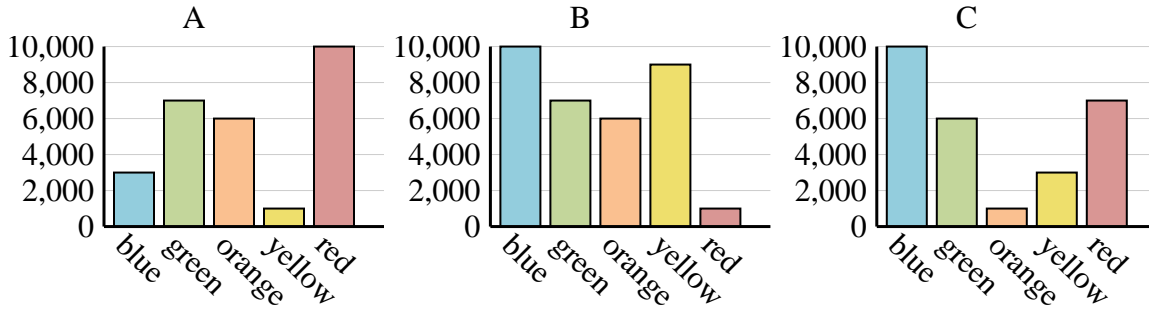




Determine which graph (A, B or C) best represents the information in the table.

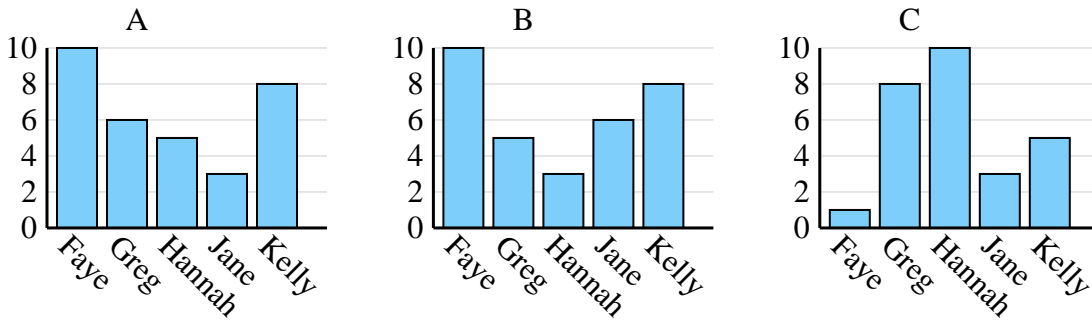
Answers

Favorite Color	blue	green	orange	yellow	red
People	10,000	6,000	1,000	3,000	7,000

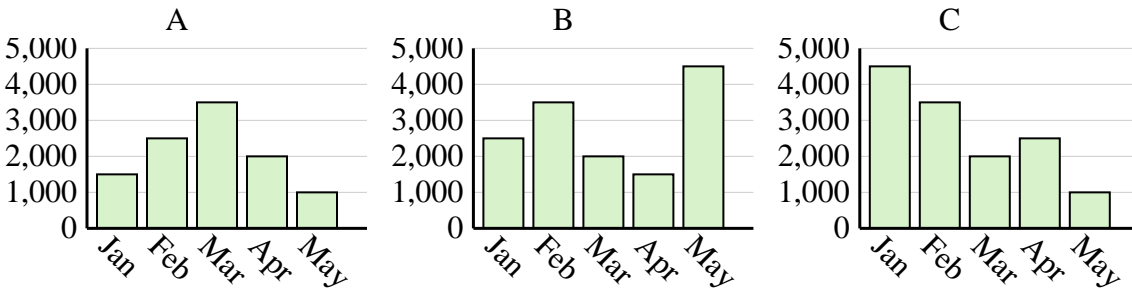


1. **C**
2. **C**
3. **C**
4. **C**

Name	Faye	Greg	Hannah	Jane	Kelly
States Lived In	1	8	10	3	5



Sales	Jan	Feb	Mar	Apr	May
Month	4,500	3,500	2,000	2,500	1,000



Name	Adam	Bill	Cody	Dan	Ed
Points	45	35	25	15	50

