

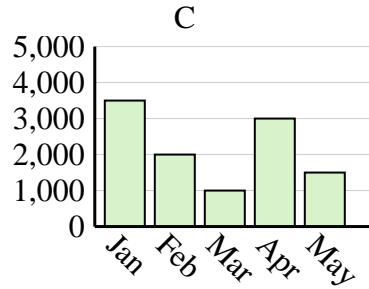
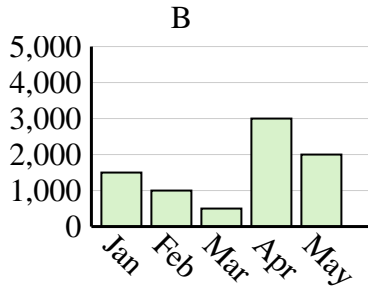
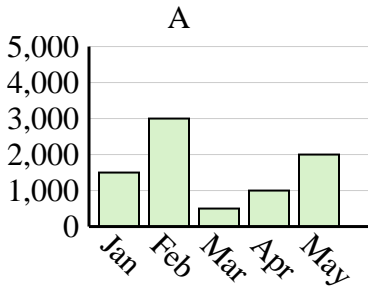


Determine which graph (A, B or C) best represents the information in the table.

Answers

1)

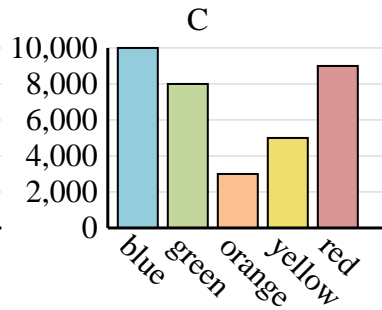
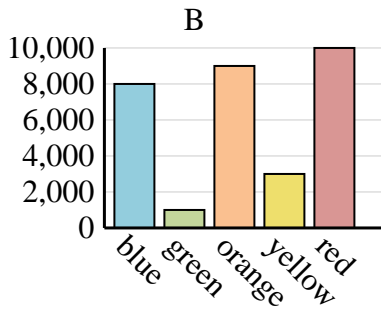
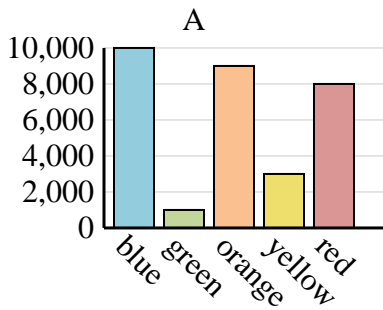
Sales	Jan	Feb	Mar	Apr	May
Month	3,500	2,000	1,000	3,000	1,500



1. \_\_\_\_\_
2. \_\_\_\_\_
3. \_\_\_\_\_
4. \_\_\_\_\_

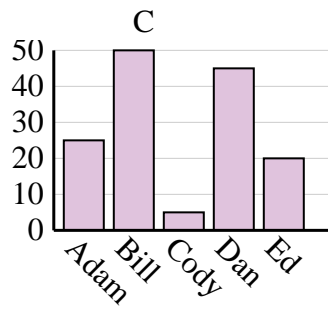
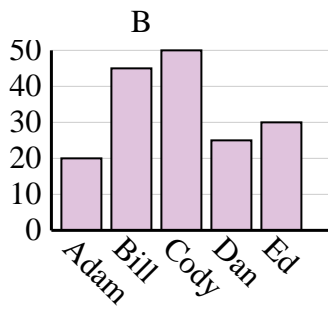
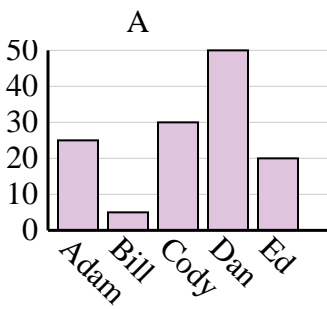
2)

Favorite Color	blue	green	orange	yellow	red
People	10,000	1,000	9,000	3,000	8,000



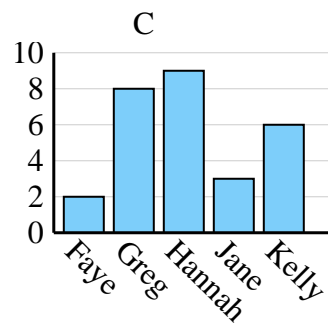
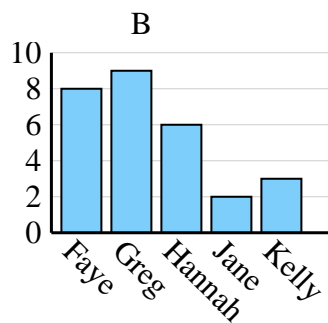
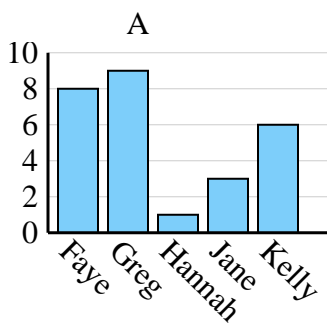
3)

Name	Adam	Bill	Cody	Dan	Ed
Points	25	5	30	50	20



4)

Name	Faye	Greg	Hannah	Jane	Kelly
States Lived In	8	9	1	3	6

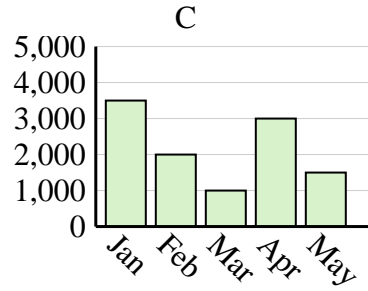
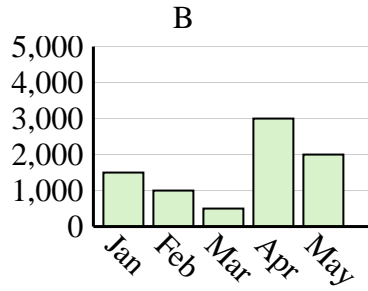
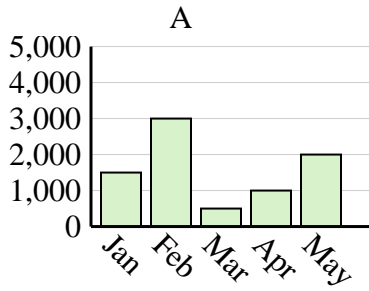




Determine which graph (A, B or C) best represents the information in the table.

Answers

<b>Sales</b>	Jan	Feb	Mar	Apr	May
<b>Month</b>	3,500	2,000	1,000	3,000	1,500



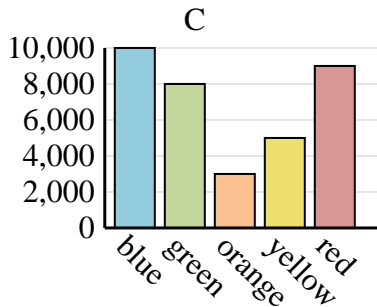
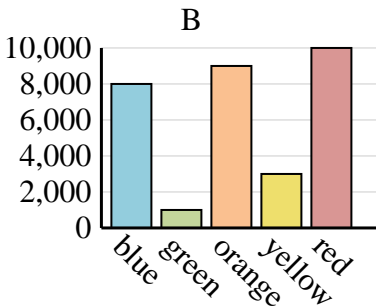
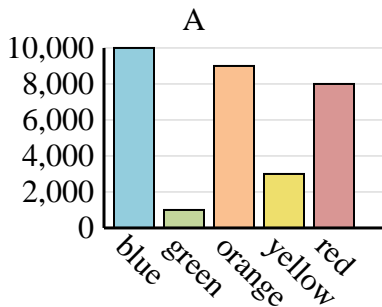
1. **C**

2. **A**

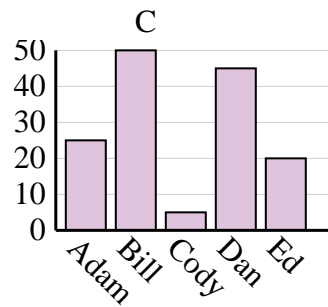
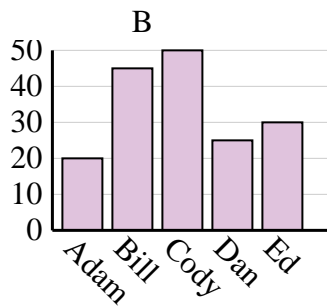
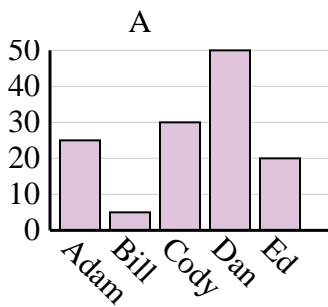
3. **A**

4. **A**

<b>Favorite Color</b>	blue	green	orange	yellow	red
<b>People</b>	10,000	1,000	9,000	3,000	8,000



<b>Name</b>	Adam	Bill	Cody	Dan	Ed
<b>Points</b>	25	5	30	50	20



<b>Name</b>	Faye	Greg	Hannah	Jane	Kelly
<b>States Lived In</b>	8	9	1	3	6

