

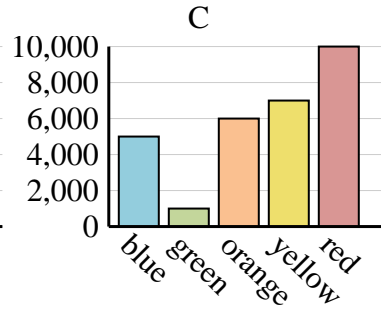
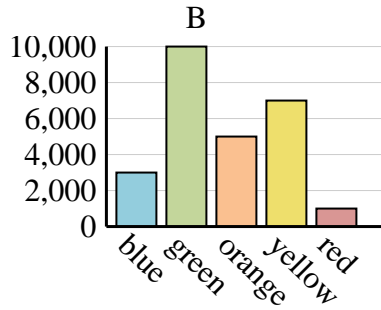
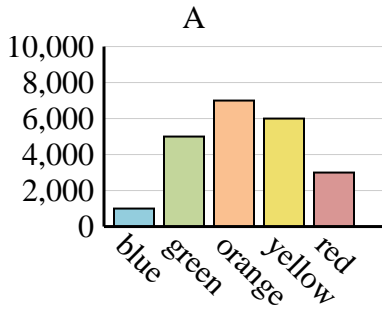


Determine which graph (A, B or C) best represents the information in the table.

Answers

1)

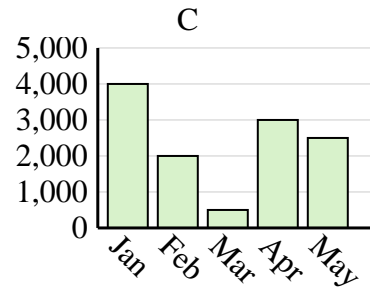
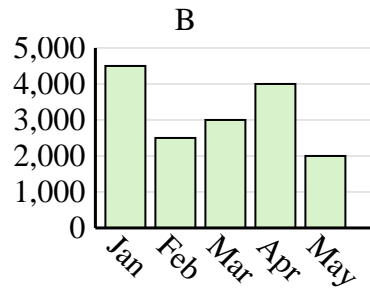
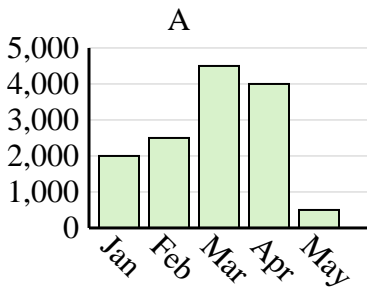
Favorite Color	blue	green	orange	yellow	red
People	1,000	5,000	7,000	6,000	3,000



1. _____
2. _____
3. _____
4. _____

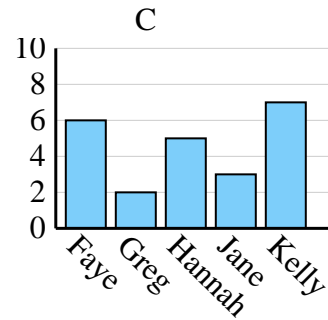
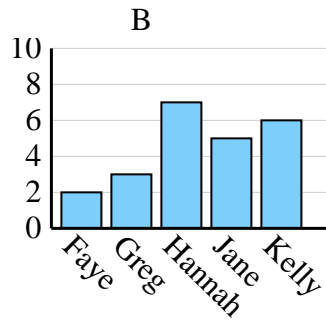
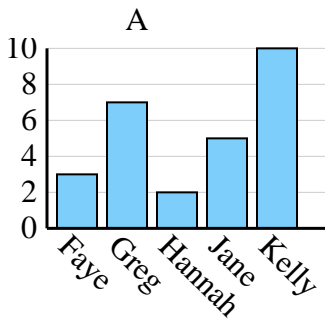
2)

Sales	Jan	Feb	Mar	Apr	May
Month	2,000	2,500	4,500	4,000	500



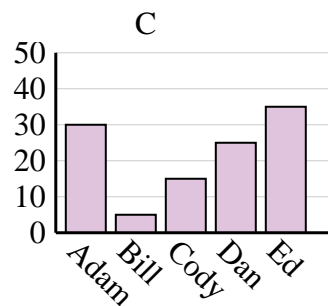
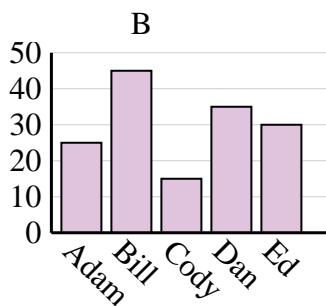
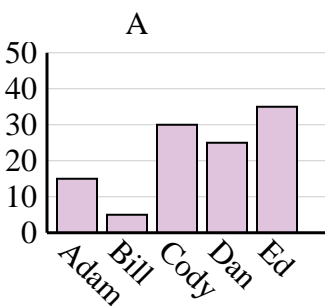
3)

Name	Faye	Greg	Hannah	Jane	Kelly
States Lived In	3	7	2	5	10



4)

Name	Adam	Bill	Cody	Dan	Ed
Points	25	45	15	35	30

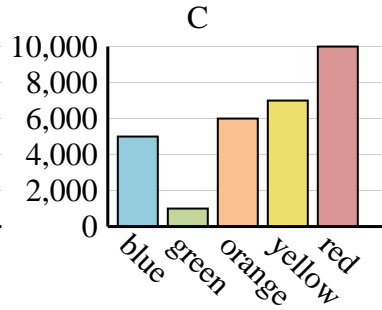
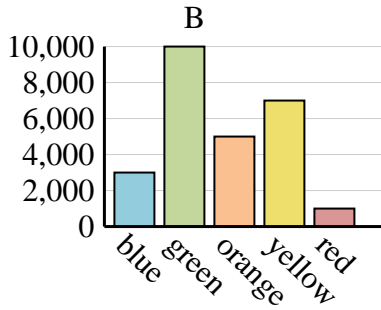
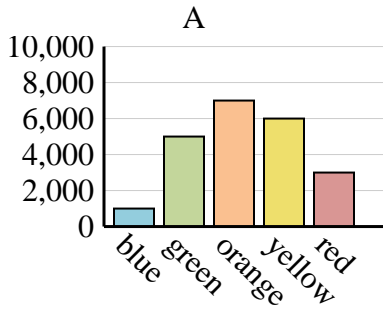




Determine which graph (A, B or C) best represents the information in the table.

Answers

Favorite Color	blue	green	orange	yellow	red
People	1,000	5,000	7,000	6,000	3,000



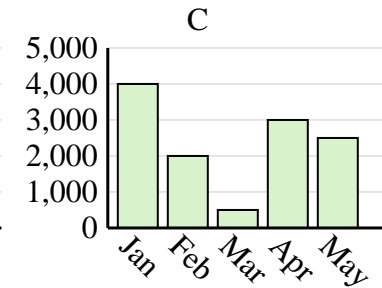
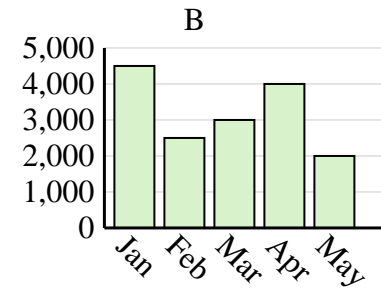
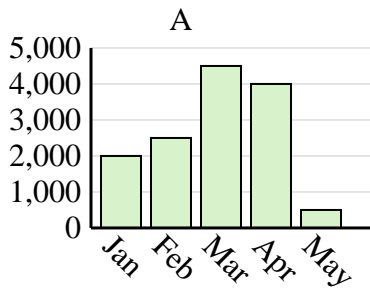
1. **A**

2. **A**

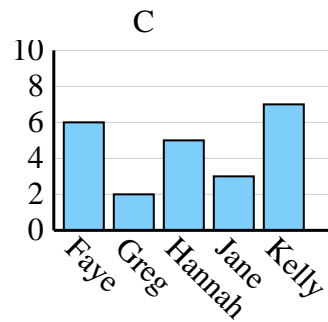
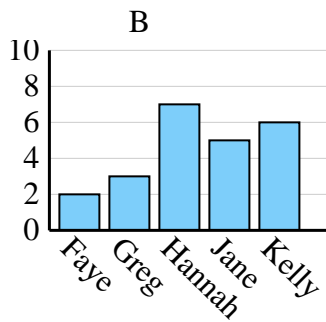
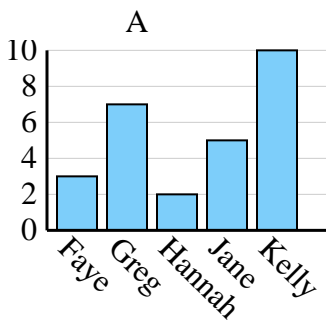
3. **A**

4. **B**

Sales	Jan	Feb	Mar	Apr	May
Month	2,000	2,500	4,500	4,000	500



Name	Faye	Greg	Hannah	Jane	Kelly
States Lived In	3	7	2	5	10



Name	Adam	Bill	Cody	Dan	Ed
Points	25	45	15	35	30

