

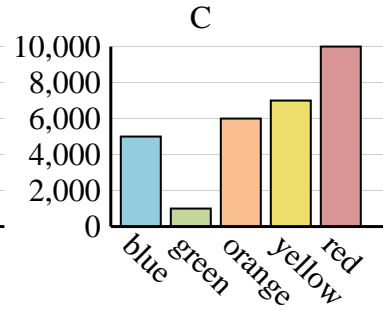
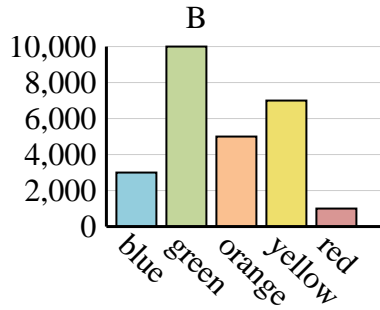
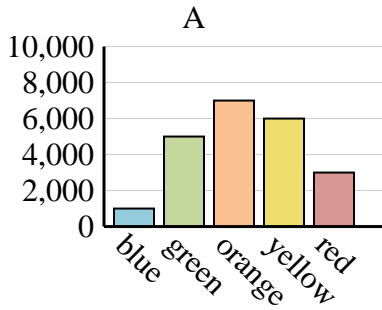


Determine which graph (A, B or C) best represents the information in the table.

Answers

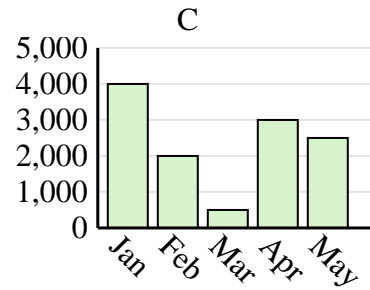
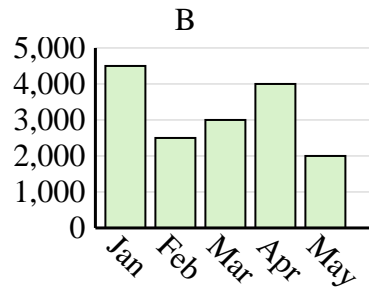
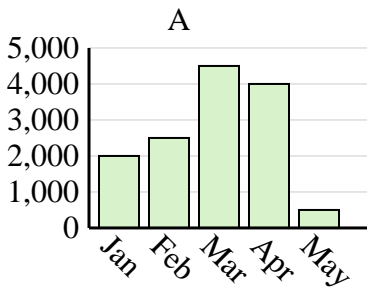
1)

Favorite Color	blue	green	orange	yellow	red
People	1,000	5,000	7,000	6,000	3,000



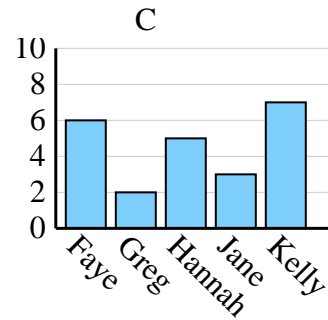
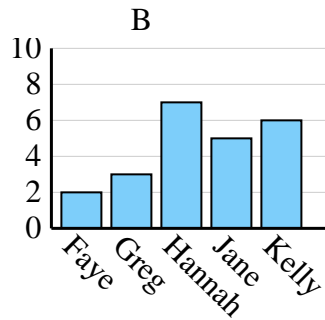
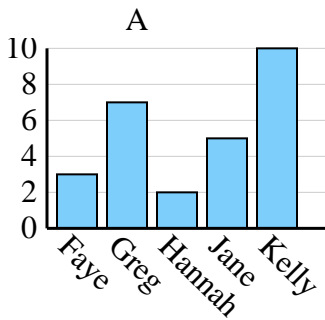
2)

Sales	Jan	Feb	Mar	Apr	May
Month	2,000	2,500	4,500	4,000	500



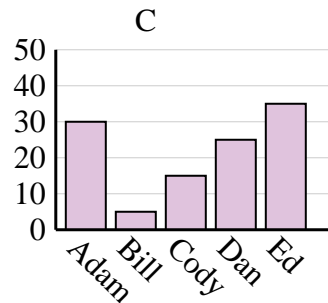
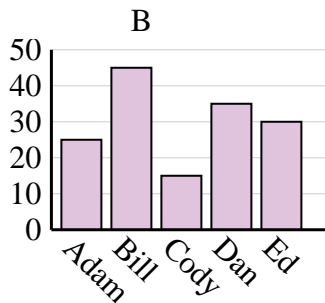
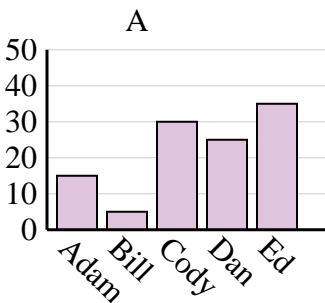
3)

Name	Faye	Greg	Hannah	Jane	Kelly
States Lived In	3	7	2	5	10



4)

Name	Adam	Bill	Cody	Dan	Ed
Points	25	45	15	35	30



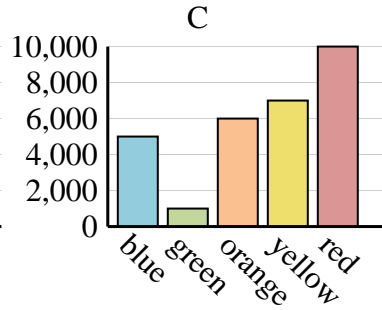
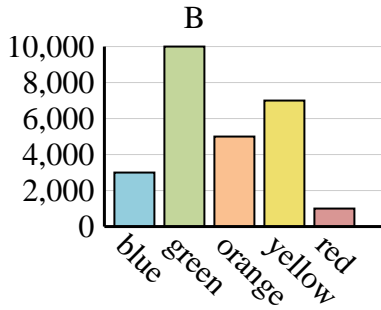
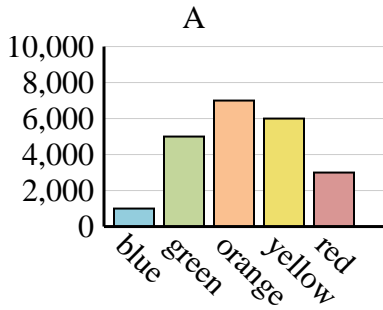
1. \_\_\_\_\_
2. \_\_\_\_\_
3. \_\_\_\_\_
4. \_\_\_\_\_



Determine which graph (A, B or C) best represents the information in the table.

Answers

<b>Favorite Color</b>	blue	green	orange	yellow	red
<b>People</b>	1,000	5,000	7,000	6,000	3,000



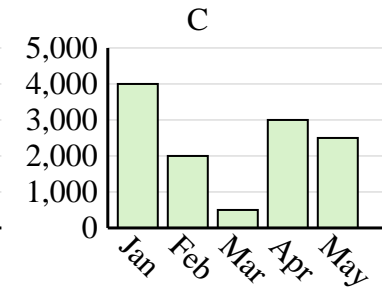
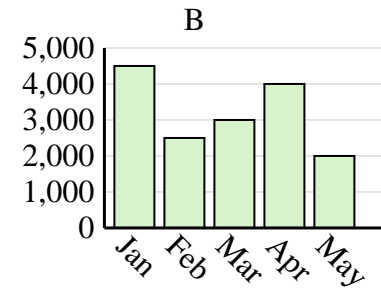
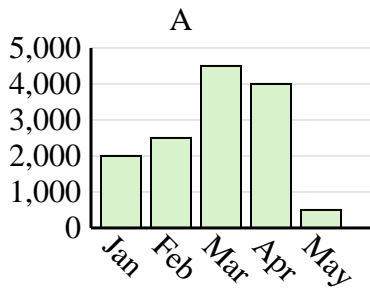
1. **A**

2. **A**

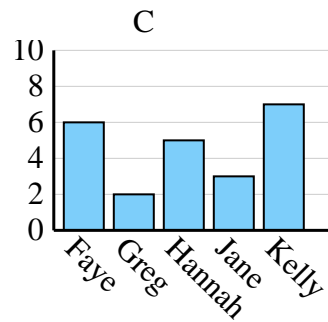
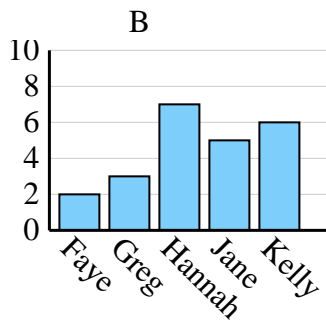
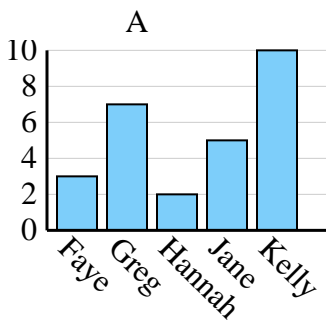
3. **A**

4. **B**

<b>Sales</b>	Jan	Feb	Mar	Apr	May
<b>Month</b>	2,000	2,500	4,500	4,000	500



<b>Name</b>	Faye	Greg	Hannah	Jane	Kelly
<b>States Lived In</b>	3	7	2	5	10



<b>Name</b>	Adam	Bill	Cody	Dan	Ed
<b>Points</b>	25	45	15	35	30

