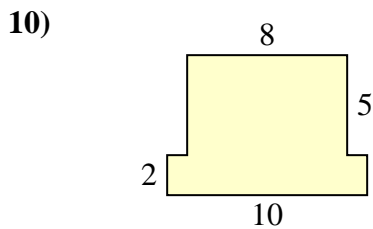
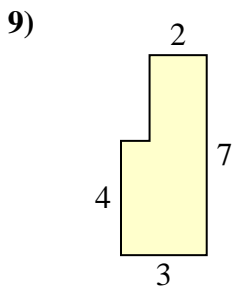
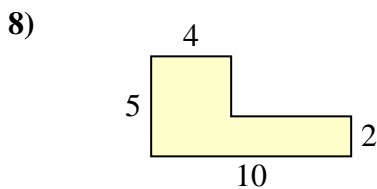
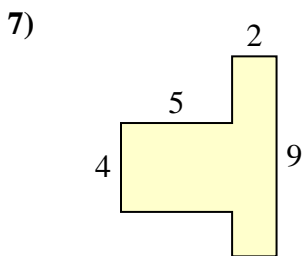
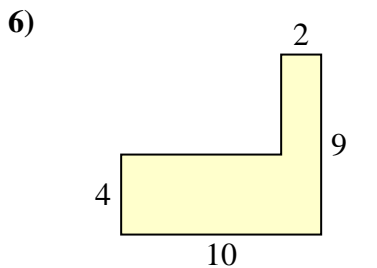
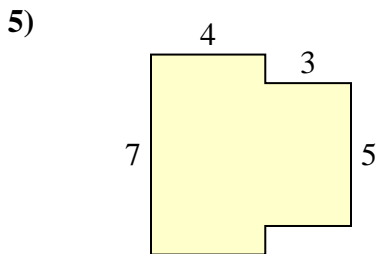
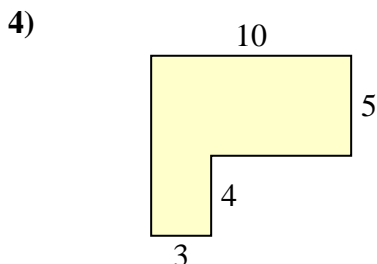
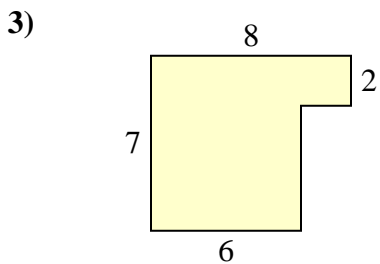
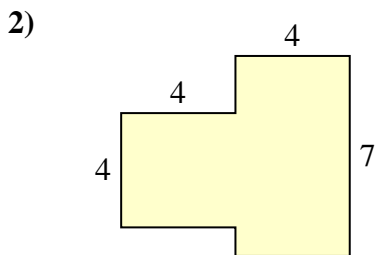
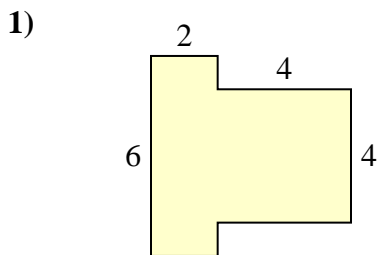




Find the total area of each shape. Measurement is in millimeters (mm). Not to scale.

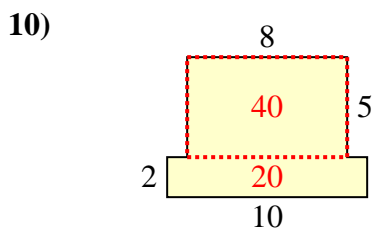
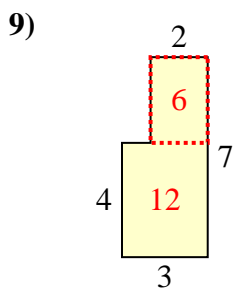
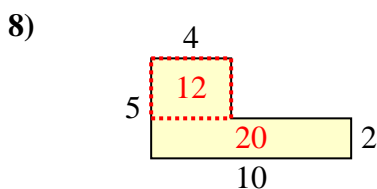
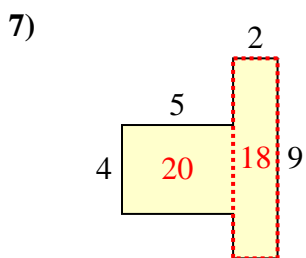
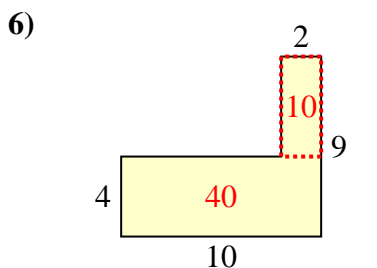
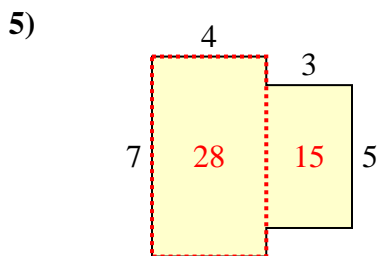
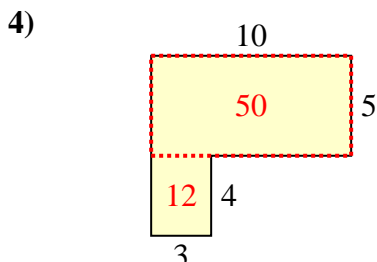
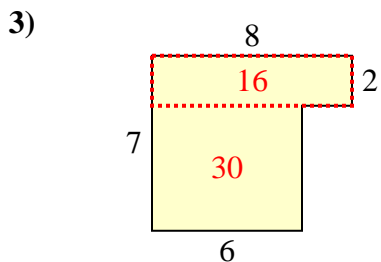
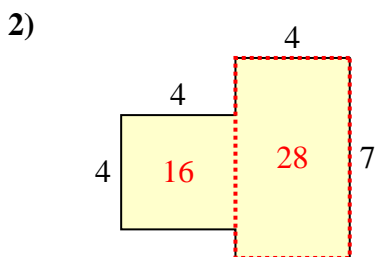
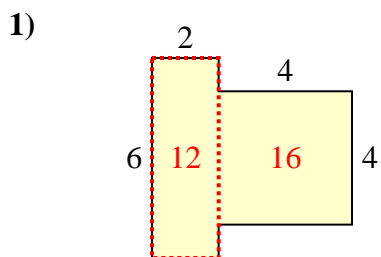
Answers



- 1. \_\_\_\_\_
- 2. \_\_\_\_\_
- 3. \_\_\_\_\_
- 4. \_\_\_\_\_
- 5. \_\_\_\_\_
- 6. \_\_\_\_\_
- 7. \_\_\_\_\_
- 8. \_\_\_\_\_
- 9. \_\_\_\_\_
- 10. \_\_\_\_\_



Find the total area of each shape. Measurement is in millimeters (mm). Not to scale.



Answers

1. 28 mm<sup>2</sup>
2. 44 mm<sup>2</sup>
3. 46 mm<sup>2</sup>
4. 62 mm<sup>2</sup>
5. 43 mm<sup>2</sup>
6. 50 mm<sup>2</sup>
7. 38 mm<sup>2</sup>
8. 32 mm<sup>2</sup>
9. 18 mm<sup>2</sup>
10. 60 mm<sup>2</sup>