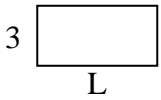




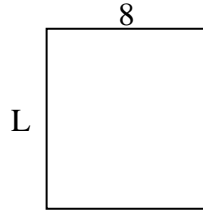
Determine the value of 'L'. Lengths are in cm (not to scale).

Answers

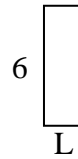
1) perimeter = 18



2) perimeter = 34



3) perimeter = 16



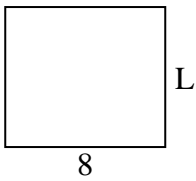
1. _____

2. _____

3. _____

4. _____

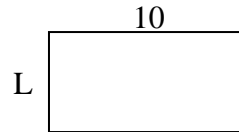
4) perimeter = 30



5) perimeter = 10



6) perimeter = 30



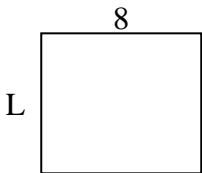
5. _____

6. _____

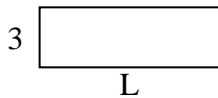
7. _____

8. _____

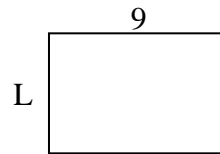
7) perimeter = 30



8) perimeter = 24



9) perimeter = 30

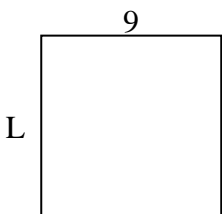


9. _____

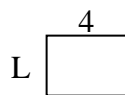
10. _____

11. _____

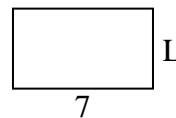
10) perimeter = 36



11) perimeter = 14



12) perimeter = 22



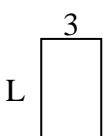
12. _____

13. _____


14. _____

15. _____

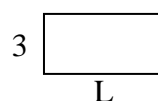
13) perimeter = 16



14) perimeter = 24



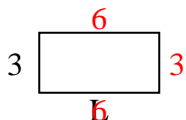
15) perimeter = 18



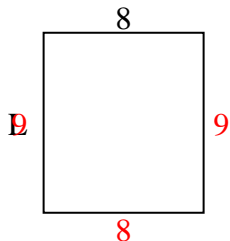


Determine the value of 'L'. Lengths are in cm (not to scale).

1) perimeter = 18



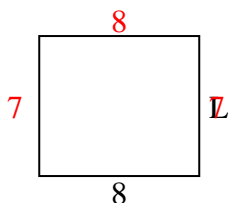
2) perimeter = 34



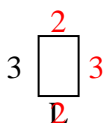
3) perimeter = 16



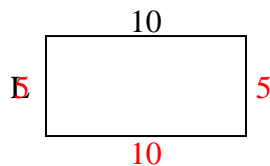
4) perimeter = 30



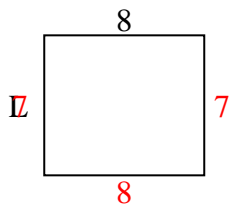
5) perimeter = 10



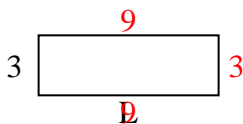
6) perimeter = 30



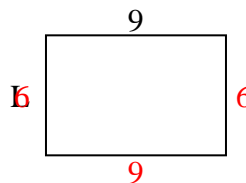
7) perimeter = 30



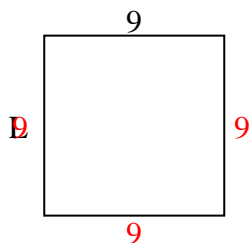
8) perimeter = 24



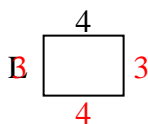
9) perimeter = 30



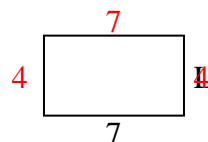
10) perimeter = 36



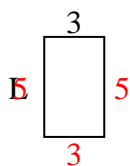
11) perimeter = 14



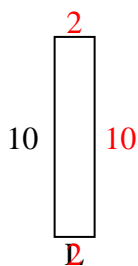
12) perimeter = 22



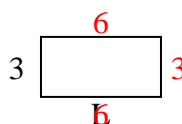
13) perimeter = 16



14) perimeter = 24



15) perimeter = 18



Answers

1. 6 cm

2. 9 cm

3. 2 cm

4. 7 cm

5. 2 cm

6. 5 cm

7. 7 cm

8. 9 cm

9. 6 cm

10. 9 cm

11. 3 cm

12. 4 cm

13. 5 cm

14. 2 cm

15. 6 cm