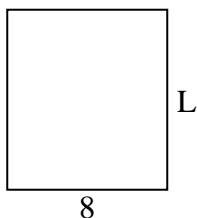




Determine the value of 'L'.

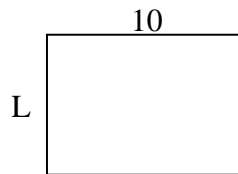
1) Area = $72u^2$



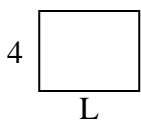
2) Area = $10u^2$



3) Area = $70u^2$



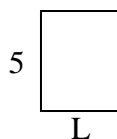
4) Area = $20u^2$



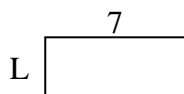
5) Area = $14u^2$



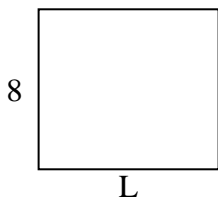
6) Area = $20u^2$



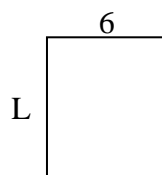
7) Area = $21u^2$



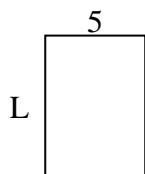
8) Area = $72u^2$



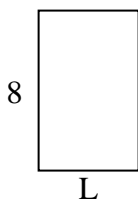
9) Area = $42u^2$



10) Area = $35u^2$




11) Area = $40u^2$



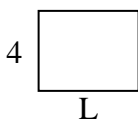
12) Area = $45u^2$



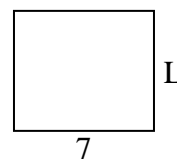
13) Area = $54u^2$



14) Area = $20u^2$



15) Area = $42u^2$



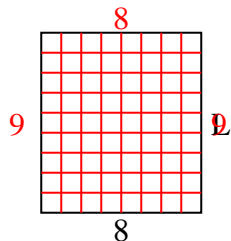
Answers

1. _____
2. _____
3. _____
4. _____
5. _____
6. _____
7. _____
8. _____
9. _____
10. _____
11. _____
12. _____
13. _____
14. _____
15. _____

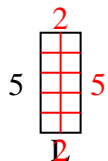


Determine the value of 'L'.

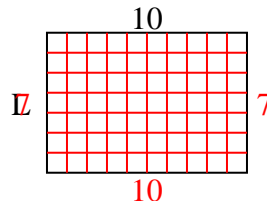
1) Area = $72u^2$



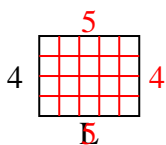
2) Area = $10u^2$



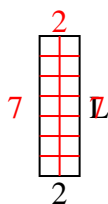
3) Area = $70u^2$



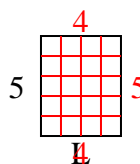
4) Area = $20u^2$



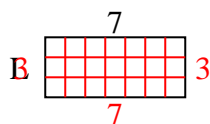
5) Area = $14u^2$



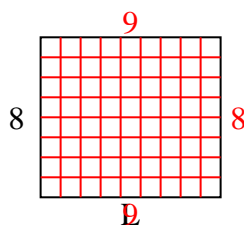
6) Area = $20u^2$



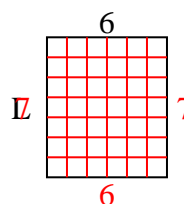
7) Area = $21u^2$



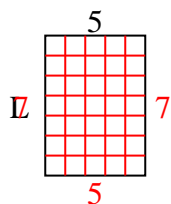
8) Area = $72u^2$



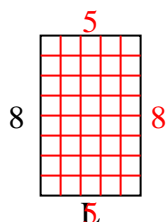
9) Area = $42u^2$



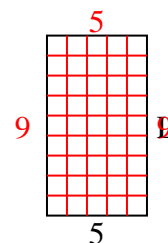
10) Area = $35u^2$



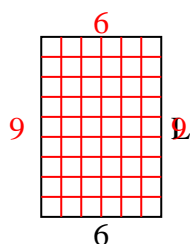
11) Area = $40u^2$



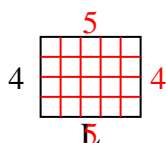
12) Area = $45u^2$



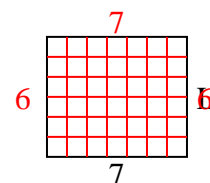
13) Area = $54u^2$



14) Area = $20u^2$



15) Area = $42u^2$



Answers

1. 9

2. 2

3. 7

4. 5

5. 7

6. 4

7. 3

8. 9

9. 7

10. 7

11. 5

12. 9

13. 9

14. 5

15. 6