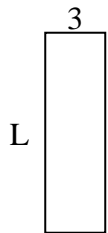




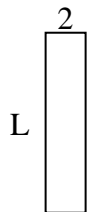
Determine the value of 'L'.

Answers

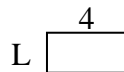
1) Area = $30u^2$



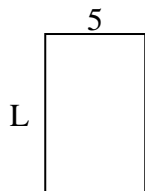
2) Area = $18u^2$



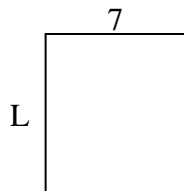
3) Area = $8u^2$



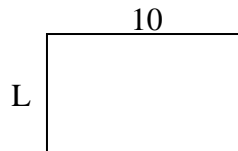
4) Area = $40u^2$



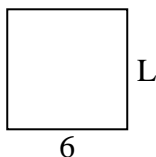
5) Area = $56u^2$



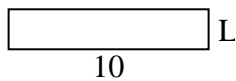
6) Area = $60u^2$



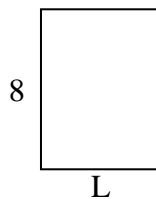
7) Area = $36u^2$



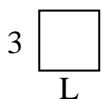
8) Area = $20u^2$



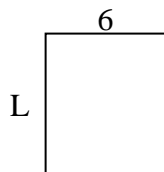
9) Area = $48u^2$



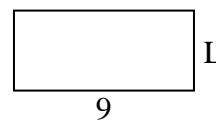
10) Area = $9u^2$



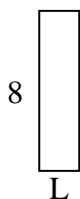
11) Area = $42u^2$



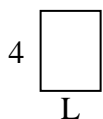
12) Area = $36u^2$



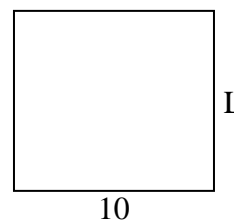
13) Area = $16u^2$



14) Area = $12u^2$



15) Area = $90u^2$

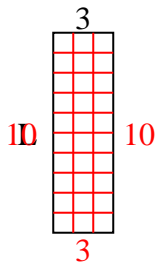


1. _____
2. _____
3. _____
4. _____
5. _____
6. _____
7. _____
8. _____
9. _____
10. _____
11. _____
12. _____
13. _____
14. _____
15. _____

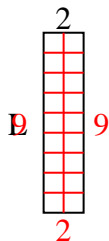


Determine the value of 'L'.

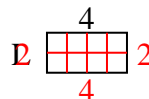
1) Area = $30u^2$



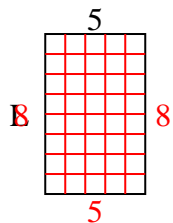
2) Area = $18u^2$



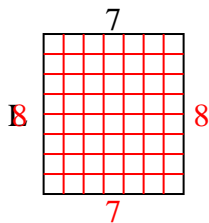
3) Area = $8u^2$



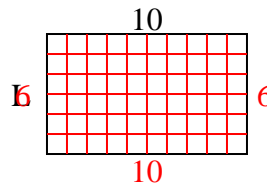
4) Area = $40u^2$



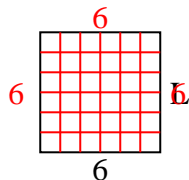
5) Area = $56u^2$



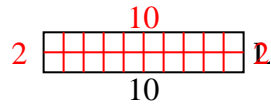
6) Area = $60u^2$



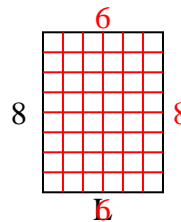
7) Area = $36u^2$



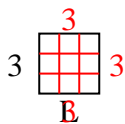
8) Area = $20u^2$



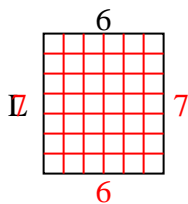
9) Area = $48u^2$



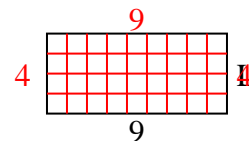
10) Area = $9u^2$



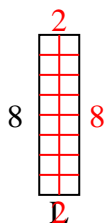
11) Area = $42u^2$



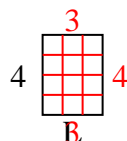
12) Area = $36u^2$



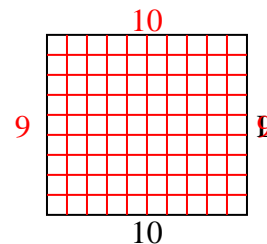
13) Area = $16u^2$



14) Area = $12u^2$



15) Area = $90u^2$



Answers

1. 10

2. 9

3. 2

4. 8

5. 8

6. 6

7. 6

8. 2

9. 6

10. 3

11. 7

12. 4

13. 2

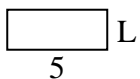
14. 3

15. 9

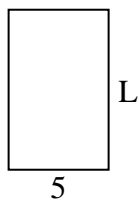


Determine the value of 'L'.

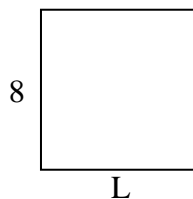
1) Area = $10u^2$



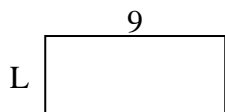
2) Area = $40u^2$



3) Area = $64u^2$



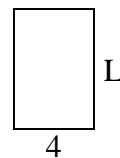
4) Area = $36u^2$



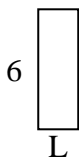
5) Area = $12u^2$




6) Area = $24u^2$



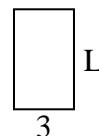
7) Area = $12u^2$



8) Area = $20u^2$



9) Area = $15u^2$



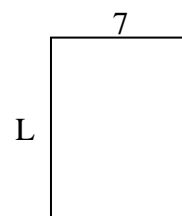
10) Area = $8u^2$



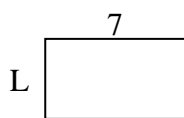
11) Area = $10u^2$



12) Area = $63u^2$



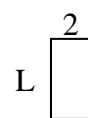
13) Area = $28u^2$



14) Area = $12u^2$



15) Area = $8u^2$



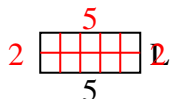
Answers

1. _____
2. _____
3. _____
4. _____
5. _____
6. _____
7. _____
8. _____
9. _____
10. _____
11. _____
12. _____
13. _____
14. _____
15. _____

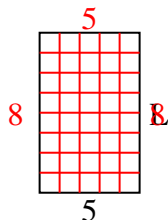


Determine the value of 'L'.

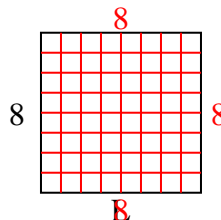
1) Area = $10u^2$



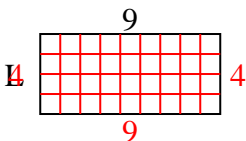
2) Area = $40u^2$



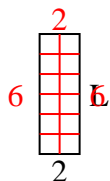
3) Area = $64u^2$



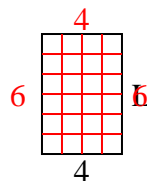
4) Area = $36u^2$



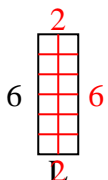
5) Area = $12u^2$



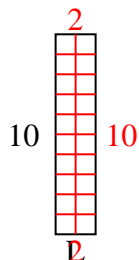
6) Area = $24u^2$



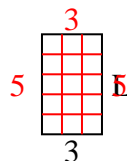
7) Area = $12u^2$



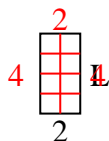
8) Area = $20u^2$



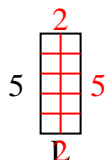
9) Area = $15u^2$



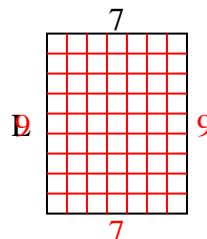
10) Area = $8u^2$



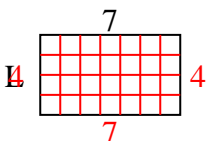
11) Area = $10u^2$



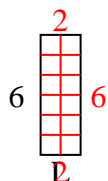
12) Area = $63u^2$



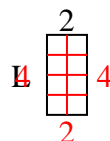
13) Area = $28u^2$



14) Area = $12u^2$



15) Area = $8u^2$



Answers

1. 2

2. 8

3. 8

4. 4

5. 6

6. 6

7. 2

8. 2

9. 5

10. 4

11. 2

12. 9

13. 4

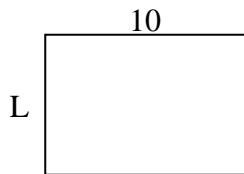
14. 2

15. 4

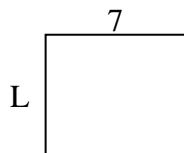


Determine the value of 'L'.

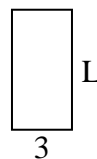
1) Area = $70u^2$



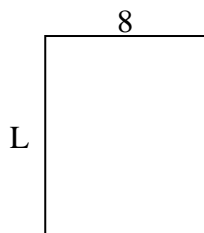
2) Area = $42u^2$



3) Area = $18u^2$



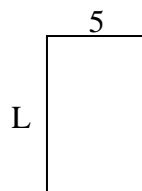
4) Area = $80u^2$



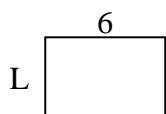
5) Area = $18u^2$




6) Area = $40u^2$



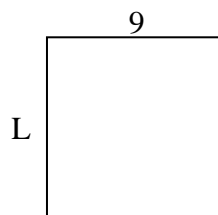
7) Area = $24u^2$



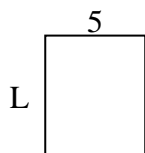
8) Area = $60u^2$



9) Area = $81u^2$



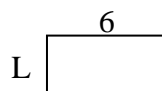
10) Area = $30u^2$



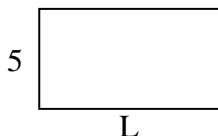
11) Area = $9u^2$



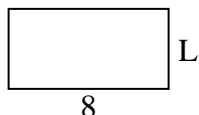
12) Area = $18u^2$



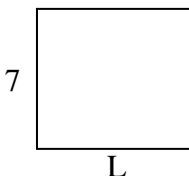
13) Area = $45u^2$



14) Area = $32u^2$



15) Area = $56u^2$



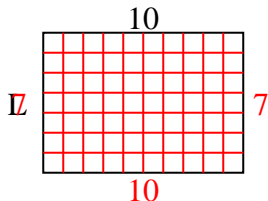
Answers

1. _____
2. _____
3. _____
4. _____
5. _____
6. _____
7. _____
8. _____
9. _____
10. _____
11. _____
12. _____
13. _____
14. _____
15. _____

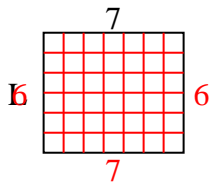


Determine the value of 'L'.

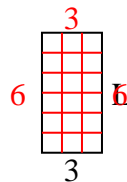
1) Area = $70u^2$



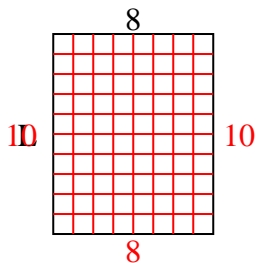
2) Area = $42u^2$



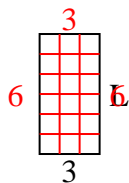
3) Area = $18u^2$



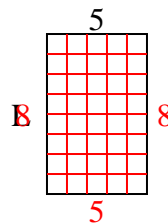
4) Area = $80u^2$



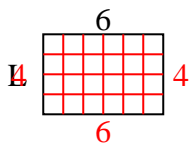
5) Area = $18u^2$



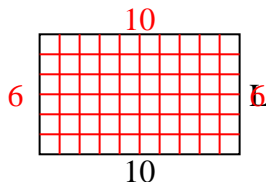
6) Area = $40u^2$



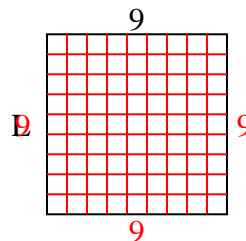
7) Area = $24u^2$



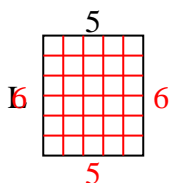
8) Area = $60u^2$



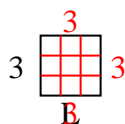
9) Area = $81u^2$



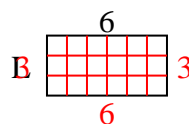
10) Area = $30u^2$



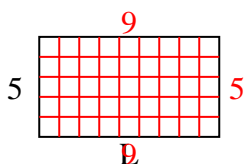
11) Area = $9u^2$



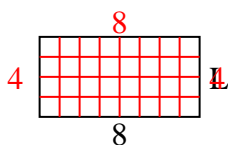
12) Area = $18u^2$



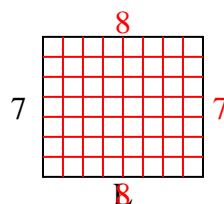
13) Area = $45u^2$



14) Area = $32u^2$



15) Area = $56u^2$



Answers

1. 7

2. 6

3. 6

4. 10

5. 6

6. 8

7. 4

8. 6

9. 9

10. 6

11. 3

12. 3

13. 9

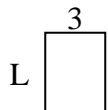
14. 4

15. 8

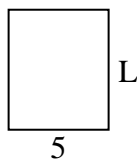


Determine the value of 'L'.

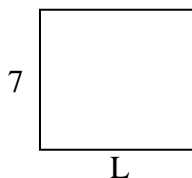
1) Area = $12u^2$



2) Area = $30u^2$



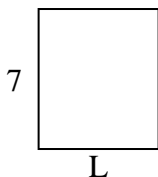
3) Area = $56u^2$



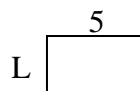
4) Area = $20u^2$



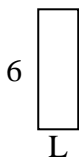
5) Area = $42u^2$




6) Area = $15u^2$




7) Area = $12u^2$



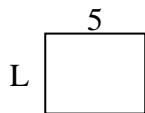
8) Area = $60u^2$



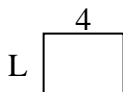
9) Area = $36u^2$




10) Area = $20u^2$




11) Area = $12u^2$



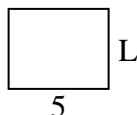
12) Area = $32u^2$



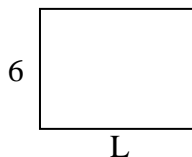
13) Area = $16u^2$



14) Area = $20u^2$



15) Area = $48u^2$



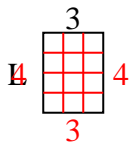
Answers

1. _____
2. _____
3. _____
4. _____
5. _____
6. _____
7. _____
8. _____
9. _____
10. _____
11. _____
12. _____
13. _____
14. _____
15. _____

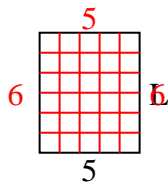


Determine the value of 'L'.

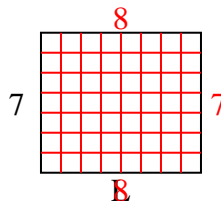
1) Area = $12u^2$



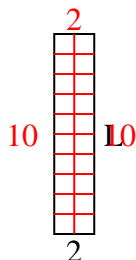
2) Area = $30u^2$



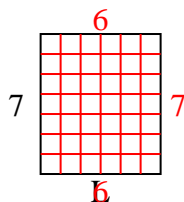
3) Area = $56u^2$



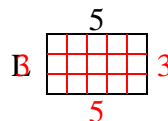
4) Area = $20u^2$



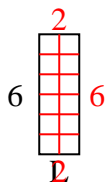
5) Area = $42u^2$



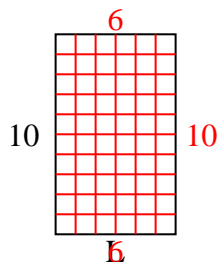
6) Area = $15u^2$



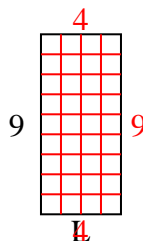
7) Area = $12u^2$



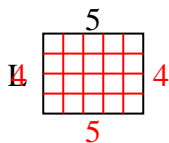
8) Area = $60u^2$



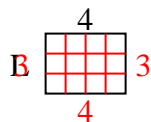
9) Area = $36u^2$



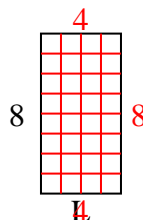
10) Area = $20u^2$



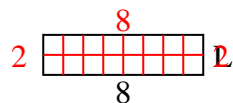
11) Area = $12u^2$



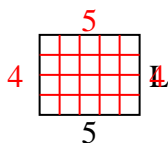
12) Area = $32u^2$



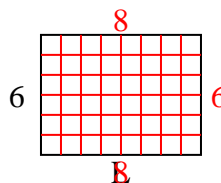
13) Area = $16u^2$



14) Area = $20u^2$



15) Area = $48u^2$



Answers

1. 4

2. 6

3. 8

4. 10

5. 6

6. 3

7. 2

8. 6

9. 4

10. 4

11. 3

12. 4

13. 2

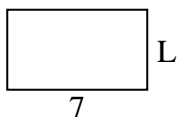
14. 4

15. 8

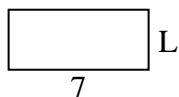


Determine the value of 'L'.

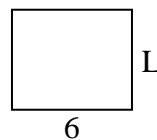
1) Area = $28u^2$



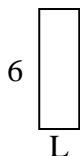
2) Area = $21u^2$



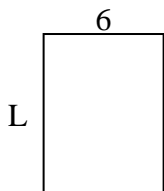
3) Area = $30u^2$



4) Area = $12u^2$



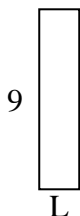
5) Area = $48u^2$



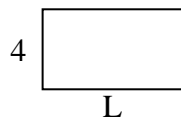
6) Area = $6u^2$



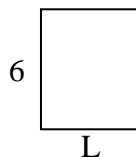
7) Area = $18u^2$



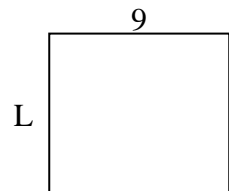
8) Area = $28u^2$



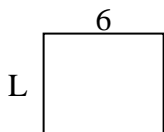
9) Area = $30u^2$



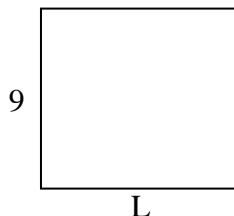
10) Area = $72u^2$



11) Area = $30u^2$



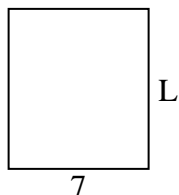
12) Area = $90u^2$



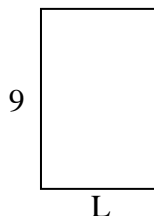
13) Area = $30u^2$



14) Area = $56u^2$



15) Area = $54u^2$



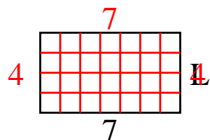
Answers

1. _____
2. _____
3. _____
4. _____
5. _____
6. _____
7. _____
8. _____
9. _____
10. _____
11. _____
12. _____
13. _____
14. _____
15. _____

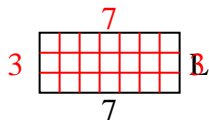


Determine the value of 'L'.

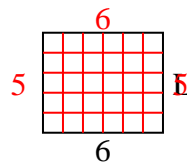
1) Area = $28u^2$



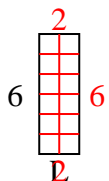
2) Area = $21u^2$



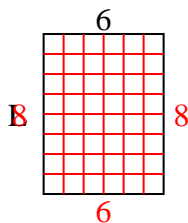
3) Area = $30u^2$



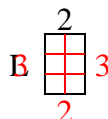
4) Area = $12u^2$



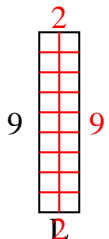
5) Area = $48u^2$



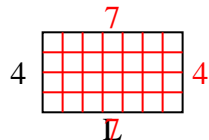
6) Area = $6u^2$



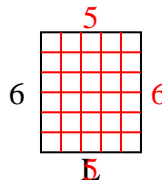
7) Area = $18u^2$



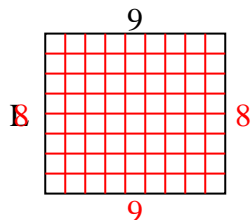
8) Area = $28u^2$



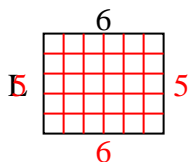
9) Area = $30u^2$



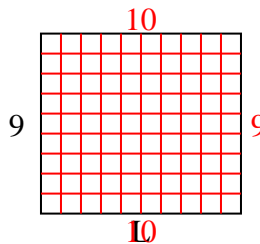
10) Area = $72u^2$



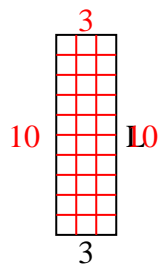
11) Area = $30u^2$



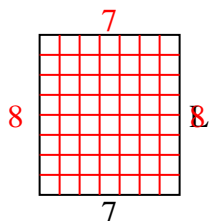
12) Area = $90u^2$



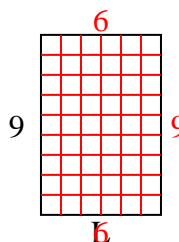
13) Area = $30u^2$



14) Area = $56u^2$



15) Area = $54u^2$



Answers

1. 4

2. 3

3. 5

4. 2

5. 8

6. 3

7. 2

8. 7

9. 5

10. 8

11. 5

12. 10

13. 10

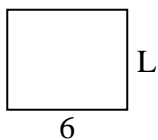
14. 8

15. 6

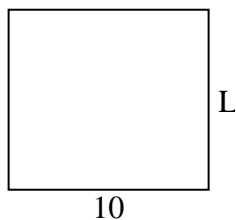


Determine the value of 'L'.

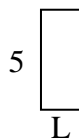
1) Area = $30u^2$



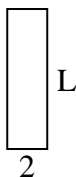
2) Area = $90u^2$



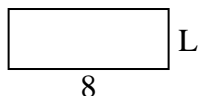
3) Area = $10u^2$



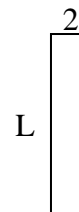
4) Area = $14u^2$



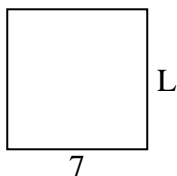
5) Area = $24u^2$



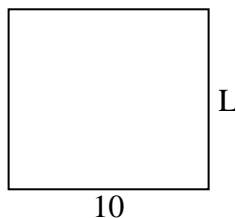
6) Area = $18u^2$



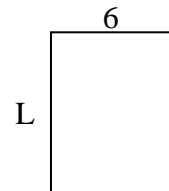
7) Area = $49u^2$



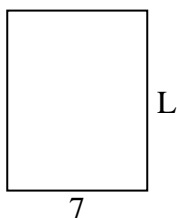
8) Area = $90u^2$



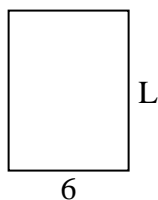
9) Area = $48u^2$



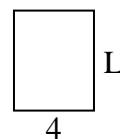
10) Area = $63u^2$



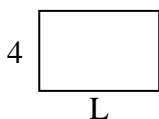
11) Area = $48u^2$



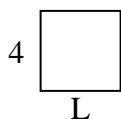
12) Area = $20u^2$



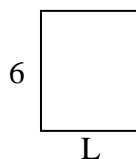
13) Area = $24u^2$



14) Area = $16u^2$



15) Area = $30u^2$



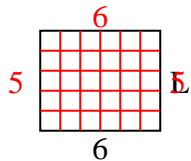
Answers

1. _____
2. _____
3. _____
4. _____
5. _____
6. _____
7. _____
8. _____
9. _____
10. _____
11. _____
12. _____
13. _____
14. _____
15. _____

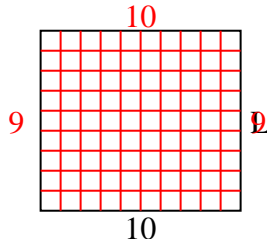


Determine the value of 'L'.

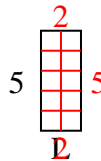
1) Area = $30u^2$



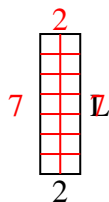
2) Area = $90u^2$



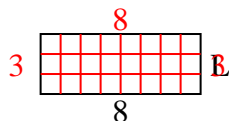
3) Area = $10u^2$



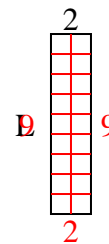
4) Area = $14u^2$



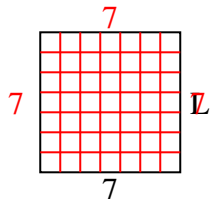
5) Area = $24u^2$



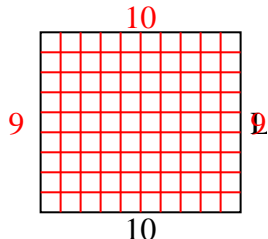
6) Area = $18u^2$



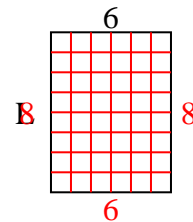
7) Area = $49u^2$



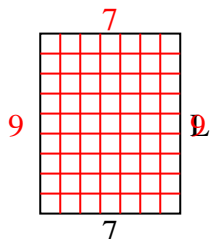
8) Area = $90u^2$



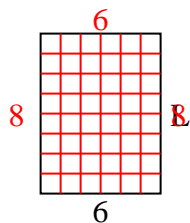
9) Area = $48u^2$



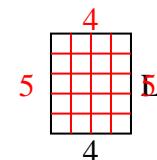
10) Area = $63u^2$



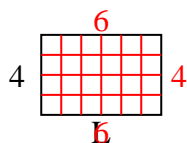
11) Area = $48u^2$



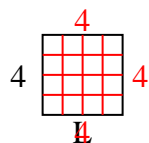
12) Area = $20u^2$



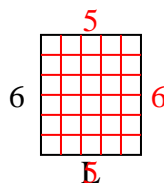
13) Area = $24u^2$



14) Area = $16u^2$



15) Area = $30u^2$



Answers

1. 5

2. 9

3. 2

4. 7

5. 3

6. 9

7. 7

8. 9

9. 8

10. 9

11. 8

12. 5

13. 6

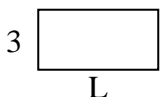
14. 4

15. 5

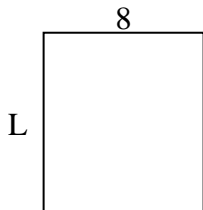


Determine the value of 'L'.

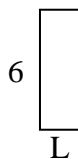
1) Area = $18u^2$



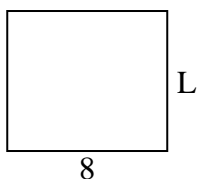
2) Area = $72u^2$



3) Area = $12u^2$



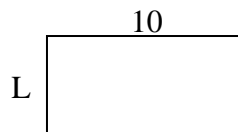
4) Area = $56u^2$



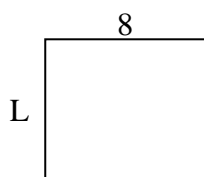
5) Area = $6u^2$



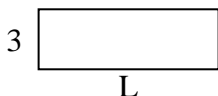
6) Area = $50u^2$



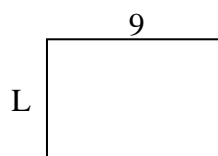
7) Area = $56u^2$



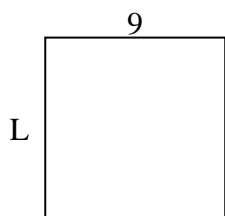
8) Area = $27u^2$



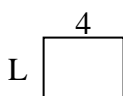
9) Area = $54u^2$



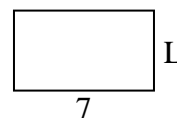
10) Area = $81u^2$



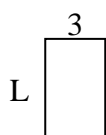
11) Area = $12u^2$




12) Area = $28u^2$



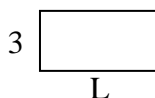
13) Area = $15u^2$



14) Area = $20u^2$



15) Area = $18u^2$



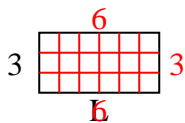
Answers

1. _____
2. _____
3. _____
4. _____
5. _____
6. _____
7. _____
8. _____
9. _____
10. _____
11. _____
12. _____
13. _____
14. _____
15. _____

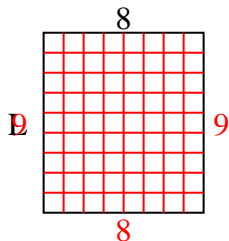


Determine the value of 'L'.

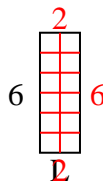
1) Area = $18u^2$



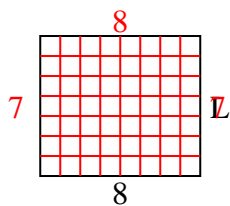
2) Area = $72u^2$



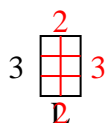
3) Area = $12u^2$



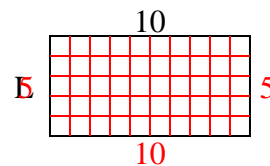
4) Area = $56u^2$



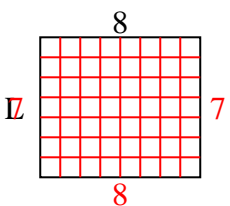
5) Area = $6u^2$



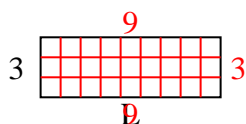
6) Area = $50u^2$



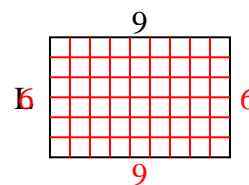
7) Area = $56u^2$



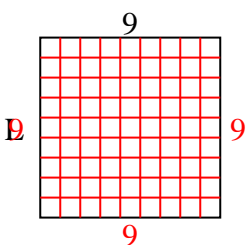
8) Area = $27u^2$



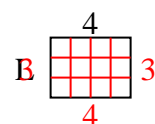
9) Area = $54u^2$



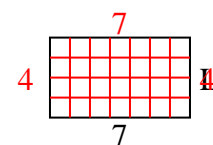
10) Area = $81u^2$



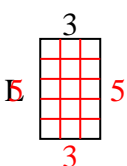
11) Area = $12u^2$



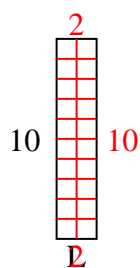
12) Area = $28u^2$



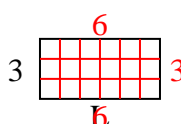
13) Area = $15u^2$



14) Area = $20u^2$



15) Area = $18u^2$



Answers

1. 6

2. 9

3. 2

4. 7

5. 2

6. 5

7. 7

8. 9

9. 6

10. 9

11. 3

12. 4

13. 5


14. 2

15. 6

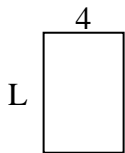


Determine the value of 'L'.

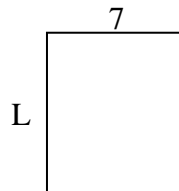
1) Area = $30u^2$



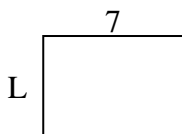
2) Area = $24u^2$



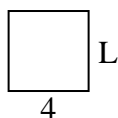
3) Area = $56u^2$



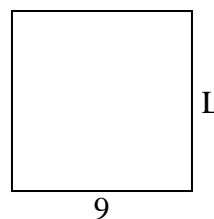
4) Area = $35u^2$



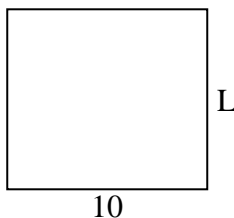
5) Area = $16u^2$



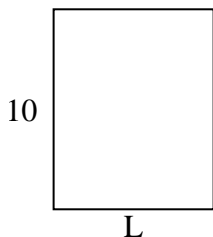
6) Area = $81u^2$



7) Area = $90u^2$




8) Area = $80u^2$



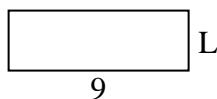
9) Area = $27u^2$



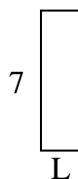
10) Area = $32u^2$



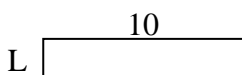
11) Area = $27u^2$



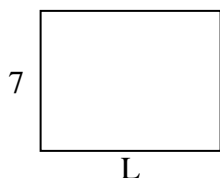
12) Area = $14u^2$



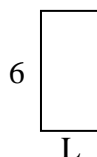
13) Area = $20u^2$



14) Area = $63u^2$



15) Area = $18u^2$



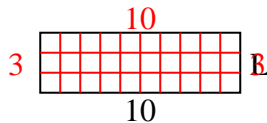
Answers

1. _____
2. _____
3. _____
4. _____
5. _____
6. _____
7. _____
8. _____
9. _____
10. _____
11. _____
12. _____
13. _____
14. _____
15. _____

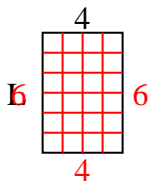


Determine the value of 'L'.

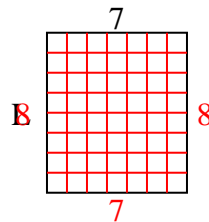
1) Area = $30u^2$



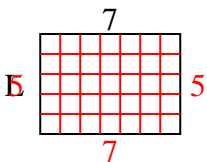
2) Area = $24u^2$



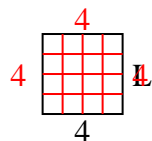
3) Area = $56u^2$



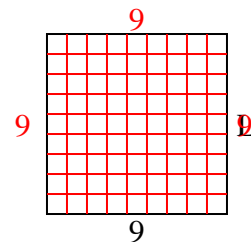
4) Area = $35u^2$



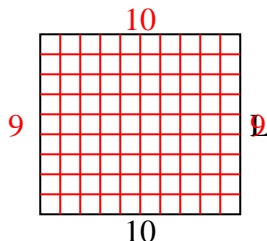
5) Area = $16u^2$



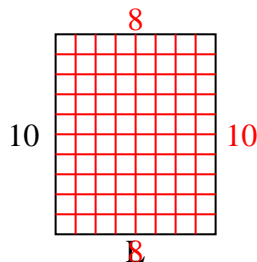
6) Area = $81u^2$



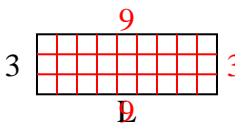
7) Area = $90u^2$



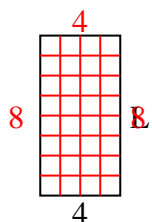
8) Area = $80u^2$



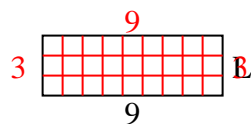
9) Area = $27u^2$



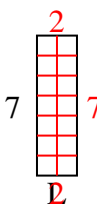
10) Area = $32u^2$



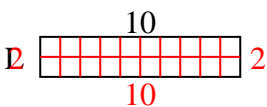
11) Area = $27u^2$



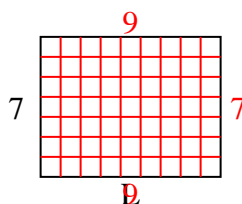
12) Area = $14u^2$



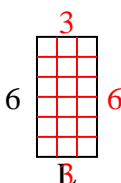
13) Area = $20u^2$



14) Area = $63u^2$



15) Area = $18u^2$



Answers

1. 3

2. 6

3. 8

4. 5

5. 4

6. 9

7. 9

8. 8

9. 9

10. 8

11. 3

12. 2

13. 2

14. 9

15. 3

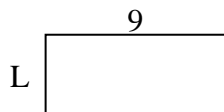


Determine the value of 'L'.

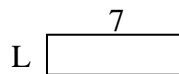
1) Area = $8u^2$



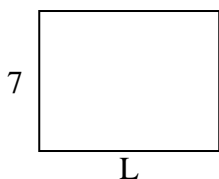
2) Area = $36u^2$



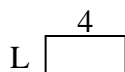
3) Area = $14u^2$



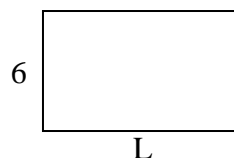
4) Area = $63u^2$



5) Area = $8u^2$




6) Area = $60u^2$



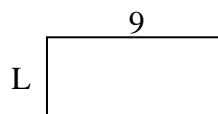
7) Area = $45u^2$



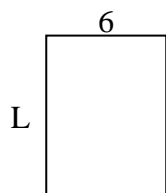
8) Area = $20u^2$



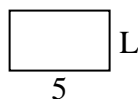
9) Area = $36u^2$



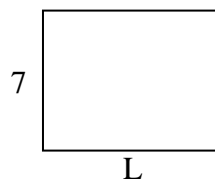
10) Area = $48u^2$



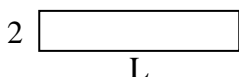
11) Area = $15u^2$



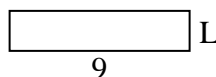
12) Area = $63u^2$



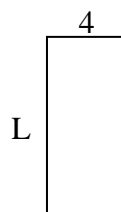
13) Area = $20u^2$



14) Area = $18u^2$



15) Area = $36u^2$



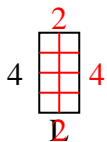
Answers

1. _____
2. _____
3. _____
4. _____
5. _____
6. _____
7. _____
8. _____
9. _____
10. _____
11. _____
12. _____
13. _____
14. _____
15. _____

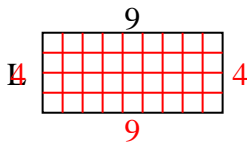


Determine the value of 'L'.

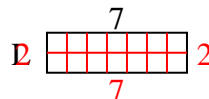
1) Area = $8u^2$



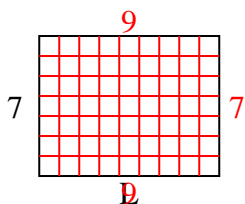
2) Area = $36u^2$



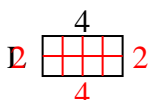
3) Area = $14u^2$



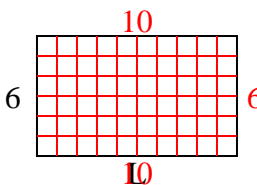
4) Area = $63u^2$



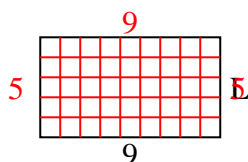
5) Area = $8u^2$



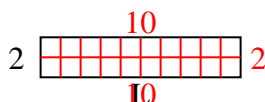
6) Area = $60u^2$



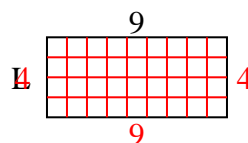
7) Area = $45u^2$



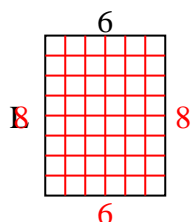
8) Area = $20u^2$



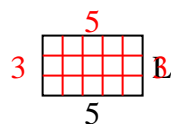
9) Area = $36u^2$



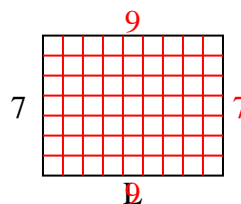
10) Area = $48u^2$



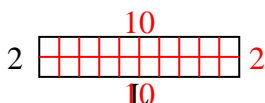
11) Area = $15u^2$



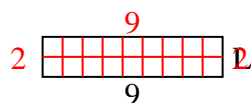
12) Area = $63u^2$



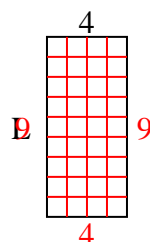
13) Area = $20u^2$



14) Area = $18u^2$



15) Area = $36u^2$



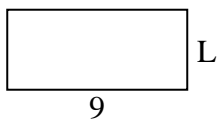
Answers

1. 2
2. 4
3. 2
4. 9
5. 2
6. 10
7. 5
8. 10
9. 4
10. 8
11. 3
12. 9
13. 10
14. 2
15. 9

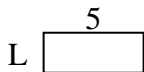


Determine the value of 'L'.

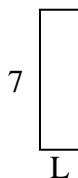
1) Area = $36u^2$



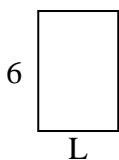
2) Area = $10u^2$



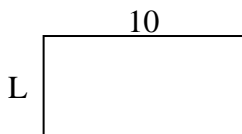
3) Area = $14u^2$



4) Area = $24u^2$



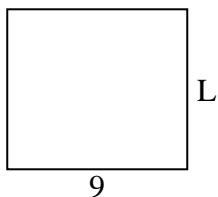
5) Area = $50u^2$




6) Area = $6u^2$




7) Area = $72u^2$



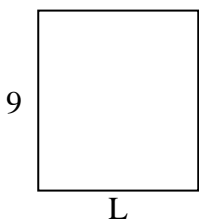
8) Area = $27u^2$



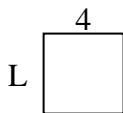
9) Area = $70u^2$



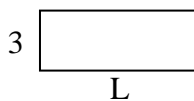
10) Area = $72u^2$




11) Area = $16u^2$



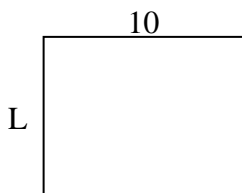
12) Area = $24u^2$



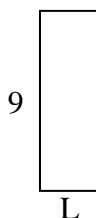
13) Area = $14u^2$



14) Area = $80u^2$



15) Area = $27u^2$



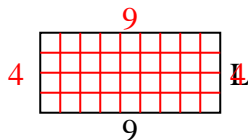
Answers

1. _____
2. _____
3. _____
4. _____
5. _____
6. _____
7. _____
8. _____
9. _____
10. _____
11. _____
12. _____
13. _____
14. _____
15. _____

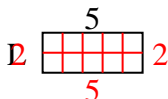


Determine the value of 'L'.

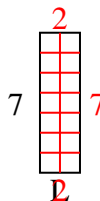
1) Area = $36u^2$



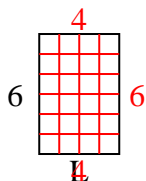
2) Area = $10u^2$



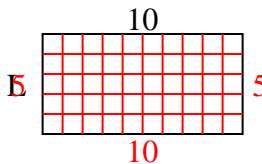
3) Area = $14u^2$



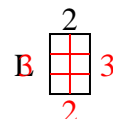
4) Area = $24u^2$



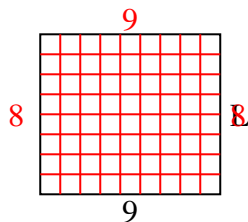
5) Area = $50u^2$



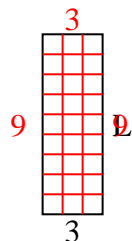
6) Area = $6u^2$



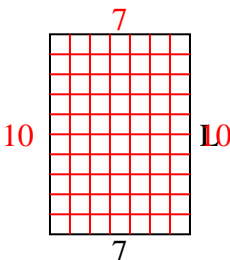
7) Area = $72u^2$



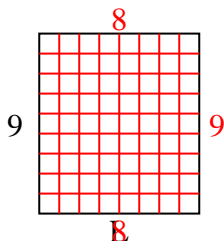
8) Area = $27u^2$



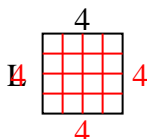
9) Area = $70u^2$



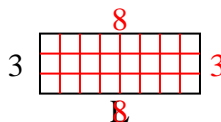
10) Area = $72u^2$



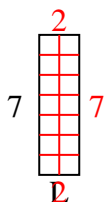
11) Area = $16u^2$



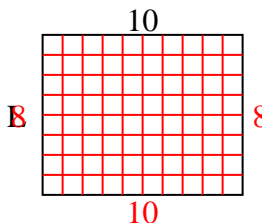
12) Area = $24u^2$



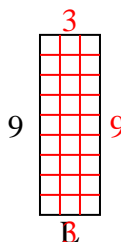
13) Area = $14u^2$



14) Area = $80u^2$



15) Area = $27u^2$



Answers

1. 4

2. 2

3. 2

4. 4

5. 5

6. 3

7. 8

8. 9

9. 10

10. 8

11. 4

12. 8

13. 2

14. 8

15. 3