




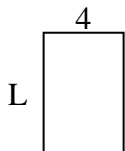
Determine the value of 'L'.

Answers

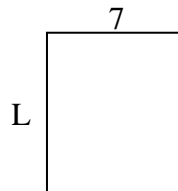
1) Area = $30u^2$



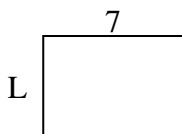
2) Area = $24u^2$



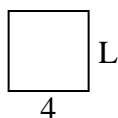
3) Area = $56u^2$



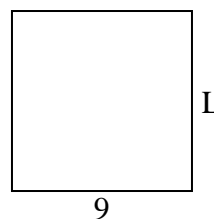
4) Area = $35u^2$



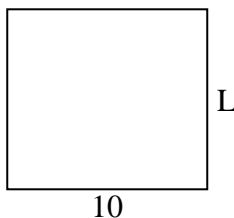
5) Area = $16u^2$



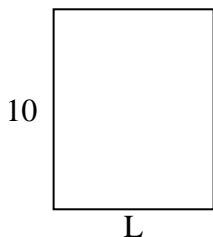
6) Area = $81u^2$



7) Area = $90u^2$




8) Area = $80u^2$



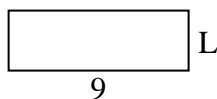
9) Area = $27u^2$



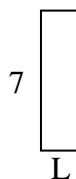
10) Area = $32u^2$



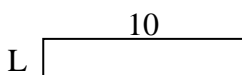
11) Area = $27u^2$



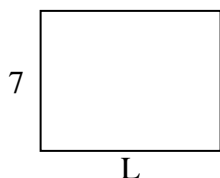
12) Area = $14u^2$




13) Area = $20u^2$



14) Area = $63u^2$



15) Area = $18u^2$

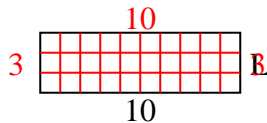


1. _____
2. _____
3. _____
4. _____
5. _____
6. _____
7. _____
8. _____
9. _____
10. _____
11. _____
12. _____
13. _____
14. _____
15. _____

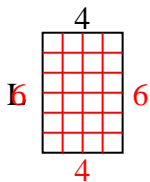


Determine the value of 'L'.

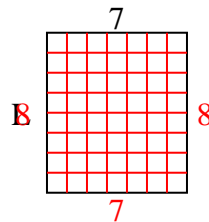
1) Area = $30u^2$



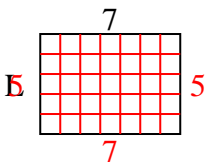
2) Area = $24u^2$



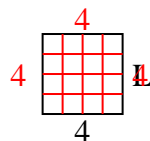
3) Area = $56u^2$



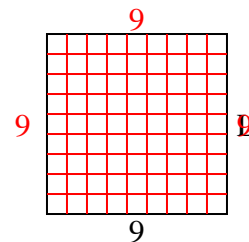
4) Area = $35u^2$



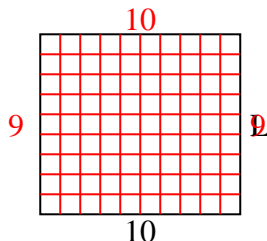
5) Area = $16u^2$



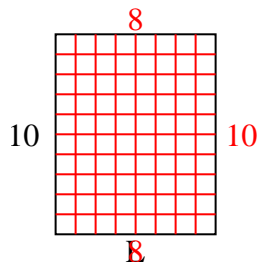
6) Area = $81u^2$



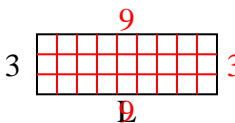
7) Area = $90u^2$



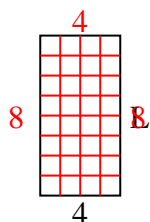
8) Area = $80u^2$



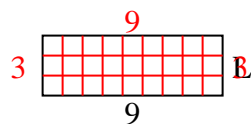
9) Area = $27u^2$



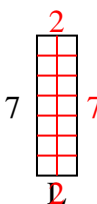
10) Area = $32u^2$



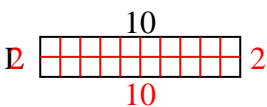
11) Area = $27u^2$



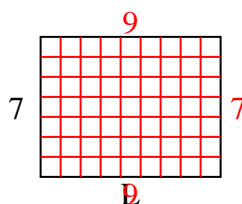
12) Area = $14u^2$



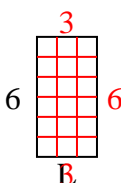
13) Area = $20u^2$



14) Area = $63u^2$



15) Area = $18u^2$



Answers

1. 3

2. 6

3. 8

4. 5

5. 4

6. 9

7. 9

8. 8

9. 9

10. 8

11. 3

12. 2

13. 2

14. 9

15. 3