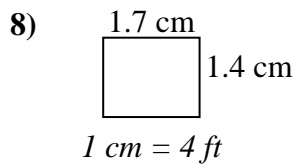
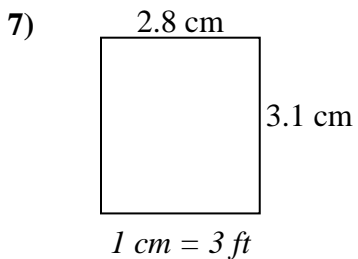
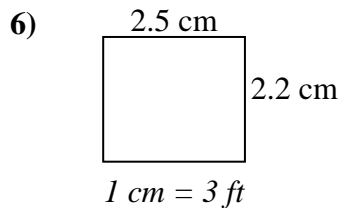
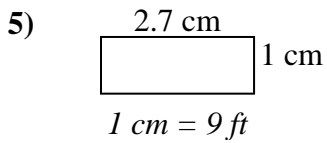
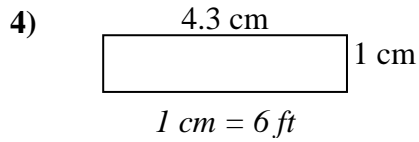
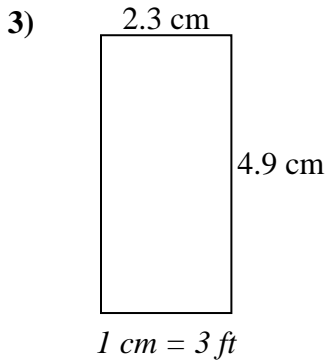
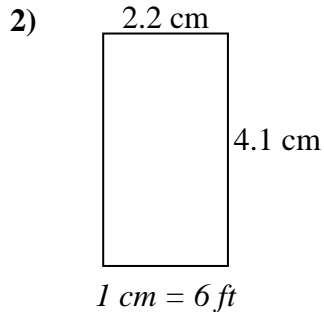
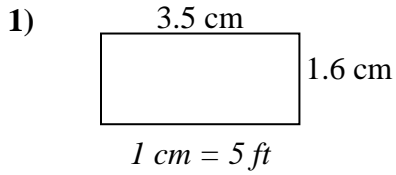




Determine the actual width, height and area of each scale rectangle.

Round the area to the nearest whole number.



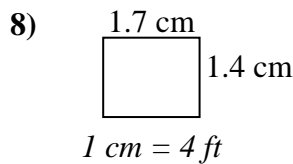
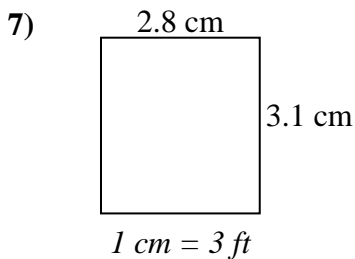
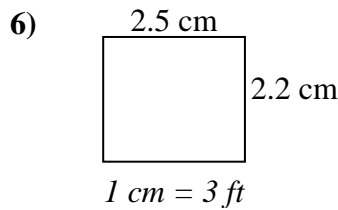
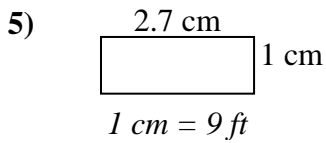
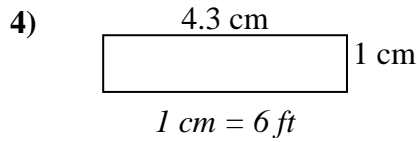
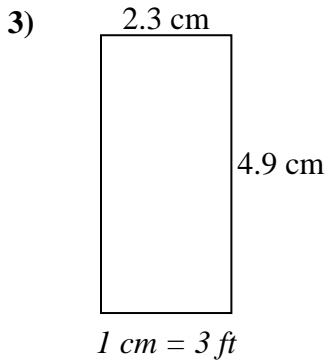
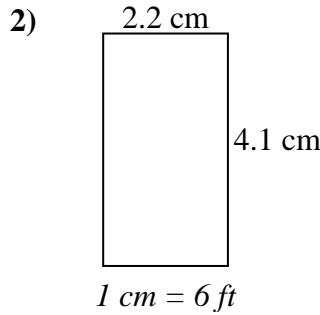
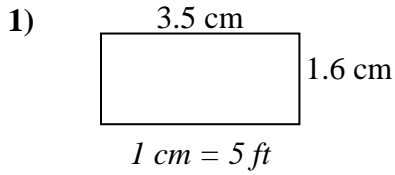
Answers

1. _____
2. _____
3. _____
4. _____
5. _____
6. _____
7. _____
8. _____



Determine the actual width, height and area of each scale rectangle.

Round the area to the nearest whole number.



Answers

- | | | | |
|----|-------------|-------------|------------|
| 1. | <u>17.5</u> | <u>8</u> | <u>140</u> |
| 2. | <u>13.2</u> | <u>24.6</u> | <u>325</u> |
| 3. | <u>6.9</u> | <u>14.7</u> | <u>101</u> |
| 4. | <u>25.8</u> | <u>6</u> | <u>155</u> |
| 5. | <u>24.3</u> | <u>9</u> | <u>219</u> |
| 6. | <u>7.5</u> | <u>6.6</u> | <u>50</u> |
| 7. | <u>8.4</u> | <u>9.3</u> | <u>78</u> |
| 8. | <u>6.8</u> | <u>5.6</u> | <u>38</u> |