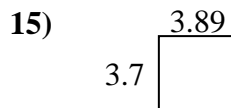
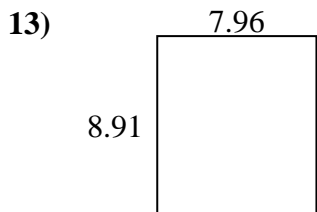
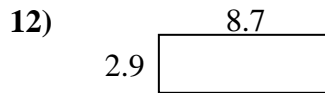
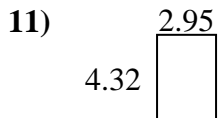
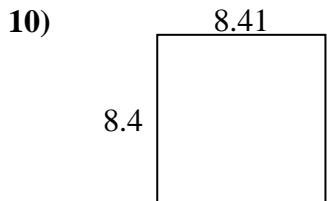
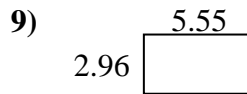
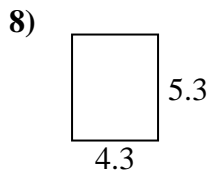

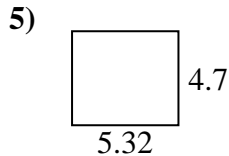
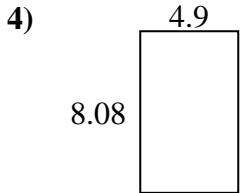
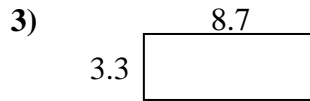
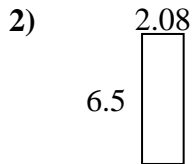
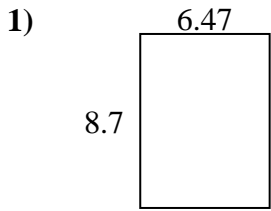




Find the perimeter and area of each figure. Answer to the nearest 10th.

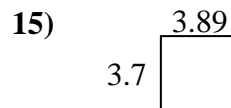
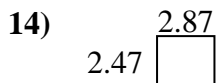
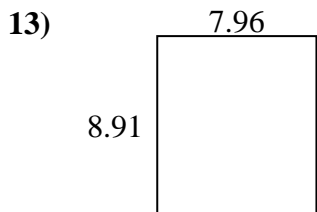
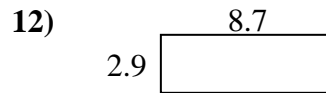
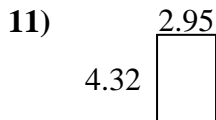
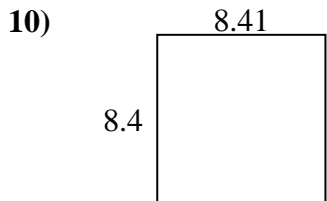
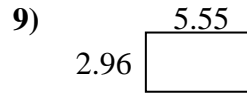
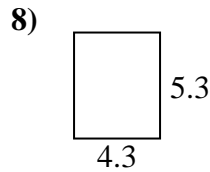
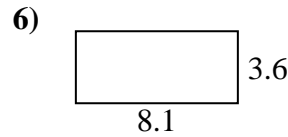
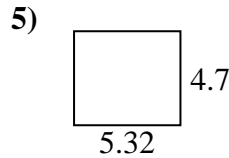
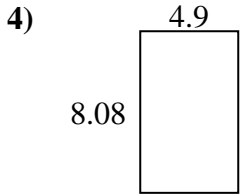
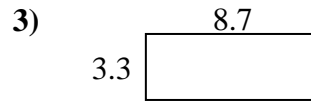
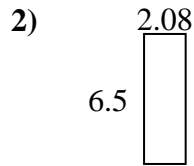
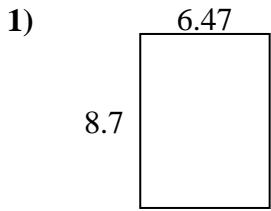
Answers



1. \_\_\_\_\_
2. \_\_\_\_\_
3. \_\_\_\_\_
4. \_\_\_\_\_
5. \_\_\_\_\_
6. \_\_\_\_\_
7. \_\_\_\_\_
8. \_\_\_\_\_
9. \_\_\_\_\_
10. \_\_\_\_\_
11. \_\_\_\_\_
12. \_\_\_\_\_
13. \_\_\_\_\_
14. \_\_\_\_\_
15. \_\_\_\_\_



Find the perimeter and area of each figure. Answer to the nearest 10th.



Answers

1.	<u>56.3</u>	<u>30.3</u>
2.	<u>13.5</u>	<u>17.2</u>
3.	<u>28.7</u>	<u>24.0</u>
4.	<u>39.6</u>	<u>26.0</u>
5.	<u>25.0</u>	<u>20.0</u>
6.	<u>29.2</u>	<u>23.4</u>
7.	<u>45.9</u>	<u>28.5</u>
8.	<u>22.8</u>	<u>19.2</u>
9.	<u>16.4</u>	<u>17.0</u>
10.	<u>70.6</u>	<u>33.6</u>
11.	<u>12.7</u>	<u>14.5</u>
12.	<u>25.2</u>	<u>23.2</u>
13.	<u>70.9</u>	<u>33.7</u>
14.	<u>7.1</u>	<u>10.7</u>
15.	<u>14.4</u>	<u>15.2</u>