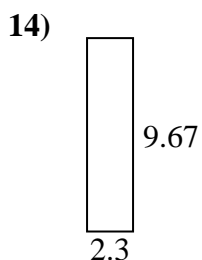
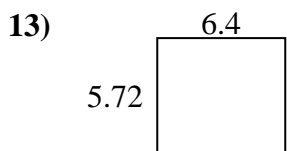
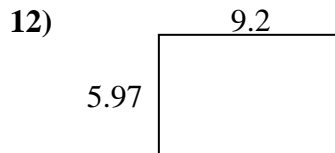
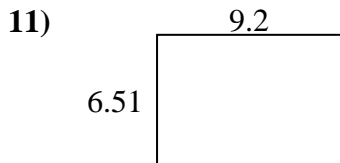
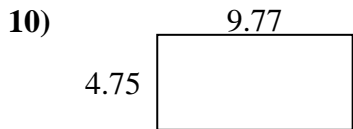
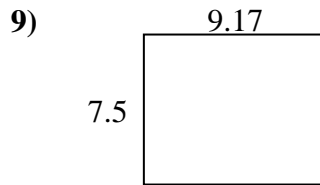
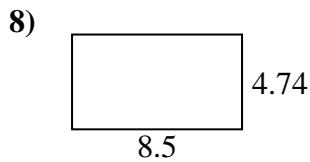
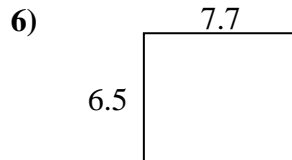
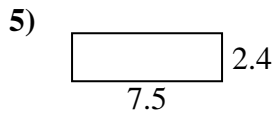
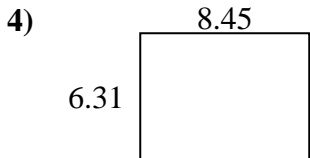
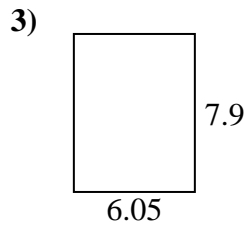
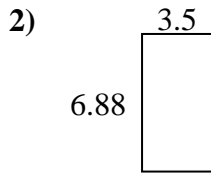
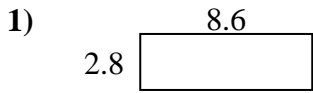




Find the perimeter and area of each figure. Answer to the nearest 10th.

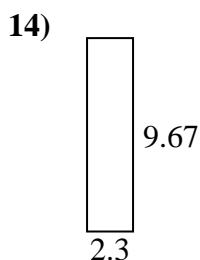
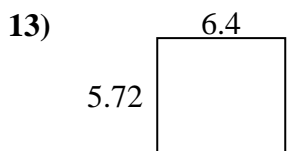
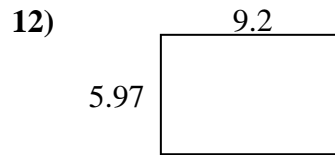
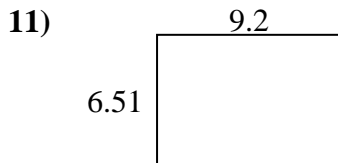
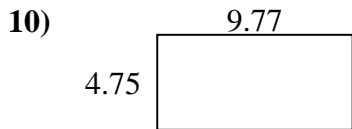
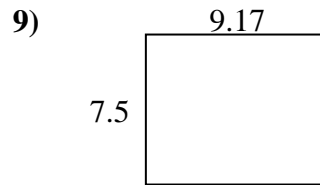
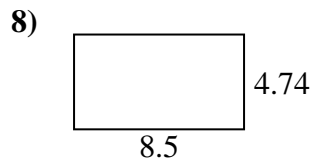
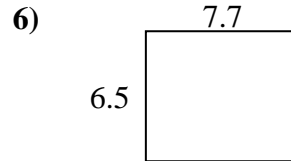
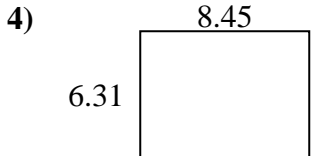
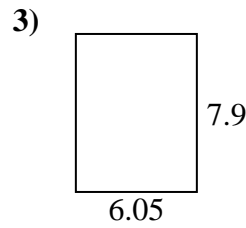
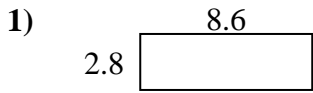
Answers



1. \_\_\_\_\_
2. \_\_\_\_\_
3. \_\_\_\_\_
4. \_\_\_\_\_
5. \_\_\_\_\_
6. \_\_\_\_\_
7. \_\_\_\_\_
8. \_\_\_\_\_
9. \_\_\_\_\_
10. \_\_\_\_\_
11. \_\_\_\_\_
12. \_\_\_\_\_
13. \_\_\_\_\_
14. \_\_\_\_\_
15. \_\_\_\_\_



Find the perimeter and area of each figure. Answer to the nearest 10th.



Answers

1.	<u>24.1</u>	<u>22.8</u>
2.	<u>24.1</u>	<u>20.8</u>
3.	<u>47.8</u>	<u>27.9</u>
4.	<u>53.3</u>	<u>29.5</u>
5.	<u>18.0</u>	<u>19.8</u>
6.	<u>50.1</u>	<u>28.4</u>
7.	<u>26.0</u>	<u>24.2</u>
8.	<u>40.3</u>	<u>26.5</u>
9.	<u>68.8</u>	<u>33.3</u>
10.	<u>46.4</u>	<u>29.0</u>
11.	<u>59.9</u>	<u>31.4</u>
12.	<u>54.9</u>	<u>30.3</u>
13.	<u>36.6</u>	<u>24.2</u>
14.	<u>22.2</u>	<u>23.9</u>
15.	<u>13.8</u>	<u>15.8</u>