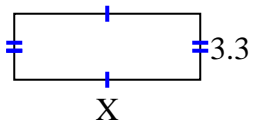


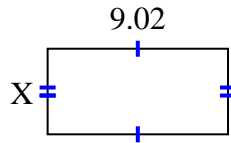


Find the value of X for each figure. Each figure is in centimeters (cm). Not to scale.

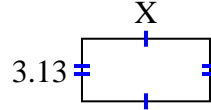
1) area =  $30.69 \text{ cm}^2$



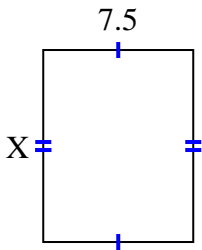
2) area =  $38.6056 \text{ cm}^2$



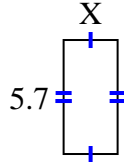
3) area =  $20.032 \text{ cm}^2$



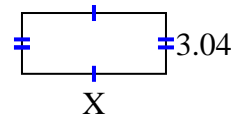
4) area =  $72 \text{ cm}^2$



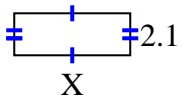
5) area =  $15.39 \text{ cm}^2$



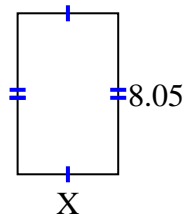
6) area =  $21.888 \text{ cm}^2$



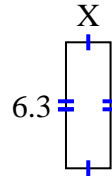
7) area =  $12.18 \text{ cm}^2$



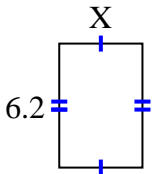
8) area =  $40.4915 \text{ cm}^2$



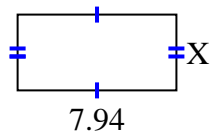
9) area =  $14.049 \text{ cm}^2$



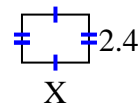
10) area =  $25.792 \text{ cm}^2$



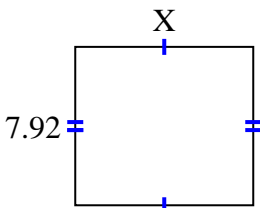
11) area =  $30.0926 \text{ cm}^2$



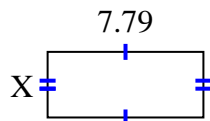
12) area =  $8.04 \text{ cm}^2$



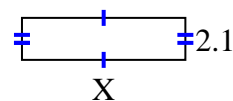
13) area =  $70.488 \text{ cm}^2$



14) area =  $25.5512 \text{ cm}^2$



15) area =  $17.157 \text{ cm}^2$



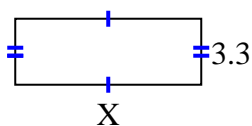
**Answers**

1. \_\_\_\_\_
2. \_\_\_\_\_
3. \_\_\_\_\_
4. \_\_\_\_\_
5. \_\_\_\_\_
6. \_\_\_\_\_
7. \_\_\_\_\_
8. \_\_\_\_\_
9. \_\_\_\_\_
10. \_\_\_\_\_
11. \_\_\_\_\_
12. \_\_\_\_\_
13. \_\_\_\_\_
14. \_\_\_\_\_
15. \_\_\_\_\_

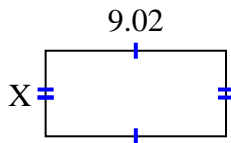


Find the value of X for each figure. Each figure is in centimeters (cm). Not to scale.

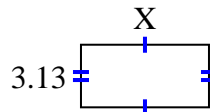
1) area =  $30.69 \text{ cm}^2$



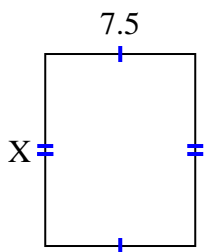
2) area =  $38.6056 \text{ cm}^2$



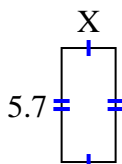
3) area =  $20.032 \text{ cm}^2$



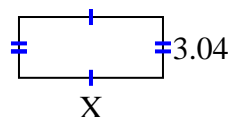
4) area =  $72 \text{ cm}^2$



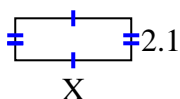
5) area =  $15.39 \text{ cm}^2$



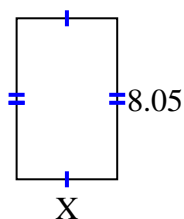
6) area =  $21.888 \text{ cm}^2$



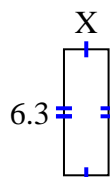
7) area =  $12.18 \text{ cm}^2$



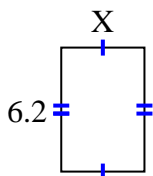
8) area =  $40.4915 \text{ cm}^2$



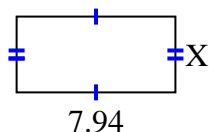
9) area =  $14.049 \text{ cm}^2$



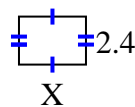
10) area =  $25.792 \text{ cm}^2$



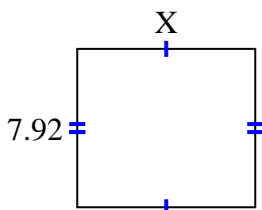
11) area =  $30.0926 \text{ cm}^2$



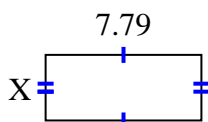
12) area =  $8.04 \text{ cm}^2$



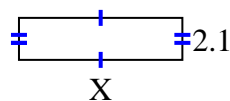
13) area =  $70.488 \text{ cm}^2$



14) area =  $25.5512 \text{ cm}^2$



15) area =  $17.157 \text{ cm}^2$



Answers

1. 9.3

2. 4.28

3. 6.4

4. 9.6

5. 2.7

6. 7.2

7. 5.8

8. 5.03

9. 2.23

10. 4.16

11. 3.79

12. 3.35

13. 8.9

14. 3.28

15. 8.17