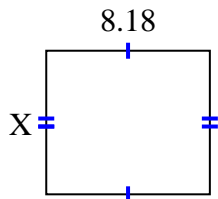


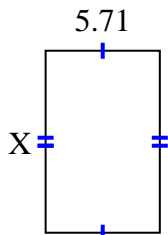


Find the value of X for each figure. Each figure is in centimeters (cm). Not to scale.

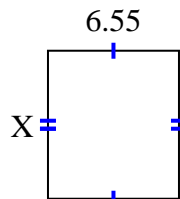
1) area =  $58.7324 \text{ cm}^2$



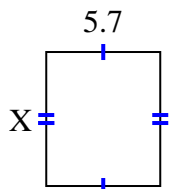
2) area =  $51.961 \text{ cm}^2$



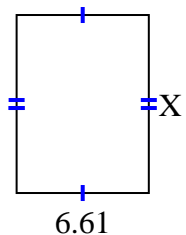
3) area =  $48.47 \text{ cm}^2$



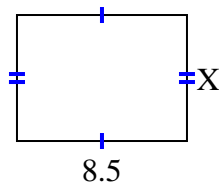
4) area =  $38.19 \text{ cm}^2$



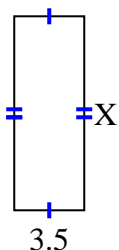
5) area =  $58.829 \text{ cm}^2$



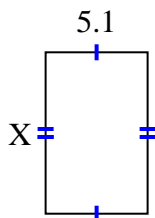
6) area =  $53.55 \text{ cm}^2$



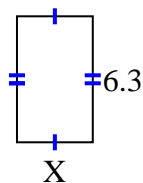
7) area =  $33.95 \text{ cm}^2$



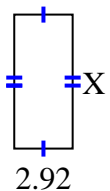
8) area =  $41.157 \text{ cm}^2$



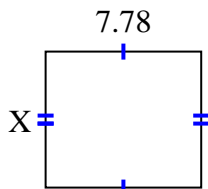
9) area =  $23.877 \text{ cm}^2$



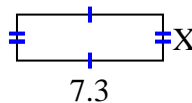
10) area =  $19.564 \text{ cm}^2$



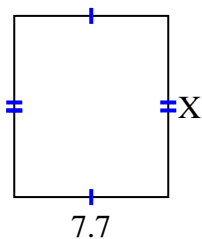
11) area =  $52.904 \text{ cm}^2$



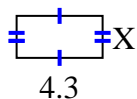
12) area =  $16.79 \text{ cm}^2$



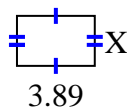
13) area =  $69.762 \text{ cm}^2$



14) area =  $9.03 \text{ cm}^2$



15) area =  $9.725 \text{ cm}^2$



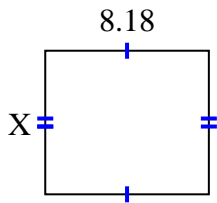
**Answers**

1. \_\_\_\_\_
2. \_\_\_\_\_
3. \_\_\_\_\_
4. \_\_\_\_\_
5. \_\_\_\_\_
6. \_\_\_\_\_
7. \_\_\_\_\_
8. \_\_\_\_\_
9. \_\_\_\_\_
10. \_\_\_\_\_
11. \_\_\_\_\_
12. \_\_\_\_\_
13. \_\_\_\_\_
14. \_\_\_\_\_
15. \_\_\_\_\_

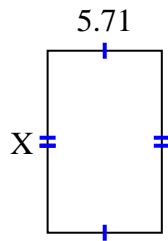


Find the value of X for each figure. Each figure is in centimeters (cm). Not to scale.

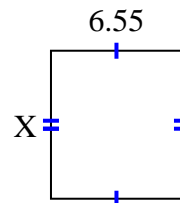
1) area =  $58.7324 \text{ cm}^2$



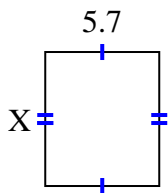
2) area =  $51.961 \text{ cm}^2$



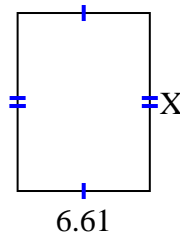
3) area =  $48.47 \text{ cm}^2$



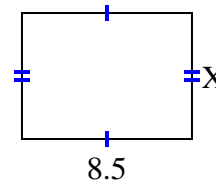
4) area =  $38.19 \text{ cm}^2$



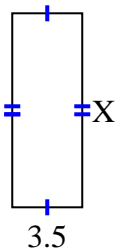
5) area =  $58.829 \text{ cm}^2$



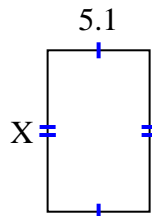
6) area =  $53.55 \text{ cm}^2$



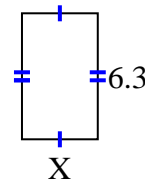
7) area =  $33.95 \text{ cm}^2$



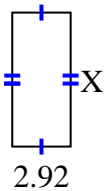
8) area =  $41.157 \text{ cm}^2$



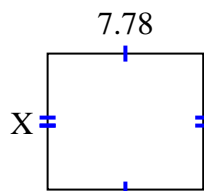
9) area =  $23.877 \text{ cm}^2$



10) area =  $19.564 \text{ cm}^2$



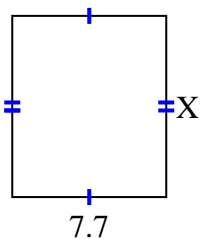
11) area =  $52.904 \text{ cm}^2$



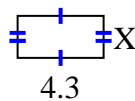
12) area =  $16.79 \text{ cm}^2$



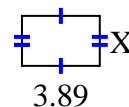
13) area =  $69.762 \text{ cm}^2$



14) area =  $9.03 \text{ cm}^2$



15) area =  $9.725 \text{ cm}^2$



Answers

1. 7.18

2. 9.1

3. 7.4

4. 6.7

5. 8.9

6. 6.3

7. 9.7

8. 8.07

9. 3.79

10. 6.7

11. 6.8

12. 2.3

13. 9.06

14. 2.1

15. 2.5