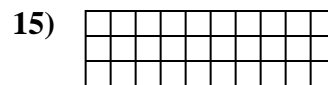
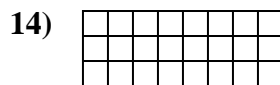
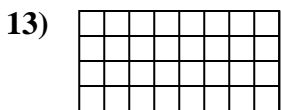
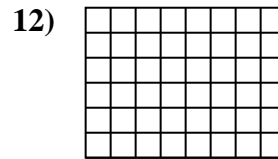


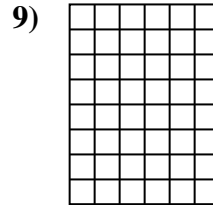
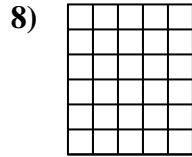
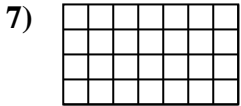

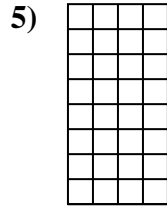
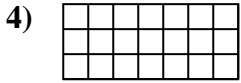
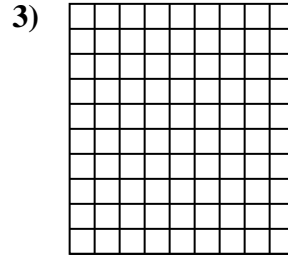
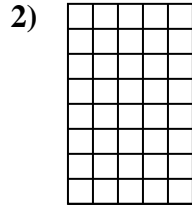
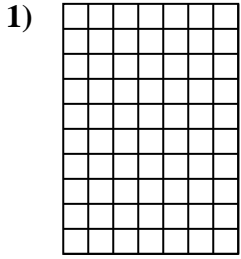




Determine the area. Each **SVGREPLACE** = 1 square unit (u^2).

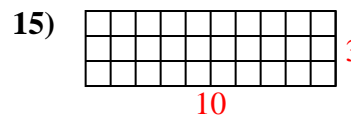
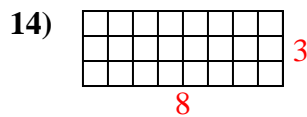
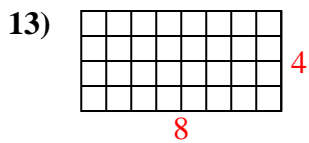
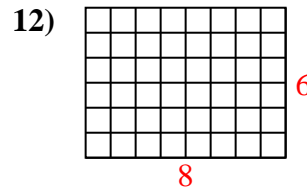
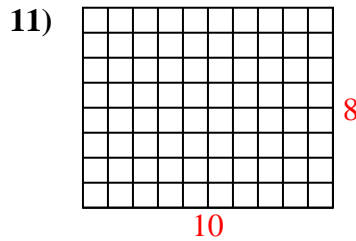
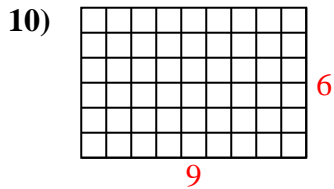
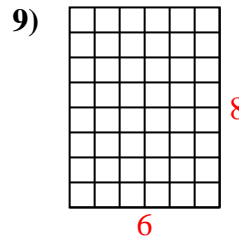
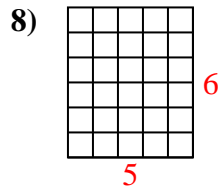
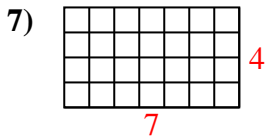
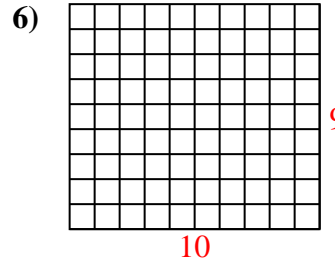
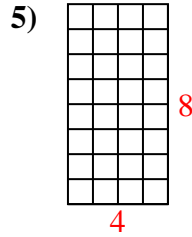
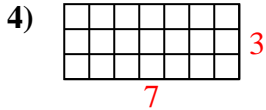
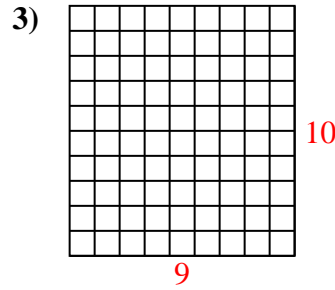
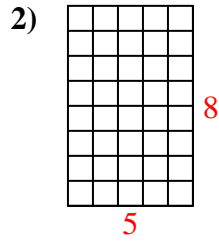
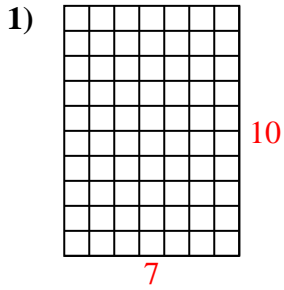
Answers



1. _____
2. _____
3. _____
4. _____
5. _____
6. _____
7. _____
8. _____
9. _____
10. _____
11. _____
12. _____
13. _____
14. _____
15. _____



Determine the area. Each **SVGREPLACE** = 1 square unit (u^2).



Answers

1. 70 u^2

2. 40 u^2

3. 90 u^2

4. 21 u^2

5. 32 u^2

6. 90 u^2

7. 28 u^2

8. 30 u^2

9. 48 u^2

10. 54 u^2

11. 80 u^2

12. 48 u^2

13. 32 u^2

14. 24 u^2

15. 30 u^2