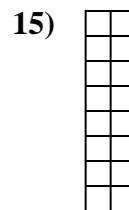

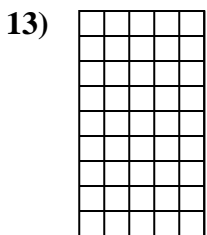
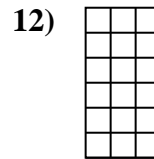
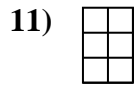
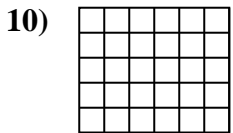


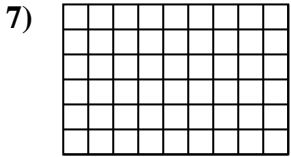

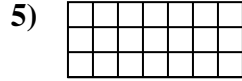
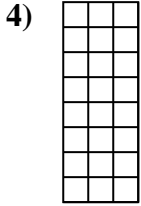
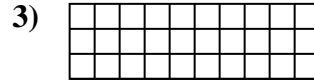
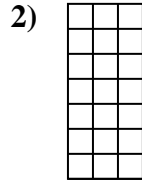





Determine the area. Each **SVGREPLACE** = 1 square unit (u^2).

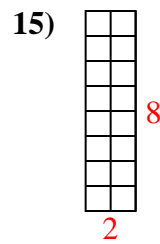
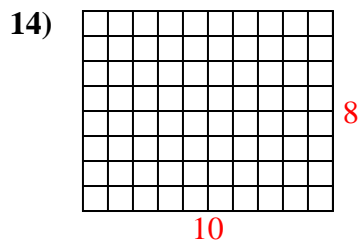
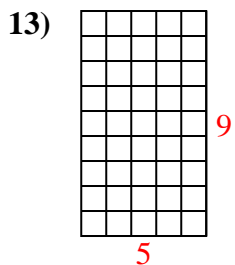
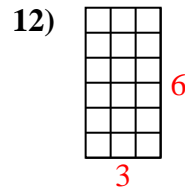
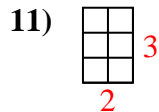
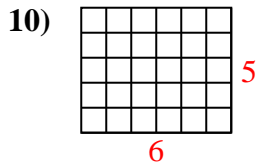
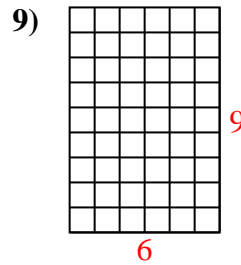
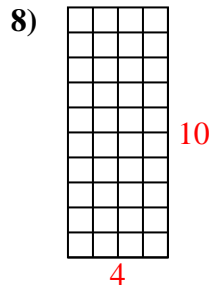
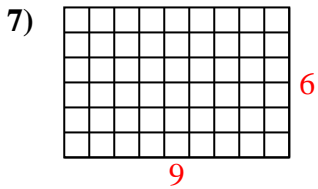
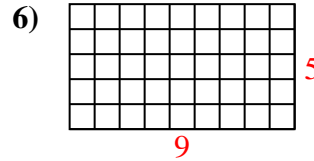
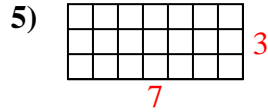
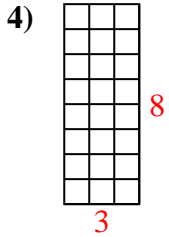
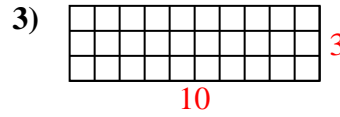
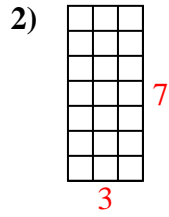
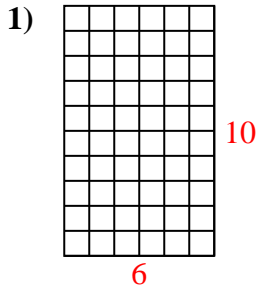
Answers



- 1. _____
- 2. _____
- 3. _____
- 4. _____
- 5. _____
- 6. _____
- 7. _____
- 8. _____
- 9. _____
- 10. _____
- 11. _____
- 12. _____
- 13. _____
- 14. _____
- 15. _____



Determine the area. Each **SVGREPLACE** = 1 square unit (u^2).



Answers

1. 60 u^2

2. 21 u^2

3. 30 u^2

4. 24 u^2

5. 21 u^2

6. 45 u^2

7. 54 u^2

8. 40 u^2

9. 54 u^2

10. 30 u^2

11. 6 u^2

12. 18 u^2

13. 45 u^2

14. 80 u^2

15. 16 u^2