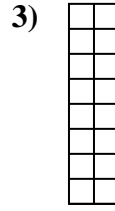
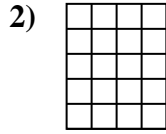
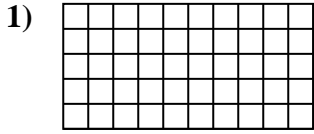




Determine the area. Each **SVGREPLACE** = 1 square unit ( $u^2$ ).

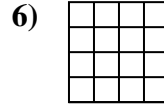

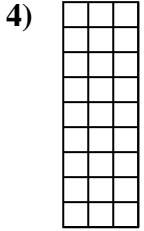
**Answers**



1. \_\_\_\_\_

2. \_\_\_\_\_

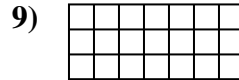
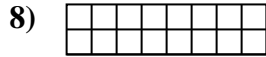
3. \_\_\_\_\_



4. \_\_\_\_\_

5. \_\_\_\_\_

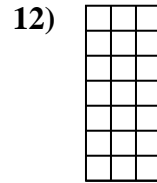
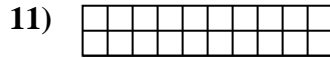
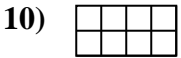
6. \_\_\_\_\_



7. \_\_\_\_\_

8. \_\_\_\_\_

9. \_\_\_\_\_



10. \_\_\_\_\_

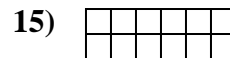
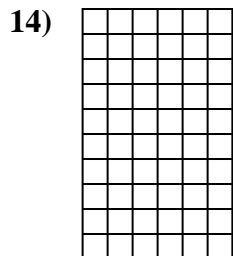
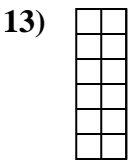
11. \_\_\_\_\_

12. \_\_\_\_\_

13. \_\_\_\_\_

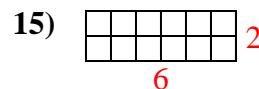
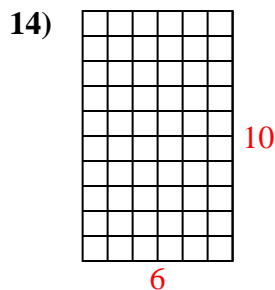
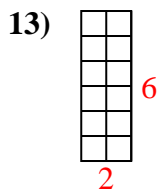
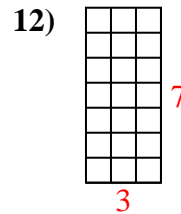
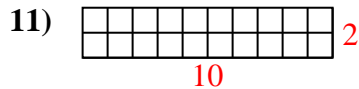
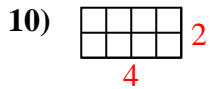
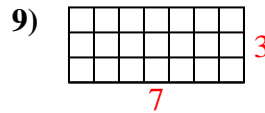
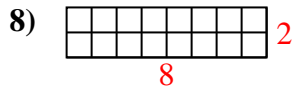
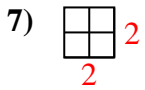
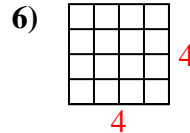
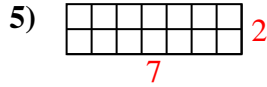
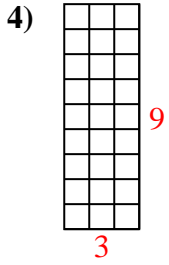
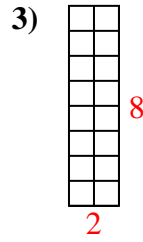
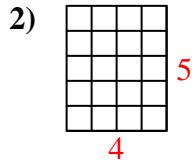
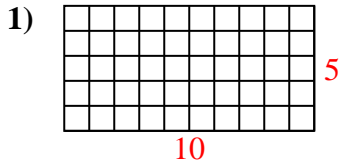
14. \_\_\_\_\_

15. \_\_\_\_\_





Determine the area. Each **SVGREPLACE** = 1 square unit ( $u^2$ ).



Answers

1. 50  $u^2$

2. 20  $u^2$

3. 16  $u^2$

4. 27  $u^2$

5. 14  $u^2$

6. 16  $u^2$

7. 4  $u^2$

8. 16  $u^2$

9. 21  $u^2$

10. 8  $u^2$

11. 20  $u^2$

12. 21  $u^2$

13. 12  $u^2$

14. 60  $u^2$

15. 12  $u^2$