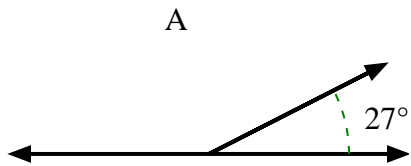


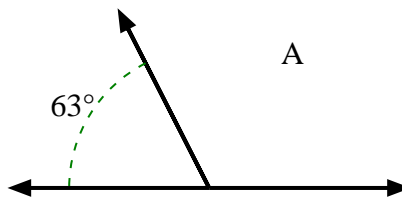


Find the value of 'A' in the set of supplementary angles.

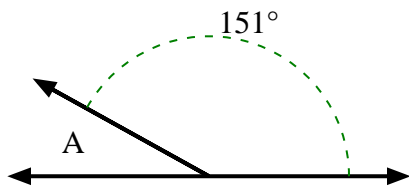
1)



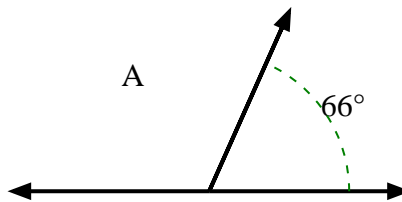
2)



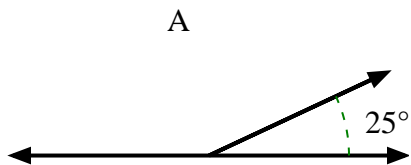
3)



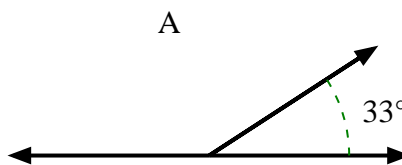
4)



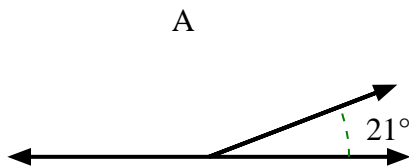
5)



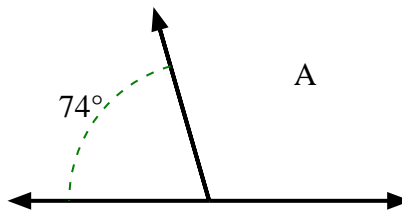
6)



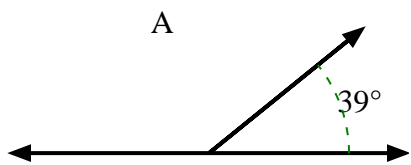
7)



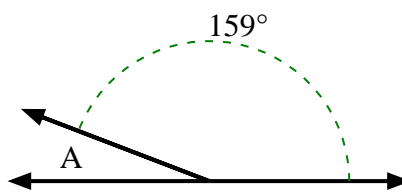
8)



9)



10)



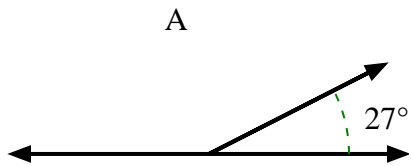
Answers

- 1. _____
- 2. _____
- 3. _____
- 4. _____
- 5. _____
- 6. _____
- 7. _____
- 8. _____
- 9. _____
- 10. _____

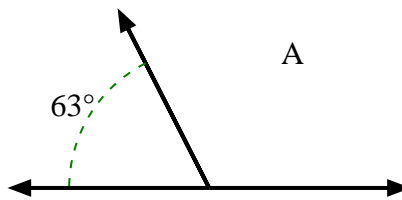


Find the value of 'A' in the set of supplementary angles.

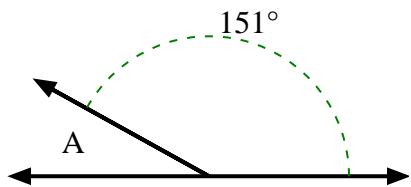
1)



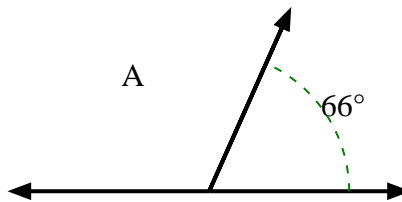
2)



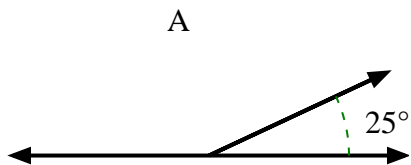
3)



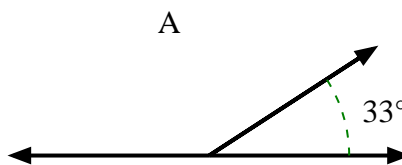
4)



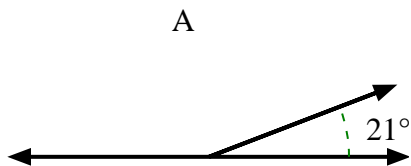
5)



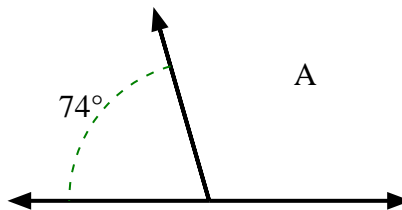
6)



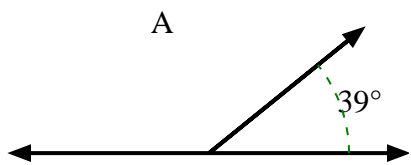
7)



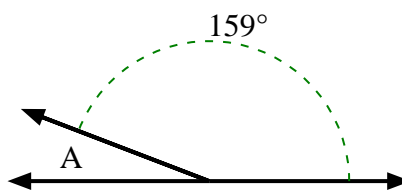
8)



9)



10)



Answers

1. 153°
2. 117°
3. 29°
4. 114°
5. 155°
6. 147°
7. 159°
8. 106°
9. 141°
10. 21°