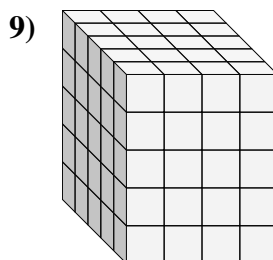
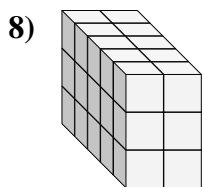
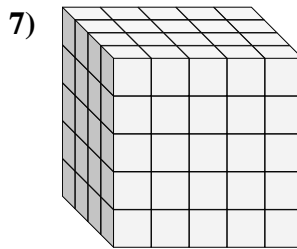
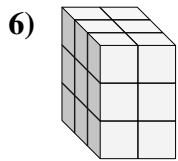
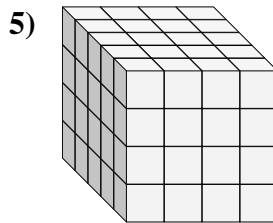
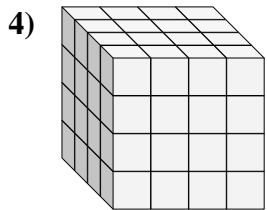
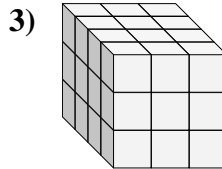
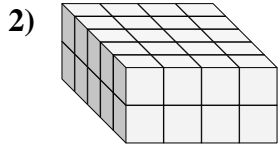
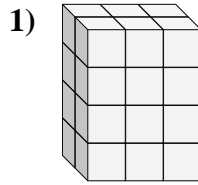
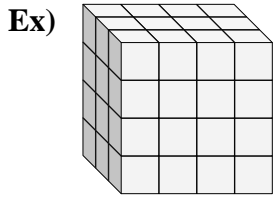




Find the length, width and height of the rectangular prism. Then find the volume.



Answers

Ex. 3 4 4 48

1. \_\_\_\_\_

2. \_\_\_\_\_

3. \_\_\_\_\_

4. \_\_\_\_\_

5. \_\_\_\_\_

6. \_\_\_\_\_

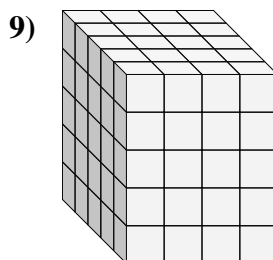
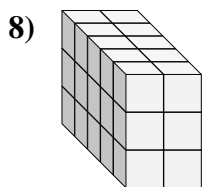
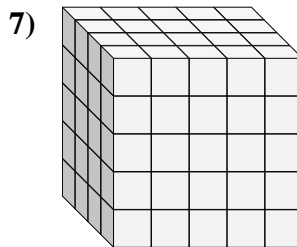
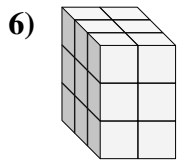
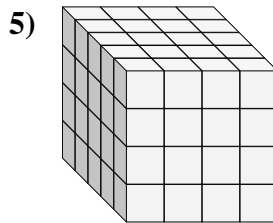
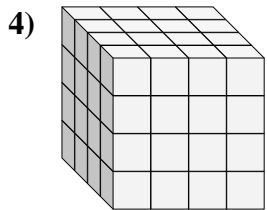
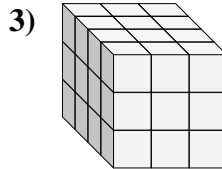
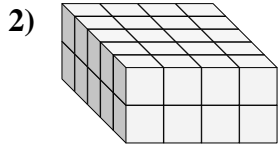
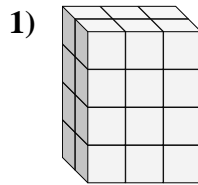
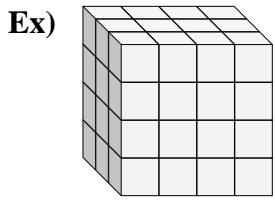
7. \_\_\_\_\_

8. \_\_\_\_\_

9. \_\_\_\_\_



Find the length, width and height of the rectangular prism. Then find the volume.



Answers

Ex. 3 4 4 48

1. 2 3 4 24

2. 5 4 2 40

3. 4 3 3 36

4. 4 4 4 64

5. 5 4 4 80

6. 3 2 3 18

7. 4 5 5 100

8. 5 2 3 30

9. 5 4 5 100