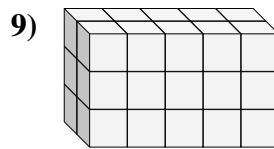
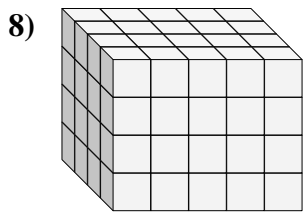
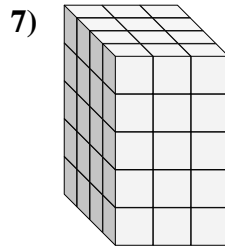
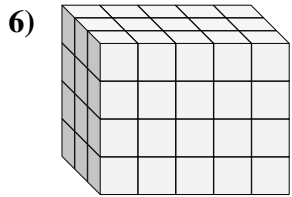
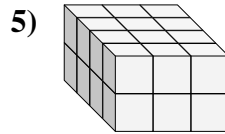
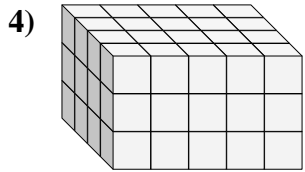
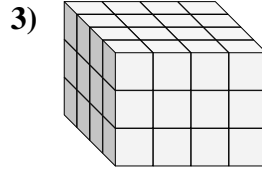
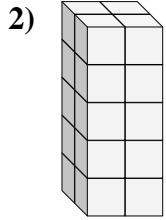
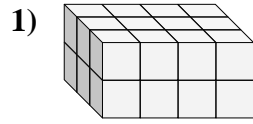
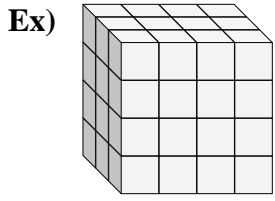




Find the length, width and height of the rectangular prism. Then find the volume.



Answers

Ex. 3 4 4 48

1. \_\_\_\_\_

2. \_\_\_\_\_

3. \_\_\_\_\_

4. \_\_\_\_\_

5. \_\_\_\_\_

6. \_\_\_\_\_

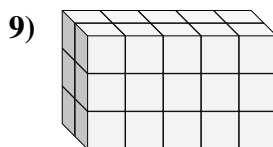
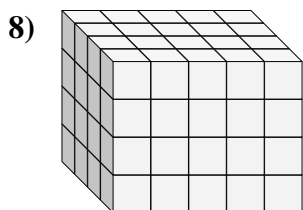
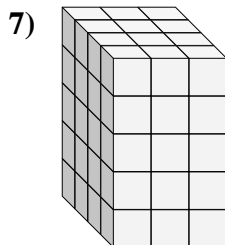
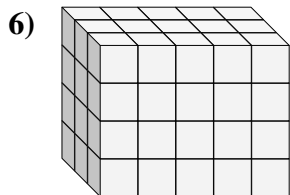
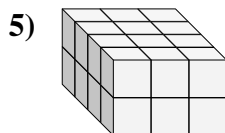
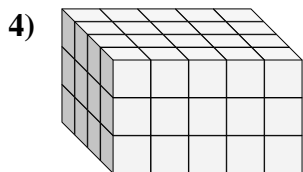
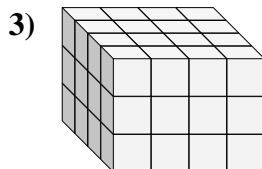
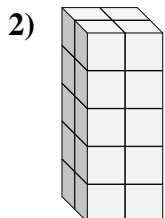
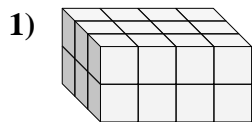
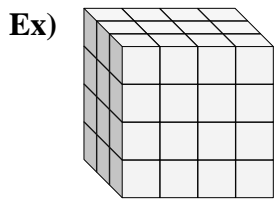
7. \_\_\_\_\_

8. \_\_\_\_\_

9. \_\_\_\_\_



Find the length, width and height of the rectangular prism. Then find the volume.



Answers

Ex. 3 4 4 48

1. 3 4 2 24

2. 2 2 5 20

3. 4 4 3 48

4. 4 5 3 60

5. 4 3 2 24

6. 3 5 4 60

7. 4 3 5 60

8. 4 5 4 80

9. 2 5 3 30